

IELTS

LISTENING

Actual Tests With Answers



EBOOK




AUDIOS



TAPESCRIPTS

JUNE - SEPTEMBER 2021



IELTSMaterial.com

Published by

IELTSMaterial.com

This publication is in copyright. All rights are reserved, including resale rights. This e-book is sold subject to the condition that no part of this e-book may also be copied, duplicated, stored, distributed, reproduced or transmitted for any purpose in any form or by any means, electronic or mechanical, or by any information storage and retrieval system without written permission from the author.

material.com

Preface

As far as you know, IELTS candidates will have only 60 minutes for this IELTS Listening part with a total of 40 questions. Therefore, it is absolutely necessary that you invest time in practicing the real IELTS Listening tests for this module.

Besides Cambridge IELTS Practice Tests series published by Oxford University Press, IELTS Listening Recent Actual Tests with Answers aims to develop both test-taking skills and language proficiency to help you achieve a high IELTS Listening score. It contains IELTS Listening Tests in the chronological order starting from the recent tests and an Answer Key. Each test contains three Listening passages which cover a rich variety of topics and give a lot of practice for a wide range of question types used in the IELTS Exam such as multiple-choice questions, short-answer questions, sentence completion, summary completion, classification, matching lists / phrases, matching paragraph headings, identification of information – True/False/Not Given, etc. When studying IELTS with this e-book, you can evaluate at the nearest possibility how difficult the IELTS Listening Section is in the real exam, and what the top most common traps are. Moreover, these tests are extracted from authentic IELTS bank source; therefore, you are in all probability to take these tests in your real examinations.

The authors are convinced that you will find IELTS Listening Recent Actual Tests extremely helpful on your path to success with the International English Language Testing System.

Don't just trust luck in your IELTS exam – the key is practice!

IELTS Material

<https://ieltsmaterial.com> | admin@ieltsmaterial.com

Table of Contents

Tips and Tricks for different question types	1
Signposting Language	4
Practice Test 1	7
Practice Test 2	17
Practice Test 3	28
Practice Test 4	38
Practice Test 5	46
Practice Test 6	55
Practice Test 7	65
Practice Test 8	72
Practice Test 9	80
Practice Test 10	88
Practice Test 11	97
Practice Test 12	106
Practice Test 13	117
Practice Test 14	126
Practice Test 15	135
Practice Test 16	145
Practice Test 17	154
Practice Test 18	164
Practice Test 19	173
Practice Test 20	182
Practice Test 21	192
Practice Test 22	202
Practice Test 23	210
Practice Test 24	220
Practice Test 25	228
Practice Test 26	237

Practice Test 27	249
Practice Test 28	261
Practice Test 29	272
Practice Test 30	283
Practice Test 31	295
Practice Test 32	303
Practice Test 33	312
Practice Test 34	319
Practice Test 35	328
Practice Test 36	336
Practice Test 37	344
Practice Test 38	353
Practice Test 39	363
Practice Test 40	372
Practice Test 41	379
Answer Keys	388



IELTS Listening Test

Tips and Tricks for different question types

Types of questions in IELTS Listening

- Multiple choice questions
- Map Labelling questions
- Sentence Completion/Note completion/ Table completion/Diagram completion questions
- Match questions

Let's look at the tips and tricks required to answer each question type:

Multiple Choice Questions

While listening to the audio recording there will be a section for multiple-choice questions. The multiple-choice questions are of two types –

- Multiple choice questions with one answer.
- Multiple choice question with two or more answers

There are questions that have one or more answers, for those type of questions, you would have to listen keenly to identify all the answers from the options given.

There are a few things you would have to keep in mind while you're answering multiple-choice questions:



- You will hear all the options that are given to you in the question. You would have to listen to the audio and interpret the answer from what is asked in the question.
- Sometimes, the answer options might be of the same kind to confuse you. For instance, it might all be in the form of dates (15 November, 17 November or 18 November). You would have to read the question and choose the correct answer.
- The words used in the question might not be the exact words that you hear in the audio recording. So, you'd have to pay attention to synonyms and how the words are paraphrased.
- The information provided in the audio recording might not be in the same order as the questions asked, so in order to answer the questions correctly, you should have read the questions beforehand to be aware of what is being asked.
- There would be a lot of distractors in the audio recording. There would be a lot of the same kind of information. Sometimes, the speaker might give us any information and then change it which might be the correct answer. So, do not rush and write down the answer as soon as you hear it.

Map Labelling questions

For these types of questions, you would be provided with a map and you would have to label the places on the map.

There are two types of questions:

1. A list of words might be given to you and you'd have to listen to the recording and choose the correct word that fits the blank on the map.
2. There won't be a list, you would just listen to the audio and identify the place on the map.

There are a few things you would have to keep in mind while you're answering Map Labeling questions:

- There would be directions to a place or some kind of tour.
- Read the instructions before you begin, so that you'll know the word limit of the blanks.
- Description of the location – listen to words that best describe the location given. For example, below the park, next to the supermarket, etc.
- Look at the question numbers – Look at the question numbers and identify the flow of the map. That would help you listen to what's coming next.



- The audio recording would provide you with an understanding of where you are or where you have to begin at. Pay attention to it at the beginning of the recording. Also, listen to nearby places and clues to help find the answers.

Sentence Completion/Note completion/ Table completion/Diagram completion questions

In some of the questions, there will be a gap left in between and the examiner asks you to fill that gap. In order to guess the word correctly, you must have solid grammar skills.

There are a few things you would have to keep in mind while you're answering sentence (and other completion) questions:

- Read the question before you start in order to understand what you should be listening for.
- Try to guess what would come in the blank. It could be a place, a number, year, name or even a specific range of information (such as seasons, climatic conditions)
- The words in the question need not necessarily be the same words you hear in the audio recordings, learn to tune yourself to synonyms of the words in the question.
- Though the questions might be phrased differently from the recordings, the answers should be the exact words you hear in the audio.
- Remember to check the word count, spelling and grammar before you transfer your answers to the answer sheet.

Match questions

These questions are not as common as the other question types but they do occur in the Listening section. These questions have a list of statements that you'd have to match with the options provided. Mostly it would be names, places or dates.

There are a few things you would have to keep in mind while you're answering Match questions:



- Look at the statements and listen keenly to the kind of information that has been provided as options. (i.e) if the options are dates, listen keenly to all the dates in the audio.
- By the side, write down all the information linked to that particular option, it would make it easier for you to find the answer.

Signposting Language

What is a signposting language?

Signposting means using phrases and words to guide the reader through the content of a passage or a recording. In this case, it's an audio recording. With the help of these phrases and words, the listener can anticipate what's next and find the answer.

Signposting examples:

Purpose	Signposting language
Introduction to the lesson/lecture	<ul style="list-style-type: none"> • The purpose of today's lecture is... • The subject/topic of my talk is ... • The lecture will outline ... • The talk will focus on ... • Today I'll be talking about / discussing...



	<ul style="list-style-type: none"> ● Today we are going to talk about... ● The topic of today's lecture is...
<p>Describing the structure of the lecture</p>	<ul style="list-style-type: none"> ● I'm going to divide this talk into a few parts. ● First, we'll look at..... Then we'll go on to ... And finally I'll...
<p>Introducing the topic/ first point / first section</p>	<ul style="list-style-type: none"> ● Let's start by talking about... ● To begin,... ● Firstly,...
<p>Starting an idea or linking to another idea</p>	<ul style="list-style-type: none"> ● Let's move on to... ● Now, let's turn to... ● And I'd now like to talk about... ● Building on from the idea that ..., ● Another line of thought on ... demonstrates that ... ● Having established ...,



To reach the end of the talk / Summing up

- In conclusion, ...
- From the above, it is clear that
...
- Several conclusions emerge from this analysis ...
- To summarise, ...
- I'd like now to recap...




Practice Test 1

Section 1

Questions 1-10

Instructions to follow

 Listen to [Audio 1](#) and answer the questions below.

Questions 1- 4

Instructions to follow

- Choose the correct letter A, B, or C.

- 1** A TFN is a number used
- A exclusively for tax administration
 - B exclusively by individual tax payers
 - C for managing several government services
- 2** Without a TFN, the applicant would be
- A taxed at a higher rate
 - B unable to work
 - C liable for medicare contributions



3 What kind of visa does the applicant have?

- A a visa granting indefinite stay
- B a visa with work rights
- C a student visa

4 A TFN is issued

- A if you change your name
- B only once in a lifetime
- C when you claim a government benefit

Questions 5-10

Instructions to follow

- Complete the form below. Write **NO MORE THAN TWO WORDS AND/ OR A NUMBER** for each answer.



Tax payment Form

Passport#	5
Nationality	Spanish
Postal address	1339 6Hollywell 1517
Contract details	Phone: 09-55775076
Preferred contact person	Martha 7(landlady)
Family name	8
First give name	Farina Maria
Any other names	Mary = 9 name.
Date of birth	10/...../1983
Name of Spouse	N/A



Section 2

Questions 11-16

Instructions to follow

- Complete the notes below. Write **NO MORE THAN TWO WORDS** for each answer.

Keeping kids safe on Internet

- Internet for children-scary but educational
- 'Online Family Norris' blocks **11** _____ and social sites
- But still important to watch children and **12** _____ them
- Keep computer in family room where you can see it
- Children should never use their own name nor give out **13** _____
- Teach teenagers that **14** _____ on the Internet always stay there – and may ruin job prospects
- Watch out for **15** _____
- Teenagers use internet: to socialize or do **16** _____
- Young kids: find help with school subjects

Questions 17-20



Instructions to follow

- Complete the table below. Write **NO MORE THAN TWO WORDS** for each answer.
- Choose **FOUR** answers from the list below and match the correct letter. A-H to Question 17-20.

Which of the following descriptions is appropriate for the websites below?

Descriptions

Websites

- | | |
|---|--------------------------------|
| A sing songs and type for all children. | www.mathtutor.com: 17 _____ |
| B spell words for elementary children | www.spellcity.com: 18 _____ |
| C solve advanced math problems for all children | www.beeb.co/typing: 19 _____ |
| D play spelling games for elementary children | www.coolresource.com: 20 _____ |
| E sing songs with funny words for all children | |
| F extra practice with worksheets for middle-schoolers | |
| G practice & compete for math for all children | |
| H type funny characters for middle-schoolers | |



Section 3

Questions 21-23

Instructions to follow

- Choose the correct letter A, B or C.

21 Ted and Cleo's research results will be presented as a

A poster

B survey

C graph

22 They will select foreign students

A from the language school

B from the business school

C randomly on campus

23 The foreign students will have to

A collate the answers

B rank the answers

C know a lot about the answers.



Questions 24-28

Instructions to follow

- Complete the notes below. Write **NO MORE THAN THREE WORDS** for each answer.

Reasons for studying abroad

Study abroad

- Is the best way to learn a language
- Provides an opportunity to **24** _____
- Allows you to experience another culture first hand
- Helps you learn newly developed **25** _____
- Give you opportunity to make new friends
- Helps you learn about yourself
- Enables you to enrol in various **26** _____
- Increase the value of your **27** _____
- Improves **28** _____ opportunities
- Expands your world view

Questions 29-30



Instructions to follow

- Choose **TWO** letters, A-E.

Which **TWO** nations that most US students failed to locate on a world map?

- A Japan
- B Iran
- C Saudi Arabia
- D Afghanistan
- E Iraq





Section 4

Questions 31-40

Instructions to follow

- Write **ONE WORD ONLY** in each gap.

Charles Wilson Peale

Biography of C.W. Peale

- born in Maryland in 1741 and then became a saddler

- List of his paintings:

+ 'Pitt as a Roman Senator' - elaborate, **31** _____ portrait of British parliamentarian.

+ 'George Washington' - **32** _____ portrait of many Washington paintings

+ 'The Peale Family' - family portrait shows exuberance and **33** _____

+ 'The Staircase Group' - displayed in a/an **34** _____, double portrait of sons (Raphaelle & Titian)

+ 'Rache Weeping' - wife and dead **35** _____ - macabre

+ 'James Portrait' - brother James in darkness but face illuminated by a **36** _____

Other fields of expertise

- he was not only a painter but also a politician, scientist and **37** _____

- he worked with T. Jefferson on the polygraph which was a desk that could be used for copying a/an **38** _____



- he wrote academic papers on different topics and tried to make movies spectacles and a velocipede (a kind of **39**_____)

- he helped unearth the skeleton of a mastodon which was the best **40**_____ in his museum.





Practice Test 2

Section 1

Questions 1-10

Instructions to follow

🔊 Listen to [Audio 2](#) and answer the questions below.

Questions 1 – 3

Instructions to follow

- Complete the form below.
- Write **NO MORE THAN TWO WORDS AND/OR A NUMBER** in each gap.

Children's Librarian - Volunteer

Name: Tessa Bridges

Address: 51 **1** _____ Drive

Area: Northwood

Postcode: **2** _____

Place of study: studying at Northwood Polytechnic



Major: **3** _____

Career choice: children's author

Question 4 – 6

Instructions to follow

- Write **NO MORE THAN TWO WORDS** in each gap.

Work History

Length of service	Employer/Place	Position
2 years	4	babysitter
1 year	Senior high school	5
3 months	Ace sports Academy	6
Ongoing	Northwood Hospital	Official visitor



Question 7 – 10

Instructions to follow

- Write the correct letter, A, B or C, next to Questions 7 – 10

Is Tessa available for work at the times listed below?

Descriptions

- A She is definitely available for work at these times
- B She might be available for work at these times
- C She is not available for work at these times

Times:

Weekdays: 7

Evenings: 8

Weekends: 9

School Holidays: 10



Section 2

Questions 11-20

Questions 11 - 17

Instructions to follow

- Complete the notes below.
- Write **NO MORE THAN TWO WORDS** in each gap.

Be Well Online Program

(interactive website with resources to help reach health - ¹¹_____)

Wellness register:

- + easy online health check
- + keep a record of progress
- + get ¹²_____ on present health condition
- Active Health Agenda (8-week plans taking into account age & lifestyle):
 - + diet and workout
 - + weight loss
 - + ¹³_____ management
 - + healthy aging



+ time-saver workouts

- Membership:

+ allow us of various tools and **14** _____ online

+ give access to articles recipes, exercises

- Active Sport (individual programs in accordance with personal objective

and **15** _____):

+ warm-up, workout, weekly training e.g. marathon, swimming, etc.

- Active Care (for specific health requirements):

+ **16** _____

+ Glucose Management

+ Heart Health

+ **17** _____ care

Question 18 - 20

Instructions to follow

- Complete the sentences below
- Write **ONE WORD ONLY** in each gap.

BeWell Coaching Course

- Health professionals will help people make long-lasting **18** _____.



- Coaching is for people with **19** _____ diseases.
- Coaches help people make a/an **20** _____ and keep to it.





Section 3

Questions 21-30

Questions 21-27

Instructions to follow

- Choose the correct letter A , B or C.

21 Clare and Grant must arrange a competition which will especially interest

- A School students
- B Open day committee members.
- C Open day visitors.

22 What will the prize be ?

- A an iPod.
- B an iPad.
- C an iPhone

23 Who will be responsible for buying the prize ?

- A a university department.
- B Clare and Grant.
- C Rick Smith.

24 What is the important aspect for entrants in the competition ?



- A fun.
- B guesswork.
- C ability.

25 In the science fiction series on television, what is on the other side of the gateway?

- A a portal.
- B a new world of education.
- C a different time period.

26 Who will judge the competition?

- A the Committee
- B the public
- C the Open Day visitors

27 Who will build the portal?

- A college graduates from the school
- B college students from the school of Engineering
- C graduate students from the Engineering Department

Questions 28-30

Complete the chart of the Open Day Competition

**Instructions to follow**

- The flow chart below has three gaps.
- Write **ONE WORDS ONLY** in each gap.

Open Day Competition

Step 1 Find 'Portal photos **28**.....' on campus on Open Day



Step 2 Be photographed stepping through the Portal



Step 3 Give contact **29**..... (name & email address)



Step 4 Visit the University Facebook page and **30**.....



Section 4

Questions 31 - 40

Instructions to follow

- Complete the notes below.
- Write **ONE WORD ONLY** in each gap.

Agriculture and Environment

- **31** _____ production - biggest problem in today's world
- agriculture is important for jobs, exports and foreign exchange

- Agriculture' means:

+ growing crops

+ raising animals

+ **32** _____

+ **33** _____

- agriculture must be sustainable: old methods, and new, chemical methods are all unsustainable □ the **34** _____ of biodiversity

- biotechnology □ GM or GE □ bio-prospecting (bio-piracy) i.e., large companies steal samples of native plants to use the **35** _____ material for their own crop

- **36** _____ change is responsible for less goods and higher prices



- farmers need to be educated but governments also need to pay attention to **37** _____ development in order to protect the environment and re-nourish the soil
- experts from around the world could come together to form an international **38** _____ to observe farm systems aiming to prevent pollution and erosion and encourage safe procedures that are also **39** _____
- creating the project's **40** _____ would be very expensive and more money would be needed for the monitoring system but it could solve the problem.



Practice Test 3

Section 1

Questions 1-10

Instructions to follow

- Listen to [Audio 3](#) and answer the questions below.

Questions 1-5

Instructions to follow

- Complete the notes below. Write **NO MORE THAN ONE WORDS AND/OR A NUMBER** for each answer.

Hotel Armitage Booking Form

Name: Kelvin Jones

Booking number: ① _____

Vehicle registration ID: HUV 3331

Date of arrival: ② _____

Room number: 501

Type of room: ③ _____



Extra requirements: has 02 **4** _____

Identification: driver's licence

Length of stay: **5** _____





Questions 6 - 10

The map has five gaps. Choose the correct letters, A-H, and move it into the suitable place on the map.
You are here

Armitage Hotel
Gorse Lane
N
Hobb St.
Vickers St. West
Vickers St. East
Mill St.
Kitchen St.
King St.
Richard
Lans' Lane

6
7
8
9
10

List of places:
A Chancery Chambers
B Bank
C Park
D Café
E Rebel Hostel
F Bookshop
G Church
H Restaurant

m

6 _____

- A B C D E F G H

7 _____

- A B C D E F G H

8 _____



A B C D E F G H

9 _____

A B C D E F G H

10 _____

A B C D E F G H





Section 2

Questions 11-13

Instructions to follow

- Choose the correct letter A, B or C.

11 The SIS is

- A a non-profit making organization
- B owned by an international corporation
- C a collective owned by ordinary people

12 The SIS

- A has no fees
- B has low fees
- C avoids paying fees

13 SIS accounts with the same customer number

- A will be charged for setting up automatic payments
- B attract no service charges
- C must have a minimum balance

Questions 14-20



Instructions to follow

- Complete the table below.
- Write **NO MORE THAN TWO WORDS AND/ OR A NUMBER** for each answer.

Saving Options			
Savings account	Minimum Balance	Interest information	Access
Internet account	None	Earn good rate from first dollar. Calculated daily and paid monthly	Via internet, TXT, telephone, No account or 14 _____ fees
Stairs saver	None-but higher rates for bigger balances	3 tier plus 15 _____. Calculated daily and paid monthly	Unlimited withdrawals but better to limit to once a month
16 _____	None	One interest rate, calculated daily and paid on 17 _____	Anytime-no penalty for withdrawals
INVESTMENT OPTIONS			
Investment account	Minimum deposit	Interest information	Access
Term deposit <ul style="list-style-type: none"> • Safe and 18 _____ low risk 	\$1000	Calculated daily and pair monthly, quarterly, or at maturity	Only at maturity



<p>19 _____</p> <ul style="list-style-type: none"> Longer term but better returns 	\$5000	Calculated daily and compounded or paid out quarterly	Only at maturity
Retirement fund	A certain percentage of 20 _____ before tax	Different levels of risk and return	At 60





Section 3

Questions 21 -23

Instructions to follow

- Choose the correct letter A, B or C.

21 Julia and Bob's science project is due

- A next week
- B next month
- C next year

22 All the materials they use must be

- A recycled
- B inexpensive
- C available in the lab

23 A Cartesian diver was called a devil by some people because

- A they saw it was black
- B they believed in the supernatural
- C they wanted the inventor to be famous

Questions 24-25



Instructions to follow

- Choose **TWO** letters A-E.

Julia and Bob find some of the items they need

- A in Bob's pencil case and the recycling bin
- B in the cafeteria and the Resource Centre
- C in the shop and Julia's locker
- D in Bob's bag and his pocket
- E in Tara's packet and on the floor

Questions 26-30

Instructions to follow

- Complete the notes below.
- Write **NO MORE THAN TWO WORDS** for each answer.

Assembly

Step 1: fold **26** _____ in hall

Step 2: use **27** _____ to secure the ends

Step 3: attach **28** _____ to diver

Step 4: fill bottle with water and replace **29** _____

Step 5: Compression causes diver to sink because diver becomes **30** _____



Section 4

Question 31 – 40

Instructions to follow

- Write **ONE WORD ONLY** in each gap.

Volcanic Activity on Mount Pinatubo

- one of the largest volcanic activity occurred in the Philippines in 1991
- 31 for Mt. Pinatubo's first eruption was from about 5,500 years ago
- the Mt. Pinatubo eruption in 1990 triggered by a deep-focus 32
- the volcanologists began to conduct a/an 33 of Mt. Pinatubo
- 34 fell on the local villages on 2nd April
- a 'Level 5' alert means an eruption in 35
- several Mt. Pinatubo eruptions were caused by the 36 of the summit
- a tropical storm was passing by and 37 associated with the cinders in the air to form a substance called 'tephra' which fell on the 38 of homes causing them to crush hundreds of people
- large amounts of sulphur dioxide gas were emitted, which combined with water and 39 to make sulphuric acid causing ozone depletion above antarctica
- the overall effect of the cloud from this great eruption was the lowering of global 40



Practice Test 4

Section 1

Questions 1-5

Instructions to follow

- Listen to [Audio 4](#) and answer the questions below.
- Complete the notes below.
- Write **NO MORE THAN TWO WORDS**.


 Tauber Insurance Company
 Insurance type: vehicle

Policy#: ① _____

Make and model: Masda Marvel

Engine size: ② _____

Name: Lisa Marie Haethcote

Date of birth: ③ _____ 1955

Password: ④ _____

Change valuation? Yes

Reduce value to: ⑤ _____ \$



Questions 6-10

Instructions to follow

- Complete the notes below.
- Write **NO MORE THAN TWO WORDS**.

Notes to be added to policy:

Add new driver:

- Name: Samuel Michaels
- Age: 28
- Relationship to main driver: 6 _____
- Reason: 7 _____

New driver provided:

- Verified 8 _____ of driver's licence
- Clean driving 9 _____

Start date:

- 10 _____ cover for 2 weeks from today
- Full cover when paperwork approved



Section 2

Questions 11-16

Instructions to follow

- Choose the correct letters. A, B or C.

11 People can become more confident by

- A getting involved more face-to-face interviews.
- B using positive thought patterns
- C playing many types of sports.

12 More confidence results in

- A a better performance.
- B high scores in any exam.
- C a better mood.

13 A good strategy to build confidence is to

- A get rid of negative memories of mistake
- B only concentrate on successful results.
- C get rid of failures and concentrate on positive outcomes.

14 Frequent rehearsal of positive imagery is



- A to overcome obstacles during presentations.
- B to get high marks.
- C necessary for success.

15 In order to look confident, people have to

- A have a mental positivity.
- B have either mental positivity or body language.
- C act in a confident manner.

16 Setting and achieving goals results in

- A bringing about an experience of happiness.
- B brain activity that puts more pressure.
- C less time for recreational activities.

Questions 17-20

Instructions to follow

- Complete the flow chart below.
- Write **NO MORE THAN TWO WORDS** for each answer.



Goal Setting

Set an **17** _____ goal.

Decide on incentives

18 _____ steps along the way

Gather **19** _____

Take the first step.

Keep a **20** _____



Section 3

Questions 21 – 30

Questions 21 - 23

Instructions to follow

- Complete the sentence below
- Write **NO MORE THAN TWO WORDS AND/OR A NUMBER** in each gap.

- The English Literature in the **21** _____ will be included in the conference.
- The conference has **22** _____ panel discussions.
- The aim of a panel discussion is to present various **23** _____.

Questions 24-30

Instructions to follow

- Complete the notes below. Write **ONE WORD ONLY**.

Procedure (dealt with by prof.)

- Identify topic of interest involving some **24** _____
- Invite penalties
- Select a **25** _____
- Decide on **26** _____

Guidelines



- Introduction of topic and speakers-get **27** _____ information from prof.
- Each panelist speaks for 2 mins-make a hand **28** _____ to show time is up
- Primary function = panel discussion (about 40 mins)
- Close discussion and give **29** _____
- Secondary function = question time (about 15-20 mins)
- At end of question time panel is thanked and audience shows appreciation by **30** _____





Section 4

Questions 31- 40

Instructions to follow

- Complete the notes below. Write **ONE WORD ONLY** for each answer.

Hydropower

- Renewable-constant source of **31** _____ from natural hydrologic cycle
- **32** _____ -90% of hydro energy-electric

Clean

- no air or **33** _____ pollution
- **34** _____ and durable-simple to operate
- Flexible-can start and adapt quickly to meet demand-leads to **35** _____ of power supply

Operation

- Water passes through an **36** _____ gate from reservoir to a channel
- Water flow makes the turbine rotate quickly, which then causes **37** _____ to rotate in order to produce electricity
- Power **38** _____ are used to supply electricity to every corner of the cities
- Hydroelectric dams should be built across rivers with both sufficient head and **39** _____ flow
- There needs to be a balance between the needs of **40** _____ living in



Practice Test 5

Section 1

Questions 1 – 10

Instructions to follow

🔊 Listen to [Audio 5](#) and answer the questions below.

Questions 1 – 6

Instructions to follow

- Complete the form below.
- Write **NO MORE THAN TWO WORDS AND/OR A NUMBER** for each gap.

Request for Commercial Lease

Name: Mr. R. Rich

Company: ICT **1**

Preferred location: in the downtown near **2** centre

Size: **3**m²



Number of staff: 4

Special needs: 5 access,
parking for mobility scooter

Moving date: during month of 6

Questions 7 – 10

Instructions to follow

- Complete the note below
- Write **ONE WORD AND/OR A NUMBER** in each group.

List of Requirements

- Good lift access
- Large lobby
- Removal of some 7
- 8 too small - make bigger
- Change office near entry to storeroom
- New paintwork, lights, blinds, 9
- Minimum length of lease 10

(with rights of renewal)



Section 2

Questions 11 - 20

Questions 11 - 14

Instructions to follow

- Complete the summary below.
- Write **ONE WORD ONLY** in each gap.

Advice for Further Study

After high school some people travel, find a/an¹¹..... or take on temporary work to have¹²..... for further education. If you decide to go straight on to more study, to start with you should think about your career goals. You will also need to consider whether your¹³..... will help you eventually get a good work. After course selection, you should decide on study goals: how many papers to take and what¹⁴..... you want to achieve.

Questions 15 - 20

Instructions to follow

- Write the correct letter A, B or C. next to Questions 15-20.

Where would you go for information or resources?

List of destinations

A from an Internet website

List of places

Higher Education Providers:¹⁵.....



- B** in the form of personal
- C** advice or guidance
- D** on the availability of
- E** financial assistance

Apprenticeship Scheme:	16
School Careers Advisor:	17
Career Services:	18
Student Support Association:	19
Libraries:	20





Section 3

Questions 21 - 30

Questions 21 - 22

Instructions to follow

- Choose **TWO** letters, A-E.

Which **TWO** scopes of the research are mentioned in the talk?

- A IM addiction's presence
- B types of symptoms
- C the symptoms can be predicted
- D the relationship between schoolwork and symptoms
- E IM addiction prediction

Questions 23 - 25

Instructions to follow

- Choose **THREE** letters, A-F.

Which of the **THREE** following symptoms correctly describes IM addiction?

- A want to control everything



- B have lots of circle of friends
- C think of other things
- D break free from confinement or control
- E unable to control themselves
- F fear of the dark

Questions 26 – 30

Instructions to follow

- Complete the notes below.
- Write **ONE WORD ONLY** in each gap.

Instant Messaging Addiction in Teenagers

Predictors:

- 26.....
- 27.....

- high level users who are not addicts tend to use IM to chat with friends rather than 28.....

Conclusions:

- differences exist between high use and addiction but both have 29..... effect on academic scores

Recommendations:

- parents ought to take notice of teenagers' IM usage and offer suitable 30..... and control their use of IM



Section 4

Questions 31 - 40

Questions 31 - 36

Instructions to follow

- Choose the correct letters. A, B or C.

31 Where are the British Isles situated?

A in the eastern part of Asian continent

B in the eastern part of Atlantic region

C in continental Europe

32 The Venn diagram is being used to help students

A know about the British Isles relations.

B see the geographical terminology.

C see the difference between geography and politics

33 The British Isles includes

A only Great Britain and Ireland.

B Great Britain and other smaller islands nearby.

C the largest island of Ireland and others.

34 Which islands are in the same constitutional monarchy?



- A United Kingdom of Great Britain and Northern Ireland
- B Great Britain and other nearby islands
- C United Kingdom of Great Britain and Isle of Man

35 The United Kingdom includes

- A one portion of the island of Ireland.
- B only the Northern Ireland.
- C only the Republic of Ireland.

36 The British Islands contain

- A the United Kingdom and the Channel Islands.
- B only the United Kingdom and Great Britain.
- C almost islands of the British Isles.

Question 37 – 40

Instructions to follow

- Write **ONE WORD ONLY** in each gap.

British Isles

- There is 37 with language also when it comes to describing the British Isles.
- The northernmost point of Ireland belongs to the Republican 38 of Donegal.



- A Welshman will be upset if you call him _____ **39** _____

- The former British Empire is now known as the Commonwealth of Nations to avoid recalling previous _____ **40** _____ relationships.





Practice Test 6

Section 1

Questions 1- 10

Instructions to follow

🔊 Listen to [Audio 6](#) and answer the questions below.

Questions 1-5

Instructions to follow

- Choose the correct letter A, B or C.

1 What did Nadia buy at the bookshop?

- A newspaper
- B novel
- C crossword puzzles

2 Thomas is interested in the play about

- A a hunter
- B a pirate



C a doctor

3 The couple in the bookshop were discussing

A a funny play

B a smooth play

C a boring play

4 How does Nadia want her coffee?

A sweet and black

B with milk

C black with no sugar

5 What kind of muffin does Nadia want?

A plain

B berry

C chocolate

Questions 6-10

Instructions to follow

- Complete the notes below
- Write **ONE WORD AND/OR A NUMBER** in each gap

List of Attractions



The Tower of London: they want to see the Crown **6**

The **7** : they will not visit

Westminster : Nadia wants to take **8** at this spot

The British Museum: they might visit it on day **9** of the trip

Buckingham Palace: they will definitely visit, but Nadia wants to visit the **10** _____ spot first.





Section 2

Question 11 – 20

Question 11 – 14

Instructions to follow

- Complete the sentences below.
- Write **ONE WORD AND/OR A NUMBER** in each gap.

- The museum opens on Thursday morning at **11**.....
- It costs **12**..... to hire a multi - media guide.
- Visitors can leave their coats and bags at **13**.....
- It costs 1 pound to leave each **14**..... there
- Visitors can buy a cup of tea at the **15**..... cafe.

Question 16 – 20

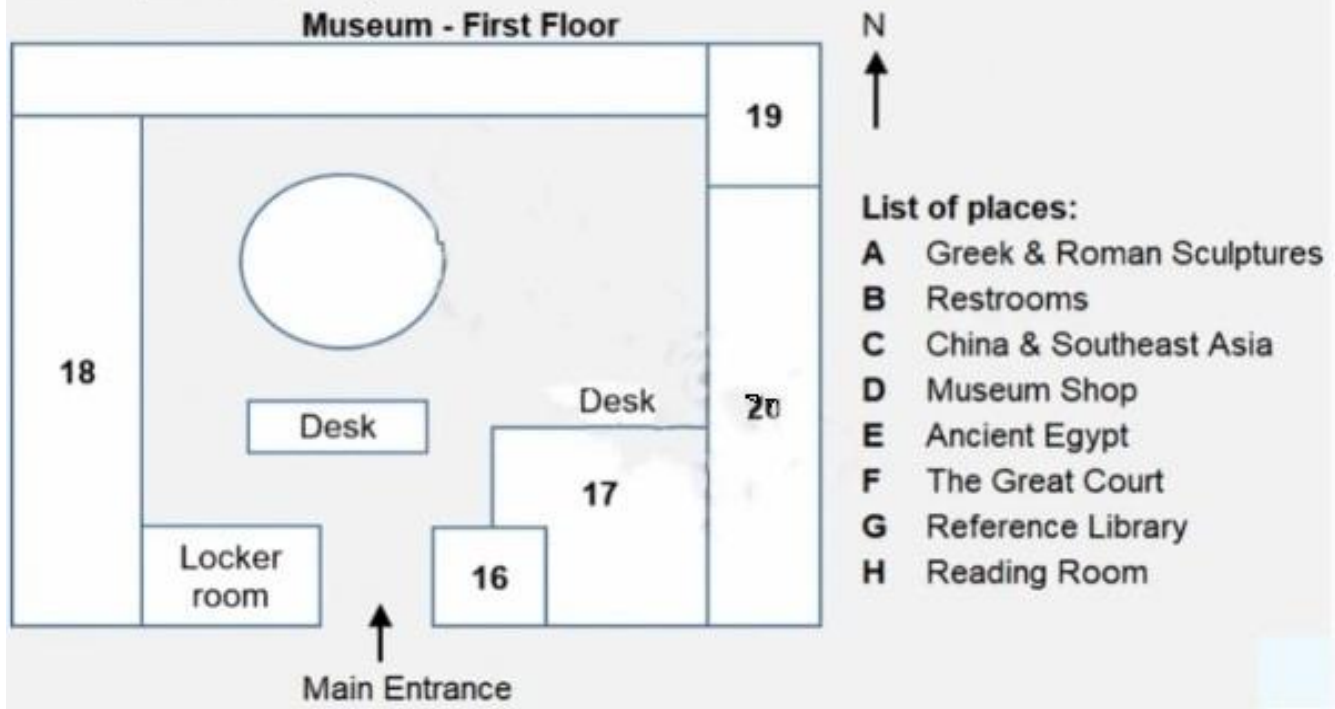
Instructions to follow

- Choose the correct letters, A - H, and move it into the suitable place on the map.

The plan has five gaps.



suitable place on the map.



16 _____

- A B C D E F G H

17 _____

- A B C D E F G H

18 _____

- A B C D E F G H

19 _____



- A
- B
- C
- D
- E
- F
- G
- H

20

- A
- B
- C
- D
- E
- F
- G
- H





Section 3

Questions 21-30

Instructions to follow

- Complete the notes below. Write **NO MORE THAN TWO WORDS** for each answer.

Research Methodology

- Use scientific method based on empirical evidence (= **21** _____ -)
- Find a research problem or question
 - + a commonly held belief e.g. lack of sleep has negative impact on test **22** _____
 - + Review the literature
 - + an everyday problem e.g. research different memorization **23** _____
- Define your variables and develop a hypothesis
- Conduct **24** _____ research
 - + Books, journals, online databases and websites
 - + Make notes and create **25** _____
- Select an experimental design
- Standardize your **26** _____
 - + Compare like with like
- Use different **27** _____



- + Random sample = sample from same group
- + Stratified random sample = select from subsets with different **28** _____
- Analyse the results
- + Use **29** _____ methods (to be covered next week)
- Write up and communicate results
- + **30** _____ and of paper is important; tips for writing





Section 4

Questions 31- 40

Question 31 – 34

Instructions to follow

- Choose **FOUR** answer; from the list below and write the correct letter. A-G . next to Questions 31-34.

Which of the following food cereal is appropriate for its production below?

List of production

- A 160 million metric tons
- B 600 million metric tons
- C 90 million metric tons
- D 300 million metric tons
- E 516 million metric tons
- F 560 million metric tons
- G 900 million metric tons

List of food cereal

- rice: 31
- wheat: 32
- coarse grain: 33
- cereal grown for oil: 34

Questions 35 - 40



Instructions to follow

- Complete the summary below.
- Write **ONE WORDS ONLY** in each gap.

Production of Rice

Rice gives more food ³⁵_____ per hectare than other cereal crops and production has increased over 100% in recent years because of better yields. Land area has only increased by 30% due to the need for wet land so availability of land is quite limited by ³⁶_____ type and ³⁷_____ supply. The dry-land variety gives poorer yields and poorer ³⁸_____. No weed killers have been developed yet that do not harm the main crop. Heavy machines are unable to work in paddy fields so most rice is still grown by ³⁹_____. China and ⁴⁰_____ are the two most leading producers of rice.



Practice Test 7

Section 1

Questions 1-10

Instructions to follow

- 🔊 Listen to [Audio 7](#) and answer the questions below.
- Complete the form below.
- Write **NO MORE THAN TWO WORDS OR A NUMBER** in each gap.

Short stay accommodation

Family name: Mackinlay

First name: 1 _____

Country of origin: 2 _____

Date of arrival: 3 _____

Number of tenants: 4 _____

Length of stay: 2 weeks

Purpose of visit: for 5 _____

Type of accommodation: 6 _____

Number of bedrooms: 1 or 2

Car parking: off street and 7 _____



General area: near the beach

Other requirements: near the **8** _____

Name of town: **9** _____ Beach

Price range: up to \$ **10** _____ a week





Section 2

Questions 11- 20

Questions 11 -14

Instructions to follow

- Choose the correct letter A, B or C.

11 Refreshments will be served

A at the front counter

B in the lobby

C at the back of the hall

12 Nick Noble advertise

A on the radio

B on a billboard

C in the newspaper

13 The original number of founding members was about

A 12

B 20

C 200

14 The club provides activities primarily for reasonably fit



- A males up to 75
- B females with young children
- C males and females of any age

Questions 15-20

Instructions to follow

- Complete the table below.
- Write **NO MORE THAN ONE WORD AND/ OR A NUMBER** for each answer.

Activity	Days	Duration	Contact person
15 _____	Tuesday & Saturday	About 3-5 hours	Coordinator
16 _____	Thursday & Sunday	Up to 3 hours	17 _____
Wanderers	Sunday	18 _____	Leader
19 _____ weekends	Saturday & Sunday	All weekend	20 _____



Section 3

Questions 21- 30

Questions 21-26

Instructions to follow

- Complete the notes below.
- Write **NO MORE THAN TWO WORDS** for each answer.

Globalization and educational change

- New Code **21** _____
- Aims-analysis of educational problems arising from globalization
- Chance to research and **22** _____ progress of educational change
- Investigate influence of culture and **23** _____ structure on education
- Argue advantages and disadvantages of reorganization of public education in own country with regard to globalization
- Consider the **24** _____ of globalization on diversity of national curricula across richer and poorer countries
- Assignment #1 = power point presentation (ungraded) + written review **25** _____
- Assignment #2 = take part in **26** _____



Questions 27-30

Instructions to follow

- Choose **FOUR** answers from the list below and write the correct letter. A-H . next to Questions 27-30

Which of the following title is appropriate for its author below?

Titles

Authors

A Globalisation & Knowledge Policy (2010)

Tower: _____ **27**

B Competitive Education (2009)

Elliot: _____ **28**

C Education & Globalisation (2009)

Brown: _____ **29**

D Globalisation & Knowledge Problem (2010)

York: _____ **30**

E Comparative Education (2007)

F Education & Knowledge Issues (2009)

G Educational Issues (2008)

H New Millennium (2010)



Section 4

Questions 31 – 40

Instructions to follow

- Complete the summary below.
- Write **NO MORE THAN TWO WORDS** for each answer.

Health Interventions

- Everyday the human body is fighting off **31** _____ by destructive pathogens.
 - A person in good health has natural protection in the form of an immune system which works best against familiar microorganisms which may have been encountered during a previous **32** _____ or passed on by the mother before or after birth.
 - Vaccination is a way to cause **33** _____ immunisation by introducing a small amount of pathogen into the body – just enough for the body's **34** _____ to react by making antibodies.
 - Proteins from animal **35** _____ are introduced into the patient to give him the necessary antibodies.
 - Dr. Edward noted that victims of cowpox, which they caught from **36** _____ cows.
- Dr. Edward carried out a successful **37** _____ by deliberately giving a child cowpox in order to make him immune to smallpox.
- antibodies have been produced by micro - organisms to fight bacterial **38** _____
 - Y-shaped antibodies can prevent antigens from entering the body and repair the **39** _____
 - doctors can see the agglutination by their **40** _____ eyes to determine a patient's condition.



Practice Test 8

Section 1

Questions 1 - 10

Instructions to follow

- Listen to [Audio 8](#) and answer the questions below.
- Complete the form below.
- Write **ONE WORD AND/OR A NUMBER** in each gap.

Able Employment Agency - Application Form

Full name: James **1** _____

Address: **2** _____ Rd.. Melford MF4 5JB

Contact number: **3** _____

Qualifications: - A levels

- diploma of **4** _____

- certificate of **5** _____ skills

Experience: - general work in a **6** _____ (3 months)

- part-time job as a **7** _____ guide

Interests: - member of a/an **8** _____ club

- enjoys playing **9** _____ (10 years)



Date available: **10** _____

Section 2

Questions 11 – 20

Question 11 – 16

Instructions to follow

- Complete the table below
- Write **ONE WORD AND/OR A NUMBER** in each gap.

Name of Cruise	Length of Cruise	Cost per person	Extras included in price
Mitre Peak Lodge	11	\$170	tour of old 12
Milford Sound	3 days	\$. 13	lessons of 14
15Bound	4 days	\$340	climbing .. 16

Questions 17 - 20

Instructions to follow

- Choose the correct letters. A, B or C.



- 17 The boats have
- A showers, TVs and radios.
 - B TVs and radios.
 - C showers and radios.
- 18 Visitors to fairy falls will try to
- A swim in the alpine water.
 - B catch alpine water in a cup.
 - C fill containers with alpine water.
- 19 Meals are served
- A for one hour.
 - B for half an hour.
 - C for an hour and a half.
- 20 The guests are asked to
- A wash their dishes.
 - B prepare some meals.
 - C put their dishes away.



Section 3

Questions 21 - 30

Questions 21 - 26

Instructions to follow

- Choose **SIX** answers from the list below and write the correct letter. A-C next to Questions 21-26.

At which college are the following features recommended?

Colleges

- A at Forth College
- B at Haines College
- C at both Forth and Haines Colleges

Features

- student support services: 21
- residential accommodation: 22
- online resources: 23
- libraries: 24
- teaching staff: 25
- research record: 26

Questions 27 - 30

Instructions to follow

- Choose the correct letters. A, B or C.



- 27 David is concerned that he may feel
- A unmotivated.
 - B isolated.
 - C competitive.
- 28 In the future, Dr. Smith thinks David should aim to
- A do further research.
 - B publish articles.
 - C get teaching work.
- 29 What does Dr. Smith think has improved masters' study in recent years?
- A the development of the internet
 - B the growth of flexible courses
 - C the introduction of changes in assessment
- 30 David would like to improve the way he
- A takes notes in lectures.
 - B writes up assignments.
 - C manages his time.



Section 4

Questions 31 – 40

Questions 31 – 32

Instructions to follow

- Choose the correct letters, A, B or C.

31 Compared to harvesting on land, harvesting at sea is

A more difficult

B less difficult

C the same

32 Oceanographers help sailors by

A Studying the movement of ships

B Researching ocean temperatures

C Predicting currents and winds

Questions 32 – 37



Instructions to follow

- Complete the table below.
- Write **ONE WORD ONLY** in each gap.

Important Early Oceanographers

Name	Palace of Birth	Major contribution
Forbes	Isle of 33 _____	34 _____ of oceanography
Thomson	Ireland	tidal 35 _____ and currents
Darwin	36 _____	studied many marine 37 _____

Questions 38 – 40

Instructions to follow

- Choose **THREE** letters A-G .

Which **THREE** areas of study are mentioned as a part of ocean waste disposal?

- A when to dump waste
- B the effects of nuclear waste burial



- C the diffusion and mixing of waste
- D the transportation of nuclear waste
- E acceptable levels of waste contamination
- F where to bury nuclear waste
- G other ways of disposing waste



Practice Test 9

Section 1

Questions 1 - 10

Instructions to follow

- 🔊 Listen to [Audio 9](#) and answer the questions below.
- Complete the notes below
- Write **ONE WORD AND/OR A NUMBER** in each gap.

Preparation for Farewell Party

Remaining time: about **1** _____ to get it done

Things to do:

- the list has been forgotten in the **2** _____
- beer will kept in **3** _____ condition
- better to have **4** _____ bottles of wine
- wine glasses could be borrowed from student bar in the **5** _____
- meats for barbecues are well prepared in a big **6** _____
- **7** _____ could be borrowed from the bar
- Bread and paper **8** _____ can pick up from a/an , **9** _____ which will be put in a big **10** _____



Section 2

Questions 11 - 20

Questions 11 - 15

Instructions to follow

- Complete the sentences below.
- Write **ONE WORD AND/OR A NUMBER** in each gap.

Introduction of Royal Hospital College

- The introductory talk is handled by the department **11** _____
as the dean has the **12** _____
- The school was first established in **13** _____
- The school was located near many houses and **14** _____ in the end of 19th century.
- The school was redesigned after receiving a big fund from a foreign. **15** _____

Questions 16 - 20

Instructions to follow

- Choose the correct letters. A, B or C.



- 16 The school was changed into a school for boys only
- A in 1700s.
 - B in 1780s.
 - C in 1868s.
- 17 The school was co-educational
- A after 1991.
 - B from 1868 to 1991.
 - C before 1868 and after 1991.
- 18 The school is very well known for its
- A singing group.
 - B Pianists.
 - C Organists.
- 19 The school's sport facilities are open
- A all the time.
 - B all the time for the fitness center.
 - C from 6 am to 11 pm for gym and swimming pool every day.
- 20 This year, the women's sport team won



- A the soccer titles among all universities.
- B all the university-level basketball titles in England.
- C all the water polo titles in England.





Section 3

Questions 21 – 30

Questions 21 – 25

Instructions to follow

- Choose **FIVE** answers from the list below and write the correct letter. A-H . next to Questions 21-25.

Which of the following information is appropriate for its college facility below?

Information

College Facility

A long waiting list, apply now

Refectory: 21.....

B includes equipment room containing

Careers Advice: 22.....

audio-visual materials

Fitness Centre: 23.....

C inform them in advance about

Library: 24.....

special requirements

Computers: 25.....

D password provided by technical

support team

E drop-in centre for information

F ask them directly to arrange

special dietary meals



- G ask your tutor for more information
- H reduce annual fee for students

Questions 26 – 30

Instructions to follow

- Complete the summary below.
- Write **NO MORE THAN WORDS** in each gap.

Business Centre

The Business Resources Centre contains materials such as books and manuals to be used for training. It is possible to hire 26 and 27.

There are material for working on study skills (e.g. 28) and other subjects include finance and 29. 30 membership costs 50 pounds per year.



Section 4

Questions 31 – 40

Questions 31 – 37

Instructions to follow

- Complete the table below
- Write **ONE WORD ONLY** in each gap.

Social history of the East and End of London	
Period	Situation
1st - 4th centuries	Produce from the area was used to 31 _____ the people of London
5th - 10th centuries	New technology allowed the production of goods made of 32 _____ and _____
11th century	Lack of 33 _____ in the East End encouraged the growth of businesses.
16th century	Construction of facilities for the building of 34 _____ stimulated international trade Agricultural workers came from other parts of 35 _____ to look for work
17th century	Marshes were drained to provide land that could be 36 _____ on
19th century	Inhabitants lived in conditions of great 37 _____ with very poor sanitation



Questions 38 – 40

Instructions to follow

- Choose **THREE** letters, A-G.

Which **THREE** of the following problems are mentioned in connection with 20th century housing in the East End?

- A unsympathetic landlords
- B unclear water
- C heating problems
- D high rents
- E overcrowding
- F poor standards of building
- G houses catching fire



Practice Test 10

Section 1

Question 1 - 10

Instructions to follow

- ▶ Listen to [Audio 10](#) and answer the questions below.
- Complete the notes below
- Write **ONE WORD AND/OR A NUMBER** in each gap.

Kingswell Sports Club

Facilities available:

- golf

- 1 studio

- 2

Classes available:

- kick-boxing

- 3 classes

Additional facility:

4 bar (restaurant opening soon)

Membership schemes:

+ Gold member - annual subscription fee: £ 5

+ Silver member - cost of classes: £ 6

- can use facilities from 10.00 am to 7



+ Bronze member - annual subscription fee: £ 8

Requirements: - need to book an instructor's 9

-speak to David 10 to book a trial session





Section 2

Questions 11 - 20

Questions 11 – 16

Instructions to follow

- Choose **SIX** answers from the list below and write the correct letter. A-G . next to Questions 11-16.

What change has been made to each part of the theatre?

Rivenden City Theatre

Part of the theatre

- | | |
|---|--|
| <p>A doubled in number</p> <p>B given separate entrance</p> <p>C reduced in number</p> <p>D increased in size</p> <p>E replaced</p> <p>F strengthened</p> <p>G temporarily closed</p> | <p>box office: 11</p> <p>shop: 12</p> <p>ordinary seats: 13</p> <p>seats for wheelchair users: 14</p> <p>lifts: 15</p> <p>dressing rooms: 16</p> |
|---|--|



Questions 17 - 20

Instructions to follow

- Complete the table below
- Write **ONE WORD AND/OR A NUMBER** in each gap.

Royal Hunt of the Sun

Dates	Starting Time	Ticket available	Price
October 13th to 17	18	For Monday and 19	20 pounds



Section 3

Questions 21 - 30

Questions 21 – 26

Instructions to follow

- Choose the correct letters. A, B or C .

21 Ann wanted to carry out a survey on

- A television watching and reading ability.
- B relationship between fat students and junk food.
- C link between fast-food restaurants and fat students.

22 What did John want to show his graph to the class?

- A reading level on the X axis
- B TV watching time on the X axis
- C reading level on the Y axis

23 How many people per group did John take into his survey?

- A 20
- B 100
- C more than 100



- 24 In his survey outcomes. John found out that
- A reading level and watching time are the same in all group.
 - B reading level and watching time are inversely proportional.
 - C younger people read less than older ones.
- 25 According to John's graph. there was a huge discrepancy between
- A youngest groups and oldest groups.
 - B reading level and watching time in all age groups.
 - C the elderly and teenager in terms of reading and watching.
- 26 Which conclusion did John draw from his survey?
- A the elderly's watching time has not changed.
 - B the elderly's reading levels has not changed.
 - C the teenager's reading levels stay the same.

Questions 27 - 30

Instructions to follow

- Complete the sentences below.
- Write **NO MORE THAN TWO WORDS** in each gap.



- The graph illustrates the correlation between the number of times consuming fast food and the proportion of **27** _____ level.
- People who spend much time on **28** _____ tend to eat less fast food.
- However, people are still really into **29** _____ and other types of fast food.
- Drinking high amounts of sugar-sweetened **30** _____ could make people overweight.





Section 4

Questions 31 - 40

Questions 31 – 40

Instructions to follow

- Write **ONE WORD ONLY** in each gap.

Corporate Crime

General information

- crime committed by the CEO or the **31** _____ of the company
- in one sense, this crime is a part of the business **32** _____
- **33** _____ is the reason that makes people get involved in this temptation
- the crime is classified based on **34** _____ and company environment

Characteristics

- during the **35** _____ of detection, the crime keeps going on until they get caught
- this crime is considered more serious than the daily **36** _____
- **37** _____ aspect of company product is one type of the crime, e.g., Ford corporation contributed to more consumer **38** _____
- control the share prices to increase company **39** _____ is also a type of



the crime, e.g., gaining more benefits by being the largest ⁴⁰_____ to the presidential election campaign.






Practice Test 11

Section 1

Question 1 – 10

Instructions to follow

-  Listen to [Audio 11](#) and answer the questions below.

Question 1 – 5

Instructions to follow

- Choose the correct letters. A, B or C.

1 What does her bag look like?

- A Two scratches on opposite corners
- B Zipper on side
- C A carry handle on top

2 What time was it when the bag was stolen?

- A It's quarter past twelve.
- B It's twelve twenty-five.



C It's twelve thirty.

3 Where was she when the bag was stolen?

A at the shopping centre

B at the cinema

C by the supermarket

4 What was in the bag?

A wallet, passport and camera

B traveler's cheques, wallet and pens

C passport traveler's cheques

5 The woman is

A at a conference

B on holiday

C visiting family

Question 6 – 10

Instructions to follow

- Complete the form below
- Write **ONE WORD AND/OR A NUMBER** in each gap.



Police Report: Stolen Goods

Name: Helen **6** _____

Address: **7** _____,

75 **8** _____ Ave

Telephone: **9** _____

Description of item(s): Vitoli Bag

Estimated Value: **10** _____ .





Section 2

Question 11 - 20

Question 11 – 12

Instructions to follow

- Choose the correct letters, A, B or C.

11 The bottled water business began

- A because of convenience
- B because spring water tasted good
- C one hundred year ago

12 The human body is

- A one-third water
- B two-third water
- C sixty percent water

Question 13 – 16



Instructions to follow

- Complete the table below
- Write **NO MORE THAN TWO WORDS** in each gap.

History of Bottled Water

Date	Development
Early 19 century	Health benefits recognised
Mid 19th century	13 _____ water sold entrepreneurs
Late 19th century	Emergence of the 14 _____ market
1960s	Move towards 15 _____ reduces interest in bottled water
Mid - 1980s	New 16 _____ bottles produced, leads to increase in sales

Questions 17 - 18

Instructions to follow

- Choose **TWO** letters A-E.



Which **TWO** factors led to bottled water becoming popular again?

- A people traveling abroad
- B the packaging of the product
- C the high price of wine
- D tourists brought their own water when they traveled
- E its use as a wine substitute

Questions 19 - 20

Instructions to follow

- Choose **TWO** letters A-E.

Which **TWO** areas make up the 'take home sector'?

- A local restaurants
- B corner stores
- C local manufacturers
- D major supermarkets
- E in-home consumers



Section 3

Questions 21 - 30

Questions 21 - 24

Instructions to follow

- Choose **FOUR** answers from the list below and write the correct letter. A-G, next to Questions 21-24.

Which action does each type of penguin do?

Action	Type of penguin
A always hesitate before jumping	Gentoo: 21 _____
B avoid climbing if possible	Rockhopper: 22 _____
C lean backwards when calling	Magellanic: 23 _____
D move around at night	King: 24 _____
E use its bill when climbing	
F usually look twice at things	
G walk with its flippers pointing downwards	

Questions 25 - 30

**Instructions to follow**

- Complete the sentences below.
- Write **ONE WORD ONLY** in each gap.

- Penguins usually sleep while **25** _____.
- Rockhopper's yellow feathers **26** _____ out when it is angry.
- Penguins can recognise **27** _____ patches in the Skua's wings.
- Penguins prefer to swim in groups because it makes it easier to find **28** _____.
- When they are on land, they appear to be **29** _____.
- The majority of species are characterised by their **30** _____ nature, which makes them particularly interesting for humans to study.



Section 4

Questions 31 - 40

Instructions to follow

- Write **ONE WORD ONLY** in each gap.

City Development

- governments have been mistaken to **31** _____ slums
- there is often a lack of actual **32** _____ concerning housing projects
- housing policies which are based on principles of **33** _____ are particularly effective
- some **34** _____ should always be provided by governments
- migrants will only **35** _____ money in housing if they feel secure
- governments often underestimate the importance of **36** _____ values to housing projects
- the availability of **37** _____ is the starting point for successful housing development
- urbanisation can have a positive effect on the **38** _____ of individuals
- the population size of cities enables a range of specialist **39** _____ to occur
- city living tends to raise the level of **40** _____ among people



Practice Test 12

Section 1

Question 1 - 10

Instructions to follow

🔊 Listen to [Audio 12](#) and answer the questions below.

Question 1 – 6

Instructions to follow

- Complete the notes below
- Write **ONE WORD AND/OR A NUMBER** in each gap.

Group trip to Tidborough

Distance: ① _____ (from youth hostel to city centre)

Website: www. ② _____ .com (youth hotel)

Activities: - street ③ _____ taking place on March 22

- concert feature is done by local ④ _____

- natural ⑤ _____ starts on March 24

- ⑥ _____ centre will be closed in march



Questions 7 - 10

Instructions to follow

- Choose the correct letters. A, B or C.

7 When does the train ride depart?

A 9.00

B 9.15

C 9.30

8 Where is it recommended to buy tickets?

A at the tourist office

B at the station

C at the youth hostel

9 How much is the group discount?

A 10%

B 15%

C 20%

10 How long does the excursion last?

A three hours



- B three and a half hours
- C four hours





Section 2

Questions 11 - 20

Questions 11 - 13

Instructions to follow

- Choose the correct letters. A, B or C.

11 The company's sales figures for the last five years

- A increased in general.
- B fluctuated during the time
- C increased at first and decreased at the end.

12 What is the relationship of three departments this year?

- A food and electric decrease.
- B food and electric increase.
- C cloths and food have both grown.

13 The temporary staff in the company

- A will increase in the coming time.
- B have remained unchanged over time.
- C are currently lower than last year.



Question 14 -18

Instructions to follow

- Complete the notes below
- Write **NO MORE THAN TWO WORDS** in each gap.

Creating Value for Customers

- In case of problems, always ask your **14** _____ for help
- important for customers to have a/an **15** _____ experience
- tell customers about **16** _____ goods
- read the **17** _____ every month
- must attend **18** _____ on Thursdays

Questions 19 – 20

Instructions to follow

- Choose **TWO** letters A-E.

Which **TWO** things must be done today?



- A Complete form
- B Get security pass
- C Register for discount
- D Show qualifications
- E Watch information video





Section 3

Questions 21 – 30

Questions 21 - 26

Instructions to follow

- Choose the correct letters A,B, or C.

21 Initially, Alice thinks Paul's study topic is

A boring.

B interesting.

C unsuitable.

22 Scientists in the early 20th century thought animals in the deep ocean

A communicated rarely.

B communicated often.

C never communicated.

23 A hydrophone

A looks a lot like a telephone.

B only allows for one-way communication.

C converts electricity into sound.

24 Under water ocean sounds



- A have been mostly identified by scientists.
- B are difficult to classify.
- C are made mostly by fish.

25 Which underwater animal is the noisiest communicator?

- A dolphins
- B fish
- C shrimp

26 Which animal could be heard throughout a room?

- A seahorse
- B seabed animals
- C offshore marine animals in Japan

Question 27 – 30

Instructions to follow

- Complete the table below
- Write **ONE WORD OR A NUMBER** in each gap.

Details: Assignment #1



	Word/time Length	Task Description	Due Date
Part 1	1200 words	Research 27.....	Week 6
Part 2	28..... words	Field study	Week 7
Part 3	Maximum: 15 minutes	Report on 29.....	Week 30.....





Section 4

Questions 31 – 40

Questions 31-33

Instructions to follow

- Choose **TWO** letters A-G.

Which **THREE** of the following does the speaker say he will discuss in his talk?

- A why he works with horses
- B the breeding of horses
- C a detailed look at the principles of horse training
- D employment opportunities
- E the role of young horse riders in the industry
- F the work involved in the horse industry
- G the qualifications needed

Question 34 – 40



Instructions to follow

- Complete the notes below.
- Write **ONE WORD ONLY** in each gap.

Horse Industry

- The English thoroughbred industry:

+ along with other **34** _____ industries is expected to continually grow

+ is generating 900 million pounds in **35** _____ every year

+ numbers employed: 50,000 (primary) and 20,000 **36** _____

- Dr Samson's current studies involve **37** _____ of breeds

- Two main areas that graduates from university find employment are:

+ **38** _____ - the act of riding a horse

+ horse training and management - involves many diverse activities

- The minimum qualifications needed for the following jobs:

+ stable hand: university **39** _____

+ specialised researcher: **40** _____



Practice Test 13

Section 1

Question 1 - 10

Instructions to follow

- Listen to [Audio 13](#) and answer the questions below
- Write **ONE WORD AND/OR A NUMBER** in each gap.

Go-Travel Booking Form

Name: **1** _____ Anna

Source of enquiry: saw ad in **2** _____ world magazine

Reference Number: **3** _____

Number of people: **4** _____

Preferred departure date: **5** _____

Number of nights: **6** _____

Type of insurance: **7** _____

Preferred options: + room with **8** _____

+ arts **9** _____

+ **10** _____ tr



Section 2

Questions 11 - 20

Question 11 – 17

Instructions to follow

- Write **ONE WORD AND/OR A NUMBER** in each gap.

Run-Well Charity

Background to Run-Well charity:

+ set up in **11**.....

+ aim at raising money for the **12**.....

Race details:

+ teams to supply own **13**.....

+ teams should **14**..... together

+ important to bring enough **15**..... and drink

+ race will finish in the main **16**.....

+ prizes given by the minister for **17**.....

Question 18 - 20

**Instructions to follow**

- Choose **THREE** letters A-H.

Which **THREE** ways of raising money for the charity are recommended?

- A badges
- B bread and cake stall
- C swimming event
- D second-hand sale
- E door-to-door collecting
- F picnic
- G postcards
- H quiz



Section 3

Questions 21 - 30

Questions 21-25

Instructions to follow

- Choose the correct letters. A, B or C.

21 Wendy is currently studying

A science.

B communications.

C literature.

22 Tim thought the field trip to the radio station was

A long and boring.

B useful.

C unexpected.

23 Wendy thinks the percentage of radio listeners is

A probably wrong.

B too small.

C accurate.

24 Which is the viewing trends for the town?



- A mainly watch in the evening
- B reach its climax at noon
- C popular in the morning and less at noon

25 What is the most program ratings for radio listeners?

- A competitions and prizes.
- B news and weather
- C sports

Question 26 – 28

Instructions to follow

- Write **ONE WORD ONLY** in each gap.

m



Making A Radio Program

Step 1: Decide upon topic

Step 2: Conduct **26** _____

Step 3: Write relevant **27** _____

Step 4: Produce a running sheet

Step 5: Pre-record program put to air at relevant **28** _____



Questions 29 – 30

Instructions to follow

- Choose **TWO** letter A-E.

Which **TWO** of the following were suggested to improve chances of employment in radio?

- A make friends with people in the industry
- B get a university degree
- C develop a good knowledge of music
- D interview a famous person
- E produce an audio library





Section 4

Questions 31 - 40

Questions 31 - 35

Instructions to follow

- Choose **FIVE** answers from the list below and write the correct letter. A-H. next to Questions 31-35.

Which of the following Area of Change is appropriate for each comments below?

List of comments

- A faster growth rate
- B better airflow in cages
- C large, commercial sites
- D separation reduces disease
- E free-range turkeys
- F alternative feeding methods
- G breaks are trimmed
- H internal lighting
- I growth promoters

List of Area of Changes

- Genetics used in UK companies: 31.....
- Nutrition used in Canada: 32.....
- Worldwide health: 33.....
- Environment in USA: 34.....
- Equipment in cold climate areas: 35.....



Questions 36 – 40

Instructions to follow

- Complete the summary below
- Write **ONE WORD ONLY** in each gap.

The Turkey industry is made up of breeders and producers. The breeders select the best individual turkey and so maintain and develop the genetic _____³⁶ quality of the population. Products are typically sold to breeders as hatching eggs or turkey _____³⁷ ('poults') to breeders. They mate _____³⁸ purchased from the _____³⁹ breeder. In the UK, the largest market segment is dominated by three _____⁴⁰ companies.





Practice Test 14

Section 1

Question 1 - 10

Instructions to follow

- Listen to [Audio 14](#) and answer the questions below.
- Write **NO MORE THAN TWO WORDS AND/OR A NUMBER** in each gap.

Clean-it Customer Survey Form

Customer name: Mr. Sargent

Model purchased: 1 Cleaner

Date of purchased: 2

Other purchased products: vacuum cleaner bags,
3 Cleaner

Amount spent in store: 4

Purchases from competitors: Ezi-clean. Mr. 5

and Johnston Bros

Quality assessment: 6

Best time to visit store: - Sundays between 7 and 3 pm

- 8 between 11 and 12 noon



Suggestions: - turn up the **9**.....

- have some **10**..... in the store





Section 2

Questions 11 - 20

Question 11 – 15

Instructions to follow

- Choose the correct letters. A, B or C.

11 Number of people on the trip is

A 2

B 3

C 4

12 The trip of trekking the Sahara lasts for

A 14 days.

B 18 days.

C 13 days.

13 The very first difficulty on the trip is

A bad weather conditions.

B trekking paths.

C lack of sleep.



14 What was unusual about the weather on the trip?

- A it was hot.
- B it rained.
- C it was cold.

15 The Sahara in the winter is usually

- A hot by day and cool by night.
- B warm by day and night.
- C hot during the day and cold at night.

Questions 16 – 18

Instructions to follow

- Choose **THREE** letters A-G.

What does Colin say were his most memorable moments?

- A driving in the 4 wheel drive
- B arriving at the Niger River
- C waiting with 26 vehicles for the ferry
- D catching a Pirogue at Timbuktu
- E driving through mud and two foot deep water
- F sleeping under the stars



G reaching camp on the 9th day

Questions 19 – 20

Instructions to follow

- Choose **TWO** letters A-E.

What does Charles say about the Pirogue?

- A They have motors
- B They look like canoes
- C They normally carry two to six people
- D They are mostly used for transporting freight or cargo
- E They are mostly without motors



Section 3

Questions 21 - 30

Questions 21 - 26

Instructions to follow

- Write the correct letters. A, B or C next to Questions 21-26.

What do the students decide about each topic for Joe's presentation?

Decision

- A Joe will definitely include this topic
- B Joe will not include this topic
- C Joe might include this topic

Topic

- cultural aspects of naming people: 21
- similarities across languages in naming practices: 22
- meanings of first names: 23
- place names describing geographic features: 24
- influence of immigration on place names: 25



origins of names of countries:

26.....

Questions 27 – 30

Instructions to follow

- Complete the summary below
- Write **ONE WORD ONLY** in each gap.

Researchers showed a group of students many common nouns, brand names and 27 _____ words.

Students found it easier to identify brand names when they were shown in 28 _____ letters.

Researchers think that 29 _____ is important in making brand names special within the brain.

Brand names create a number of 30 _____ within the brain.



Section 4

Questions 31 - 40

Instructions to follow

- Write **ONE WORD ONLY** in each gap.

Balloons and Airships

Gas balloons:

- uses instead of **31** _____ in the US civil war
- to make **32** _____
- to collect **33** _____ for research
- as part of studies of **34** _____

Hot air balloons:

- Create less **35** _____ than gas balloons

Airships:

- early examples had no weather **36** _____ for crew
- to be efficient, needed a **37** _____
- Development of large airships stopped because of:
 - + success of **37** _____
 - + series of **39** _____



- Recent interest in use for carrying **40** _____ .





Practice Test 15

Section 1

Question 1 – 10

Instructions to follow

- Listen to [Audio 15](#) and answer the questions below.
- Write **ONE WORD AND/OR A NUMBER** in each gap.

Current Bank Account Form

Type of account: The ' **1** ' account

Full name: Pieter Henes

Date of birth: **2** _____

Current address: **3** _____ Exeter

Time at current address: **4** _____

Previous address: Utrecht, Holland

Telephone: **5** _____

Occupation: **6** _____

Identity (security): **7** _____

Opening sum: **8** _____ euro, to be transferred from



Fransen Bank, Utrecht

Statement:

every **9** _____

Requests:

Supply information about the bank's

10 _____ services





Section 2

Questions 11 - 20

Questions 11 - 13

Instructions to follow

- Choose the correct letters. A, B or C.

11 When the writer S. George first saw R. House, he

- A thought he might rent it.
- B was too expensive for him.
- C was unsure whether to buy it.

12 Before buying the house, George had

- A experienced severe family problems.
- B struggled to become a successful author.
- C suffered a serious illness.

13 According to the speaker, George viewed R. House as

- A a rich source of material for his books.
- B a way to escape from his work.
- C a typical building of the region.



Questions 14-17

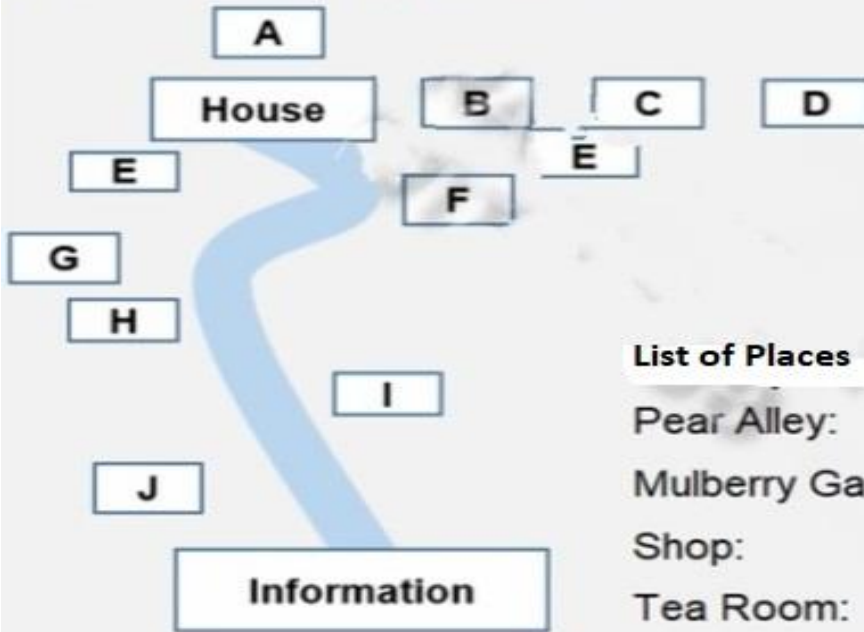
Instructions to follow

- The map has ten gaps, A-J. Choose the correct gap and move it into the suitable place.

Questions 14 - 17

The map has ten gaps, A-J. Choose the correct gap and move it into the suitable place.

Rosewood House and Gardens



List of Places

Pear Alley:	14
Mulberry Garden:	15
Shop:	16
Tea Room:	17

14 _____

- A
 B
 C
 D
 E
 F
 G
 H
 I
 J



15 _____

- A B C D E F G H I J

16 _____

- A B C D E F G H I J

17 _____

- A B C D E F G H I J

Questions 18 – 20

Instructions to follow

- Complete the sentences below.
- Write **ONE WORD ONLY** in each gap.

- You can walk through the **18** _____ that goes along the river bank.

- You can go over the **19** _____ and then into a wooded area.

- On your way back, you could also go up to the **20** _____.



Section 3

Questions 21 – 30

Instructions to follow

- Complete the notes below.
- Write **ONE WORD ONLY** in each gap.

Marketing Survey

Assignment:

- the students must investigate one part of the **21** _____ industry
- the students must use **22** _____ interview to collect data
- the students must interview **23** _____ people in total
- the music preferences are the **24** _____ for male and female

Music preferences:

- types of music:
 - + pop, **25** _____, folk
 - + easy listening, **26** _____
- medium for listening to music: radio, CD, TV, **27** _____ .
- source of music:
 - + music shops



+ 28 _____ stores, internet

- places for listening to music:

+ disco, pub. 29 _____

+ 30 _____ house





Section 4

Questions 31 – 40

Questions 31 – 34

Instructions to follow

- Choose the correct letter A, B, or C.

- 31 According to the speaker, it is not clear
- A when the farming economy was introduced to Ireland.
 - B why people began to farm in Ireland.
 - C where the early Irish farmers came from.
- 32 What point does the speaker make about breeding animals in Neolithic Ireland?
- A Their numbers must have been above a certain level.
 - B They were under threat from wild animals.
 - C Some species died out during this period.
- 33 What does the speaker say about the transportation of animals?
- A Livestock would have limited the distance the farmers could sail.
 - B Neolithic boats were too primitive to have been used.
 - C Probably only a few breeding animals were imported.
- 34 What is the main evidence for cereal crops in Neolithic Ireland?



- A the remains of burnt grain in pots
- B the marks left on pots by grains
- C the patterns painted on the surface of pots

Questions 35 - 40

Instructions to follow

- Complete the notes below.
- Write **ONE WORD AND/OR A NUMBER** in each gap.

Ireland in the Neolithic Period

Stone tools

- Ploughs could either have been pulled by human or by **35** _____
- The farmers needed homes which were permanent dwellings
- Water and **36** _____ were necessary for grinding and polishing in the final stages of axe-making
- Irish axes were exported from Ireland to **37** _____ and England

Pottery making

- The colonisers used clay to make pots
- The **38** _____ of the pots was often polished to make them watertight
- Clay from **39** _____ areas was generally used



- Decoration was only put around the 40 of the earliest pots





Practice Test 16

Section 1

Questions 1 - 10

Instructions to follow

- 🔊 Listen to [Audio 16](#) and answer the questions below.
- Complete the notes below.
- Write NO MORE THAN ONE WORD AND/OR A NUMBER in each gap.

Bank Account Opening Form

Type of account: deposit account

Name of account decided on: ①

Customer's name: ② Fox

Date of Birth: ③1970

Current address: 10, ... ④ House South Quay

Duration of time living there: about ⑤ month(s)

Address(before): Flat 3, Canada House
 ⑥ Street, Edinburgh

Office number: 02072356735



Home number:

7.....

Occupation:

8.....

Identity (security):

Name of his 9..... Monica

The account opening sum:

£..... 10.....





Section 2

Questions 11 - 20

Questions 11 - 14

Instructions to follow

- Choose the correct letters A – C.

The Elizabeth House

11 Jonathan Owen bought the house in 1965 as it was built in the way of

- A The standard European building style
- B The Asian style of middle ages in the UK
- C The traditional middle ages of the Britain

12 Jonathan Owen has been employed in the university of Canterbury as

- A A head master of ceramic
- B A head carpenter
- C A supervisor of accounting

13 Jonathan Owen succeeded in his business so much, but he suffered from

- A Private household affairs
- B



Personal diseases

C Public relations

14 Where did he gather his building material from?

A The local area

B The garden

C The backyard

Questions 15- 20

Instructions to follow

- Complete the sentences below:
- Write NO MORE THAN TWO WORDS in each gap.

- Sun Rainbow was designed by Owen's brother who had studied¹⁵.....in Paris
- There is a¹⁶.....tree with 200 years old near the entrance
- You can find the shop between the path and¹⁷.....
- In the snack bar, you will be able to take rest and get¹⁸.....
- Through¹⁹..... there is a beautiful walk
- Both²⁰..... and grapes are the local products that are promoted and marketed every year with a variety of events and festivals.



Section 3

Questions 21 -30

Questions 21 - 24

Instructions to follow

- Complete the table below:
- Write NO MORE THAN TWO WORDS AND/OR A NUMBER in each gap.

Gallery Marketing

The place to get information about museums and galleries in England	at 21
Research methods	22, questionnaires or emails
Total respondents	23
The compared objects of 24 fair	Male and Female

Questions 25 - 30



Instructions to follow

- Complete the summary below:
- Write NO MORE THAN TWO WORDS in each gap.

Ceramics

Of the countries chosen ceramic of²⁵.....is a unique kind that the researchers are interested in. On²⁶..... Of ceramic, the decoration is compared with artwork of the present time.

The natives made the ceramic from²⁷....., like mountain, basement, and the bottom of the lake. From²⁸..... plants, the natives made various colours through the process of²⁹..... The tones of ceramic were used by³⁰.....



Section 4

Questions 31 - 40

Questions 31 - 36

Instructions to follow

- Choose the correct letters A – C.

Waste issues in the UK

31 The waste collection in the UK compared to other European nations

- A is lower than 15%
- B will be lower in the next coming years
- C is lower

32 What did the local government do to reduce waste?

- A support green campaign and flea markets
- B enact a severe regulation
- C investing in flea markets

33 What kinds of flea markets is in the UK?

- A indoors and outdoors
- B warehouse and school gymnasium



C an open field with many small tents

34 What did the UK flea market vendors sell?

- A second hand tables and food
- B unwanted household products
- C fast food and beverages

35 What hindrance in opening more flea markets is in the UK?

- A Customers cannot access the internet
- B There is not enough space and money
- C the information and marketing are deficient

36 How much waste (electronic and furniture goods) is recycled annually in the UK flea markets?

- A 20%
- B 15%
- C 50%

Questions 37 - 38

Instructions to follow

- Choose two letters A- E for questions 37 & 38.

Which two solutions in handling the recycling problems of office papers in the UK?



- A manufacture high-quality paper to reuse
- B classify paper before selling.
- C sell paper to farmers as fertilizer.
- D put paper through a sorting process
- E Use high tech machine to produce paper

Questions 39 - 40

Instructions to follow

- Choose two letters A- E.

Which TWO reasons are encouraging UK people to reuse waste?

- A for later use
- B saving resources
- C using for other purposes
- D environmental protection
- E can be used by others.



Practice Test 17

Section 1

Questions 1 - 10

Instructions to follow

- 🔊 Listen to [Audio 17](#) and answer the questions below.
- Complete the form below.
- Write ONE WORD AND/OR A NUMBER in each gap.

Hostel accommodation

Top End Backpackers Price per person:	\$19
Comments and reviews:	+ parking available, + staff are 1 + nice pool
	+ air-conditioning is too 2
Gum tree lodge Price per person:	\$..... 3



Comments and reviews:	+ good quiet location + pools and gardens + 4 In the dormitories
Kangaroo lodge Price per person:	\$22
Comments and reviews:	+ downtown location + reception at the lodge is always open + no lockers in the rooms + the 5 are very clean + seems to be a 6 every night
Address:	on 7 lane
Hostel information:	+ sheets are provided + can hire a/an 8 + 9 is included + a shared 10 is available



Section 2

Questions 11 - 20

Questions 11 - 16

Instructions to follow

- Choose the correct letters A, B or C.

Anglia Sculpture Park

11 The land where the sculpture is located was previously completely covered by forest is

- A completely covered by forest
- B the site of a private house
- C occupied by a factory

12 What is unusual about the Anglia Sculpture Park?

- A artists have made sculptures especially for it
- B some of its sculptures were donated by the artists
- C It only shows contemporary sculptures

13 What is the theme of Joe Tremain's sculptures?

- A The contract between nature and urban life
- B The effect of man on the environment
- C



the violence of nature

- 14 The path by the lower lake
- A is rather wet in some places
 - B has recently been repaired
 - C is difficult to walk on
- 15 What does the speaker say about the visitor centre?

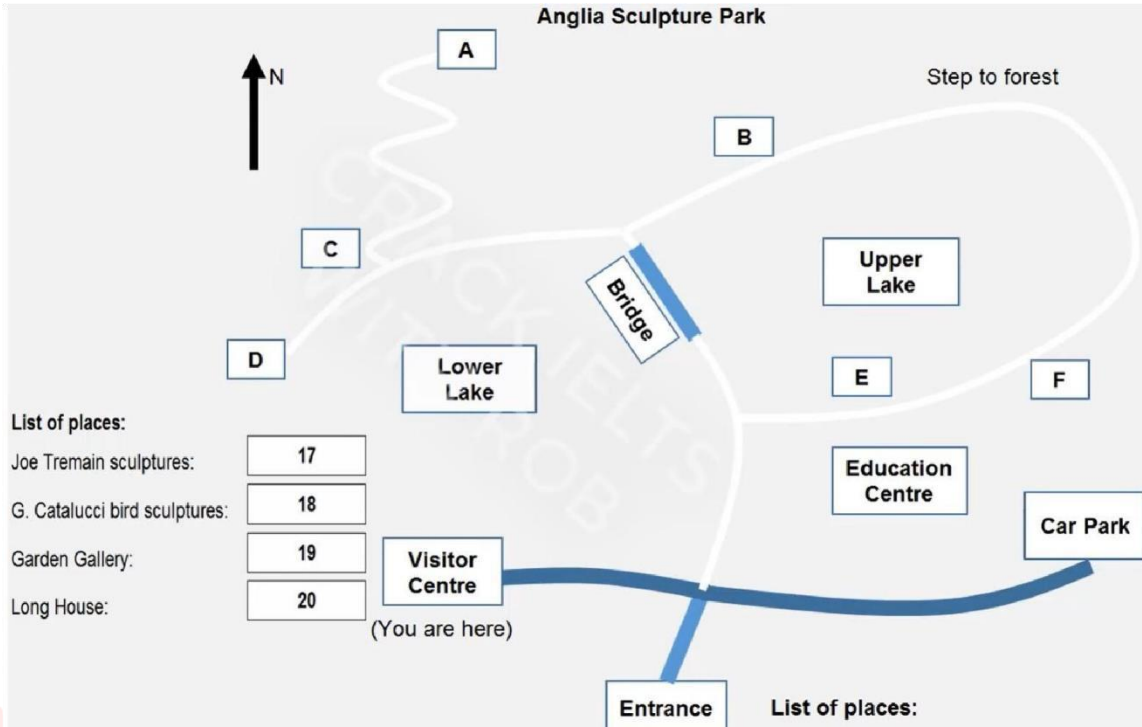
- A It is being enlarged at present
- B It has received an international award
- C It was designed by a Canadian architect

- 16 Today, visitors can buy snacks and sandwiches

- A at the kiosk
- B in the terrace room
- C at the Lower Lake café



Questions 17 - 20



17 _____

- A B C D E F

18 _____

- A B C D E F

19 _____

- A B C D E F

20 _____

- A B C D E F



Section 3

Questions 21 - 30

Questions 21 - 26

Instructions to follow

- Choose the correct letters A, B or C.

Making Report

21 Why did Leo choose instant coffee as the topic for his marketing report?

- A he found plenty of material on the topic
B he has some practical experience in the area
C he had an idea of a brand he wanted to target

22 Leo discovered that in Australia, recent technological developments

- A are producing less healthy types of instant coffee
B are reducing the demand for instant coffee
C are improving the quality of instant coffee

23 What do the speakers agree about the Leo's table of coffee products?

- A it needs more explanation in the text
B it is factually inaccurate in some places
C



it would be best to put this in the appendix

24 What do they decide about Shaffer's coffee as a market follower?

- A Leo needs to define his terms
- B Leo needs to provide more evidence
- C Leo needs to put it in a different section

25 What does Anna say about originality in someone's first marketing report?

- A Clear analysis of data can be considered original
- B graphs and diagrams should be original, not copied
- C reports should contain some original data collected by the student

26 What difference between school assignments and this report has surprised Leo?

- A not knowing the criteria for getting a good mark
- B being required to produce work without evidence
- C having to do a great deal of research

Questions 27 - 30

Instructions to follow

- Write ONE WORD ONLY in each gap.

Notes on specific section of marketing report



Executive summary: give a brief overview including the 27.....

Problems: Link each problem to a/an 28..... which explains it.

Implementation: practical solutions to problems

Includes details such as participants, 29..... and sequence section

is often poorly done because of lack of 30.....

Conclusion: Don't use raw material here





Section 4

Questions 31 - 40

Instructions to follow

- Complete the notes below:
- Write ONE WORD ONLY in each gap.

History of fireworks in Europe

13th - 16th centuries

- fireworks were introduced from china

- Their use was mainly to do with:

+ war

+³¹..... (in plays as festivals)

17th century:

Various features of³²..... were shown in fireworks

Scientists were interested in using from fireworks displays

To make human³³..... possible

To show the formation of³⁴.....

London:

Scientists were distrustful at first



Later they investigated³⁵.....uses of fireworks (Eg: for sailors) St. Petersburg:

Fireworks were seen as method of³⁶..... for people Paris:

Displays emphasised the power of³⁷..... Scientists

aimed to provide³⁸..... 18th century:

Italian fireworks specialists became influential Servandoni's firework display followed the

same pattern as a/an³⁹..... The appeal of fireworks extended to the middle

classes. Some displays demonstrated new scientific discoveries such as

⁴⁰.....





Practice Test 18

Section 1

Questions 1 - 10

Instructions to follow

- Listen to [Audio 18](#) and answer the questions below.
- Complete the notes below.
- Write ONE WORD AND/OR A NUMBER in each gap

Competition of Writing a Short Story



IELTSMaterial.com

Entry Detail

- Cost of entry: 5 pounds
- Length of story: approximatel **1** _____
- Requirement: Must include a/an **2** _____ ending.
- Minimum age: **3** _____
- Last entry date: **4** _____
- Web address: www **5** _____ .com
- Rule: do not **6** _____ the story to the organisms



Judging and prize details

- Assessments: The story is judged by well known **7** _____
- Prizes:
 - + top five stories will be available **8** _____
 - + the top story will be chosen by the **9** _____
 - + the first prize is a place at a writer's workshop in **10** _____





Section 2

Questions 11 - 20

Questions 11 - 17

Instructions to follow

- Complete the sentences below:
- Write **ONE WORD ONLY** in each gap.

Information of Sea Life Centre

- The Sea Life centre was previously called as the World of **11**
- The newest attraction at the centre is the splash **12**
- The main feeding time at the centre is at **13**
- Visitors can feed the **14**with a VIP ticket
- A small party will be arranged by the centre for visitor's **15**
- The petition for animal conservation will be sent to **16**
- A/An **17** can be used to test what visitor has learnt

Questions 18 - 20

Instructions to follow

- Choose THREE answers from the list below and write the correct letter A - E, next to questions 18 - 20.



What does the guide say about each attraction?

List of attractions:

Comments:

A Aquarium	must not miss 18
B Crocodile cave	temporarily closed 19
C Penguin park	large queues 20
D Seal centre		
E Turtle town		



Section 3

Questions 21 - 30

Questions 21 - 22

Instructions to follow

- Choose two letters A - E, 21 & 22.

Which TWO subjects did Martina like best before going to university?

- A Art
- B English
- C French
- D History
- E Science

Questions 23 - 26

Instructions to follow

- Complete the summary below:
- Write ONE WORD ONLY in each gap.

George's Experience of University



George is studying Mechanical Engineering which involves several disciplines. He is finding **23**..... the most difficult. At the moment, his course is only **24**..... He will soon have an assignment which involves a study of jet **25**..... He thinks there are too many **26**..... and would like less of them.

Questions 27 - 30

Instructions to follow

- Choose the correct letters A, B or C.

27 Martina thinks that the students at her university are

- A** sociable
B intelligent
C energetic

28 George hopes that his tutor will help him

- A** lose his shyness
B settle into university
C get to know his subject better

29 What does Martina know about her first assignment?

- A** the topic
B the length
C



the deadline

30 George would like to live

- A In a hall of residence
- B in a flat of his own
- C with a host family



Section 4

Questions 31 - 40

Questions 31 - 35

Instructions to follow

- Complete the notes below:
- Write ONE WORD ONLY in each gap.

Preparation Process of Making a Presentation

Initial thoughts:

Most important consideration: your audience

Three points to bear in mind

+ what they need to know

+ how **31**..... they will be

+ how big the audience will be

Structure:
Start with information that draws the audience's **32**..... end with next

33.....

Design:

The presentation needs to be **34**.....

Vary content by using a mix of words and **35**.....





Questions 36-40

Presenting:

Look at the audience, be enthusiastic and energetic

Voice - vary speed and **36**

Occasionally add **37**

Do not use weak **38** (e.g: appears, seems)

Questions and interruptions:

When asked a question, first of all you should **39** it Minimise interruptions by

40 them.






Practice Test 19

Section 1

Questions 1 - 10

Instructions to follow

-  Listen to [audio 19](#) and answer the questions below.
- Complete the notes below.
 - Write NO MORE THAN ONE WORD AND/OR A NUMBER in each gap.





Goodbye party for John

Venue:	College Dining room
Invitations (Tony) Who to invite:	- John and his 1 -Director - the office 2 - all the teachers - all the 3
Date for sending invitations: Present (Lisa) 4
Collect money:	- coffee breaks -\$ 5
Check prices for:	- CD players - set of 6 - coffee 7
Ask guests to bring:	-snacks -music 8 - 9
Ask students to prepare a	-..... 10



Section 2

Questions 11 - 20

Questions 11 - 15

Instructions to follow

- Choose the correct letters A – C.

11 To find out how much holidays cost, you should press button

- A one
B two
C three

12 Travelite currently offer walking holidays

- A only in Western Europe
B all over Europe
C Outside Europe

13 The walks offered by Travelite

- A cater for a range of walking abilities
B are planned by guides from the local area
C are for people with good fitness levels

14 On travelite holidays people holidaying alone play



- A the same as other clients
- B only a little more than other clients
- C extra only if they stay in a large room.

15 Entertainment is provided

- A When guests request it
- B most nights
- C every night

Questions 16 - 20

Instructions to follow

- Complete the table below.
- Write **NO MORE THAN TWO WORDS OR A NUMBER** in each gap.

Length of holiday	Cost per person (including all accommodation costs)	Special offers included in price
3 days	\$ 16 _____	Pick up from the 17 _____
7 days	\$350	As above plus: <ul style="list-style-type: none"> • book of 18 _____ • Maps
14 days	\$ 19 _____	As above plus membership of a 20 _____



Section 3

Questions 21 - 30

Questions 21 - 26

Instructions to follow

- Complete the table below
- Write **NO MORE THAN ONE WORD AND/OR A NUMBER** in each gap

Experiment number	Experiment	Purpose
Experiment 1	21 _____ And a table	To show how things move on a cushion of air
Experiment 2	Lots of paperclips	To show why we need a standard unit of 22 _____.
Experiment 3	23 _____ Salt and jar of water	To show how 24 _____ grow
Experiment 4	Cardboard, colored pens and a 25 _____	To teach children about how 26 _____ is made up
Experiment 5	A drill, ab old record, a needle, paper, a bolt	To make a record player in order to learn about recording sound



Questions 27 - 30

Instructions to follow

- Match your answers A - H from the box next to questions 27 – 30.

What problems do the speakers identify for each experiment?

A too messy	Experiment 1: 27 _____
B too boring	
C too difficult	Experiment 2: 28 _____
D too much equipment	Experiment 3: 29 _____
E too long	
F too easy	Experiment 4: F
G too noisy	
H too dangerous	Experiment 5: 30 _____



Section 4

Questions 31 - 40

Questions 31 - 34

Instructions to follow

- Complete the note below
- Write **NO MORE THAN ONE WORD AND/OR A NUMBER** in each gap

Shark in Australia

Length:	largest caught	16 metres
Weight:	Heaviest	31 _____ kg
Skeleton:	Cartilage	
Skin texture:	Rough barbs	
Swimming aids:	fins and 32 _____	
Food:	gathered from the ocean 33 _____ Sharks locate food by using their sense of 34 _____	

Questions 35 - 38

**Instructions to follow**

- Choose the correct letters A – C.

35 Sharks meshing uses nets laid

- A along the coastline
B At an angle to the beach
C from the beach to the sea

36 Other places that have taken up shark meshing include

- A South Africa
B New Zealand
C Tahiti

37 The average number of sharks caught in nets each year is

- A 15
B 150
C 1500

38 Most sharks are caught in

- A spring
B summer
C



winter

Questions 39 - 40

Instructions to follow

- Choose TWO letters A – G.

Which TWO factors reduce the benefits of shark nets?

- A net wrongly positioned
- strong waves and currents
- too many fish
- sharks eat holes in nets
- moving sands
- nets too short
- holes in nets scare sharks



Practice Test 20

Section 1

Questions 1 - 10

Instructions to follow

- Listen to [audio 20](#) and answer the questions below.
- Complete the notes below.
- Write ONE WORD AND/OR A NUMBER in each gap.



Bankside Recruiting Agency

Address: 497, Eastside, Docklands

Name of agent: Becky.....**1**.....

Phone number: 07866510333

Time to contact: Best time to call her in the**2**.....

Typical jobs: Clerical and admin roles, mainly in the finance industry
 Must have good**3**..... skills
 Jobs are usually for at least one**4**..... Pay is
 usually £.....**5**..... per hour

Registration process:

Wear a**6**..... to the interview



Must bring your⁷..... to the interview

They will ask questions about each applicant's⁸.....

Further information:

The⁹..... you receive at interview will benefit you. Will get access to vacancies which are not advertised.

Less¹⁰..... is involved in applying for jobs.





Section 2

Questions 11 - 20

Questions 11 - 14

Instructions to follow

- Choose the correct letters A – C.

Matthews Island Holidays

11 According to the speaker, the company

- A has been in business for longer than most of its competitors
- B arranges holidays to more destinations than its competitors
- C has more customers than its competitors

12 Where can customers meet the tour manager before travelling to the Isle of Man?

- A Liverpool
- B Heysham
- C Luton

13 How many lunches are included in the price of holidays?

- A three
- B four
- C



five

14 Customers have to pay extra for

- A guaranteeing themselves a larger room
- B booking at short notice
- C transferring to another date

Questions 15 - 20

Instructions to follow

- Write ONE WORD AND/OR A NUMBER in each gap.

Time table for Isle of Man Holiday		
	Activity	Notes
Day 1	Arrive	- Introduction by manager - Hotel dining room has view of the 15
Day 2	Tynwald Exhibition and Peel	Tynwald may have been founded in 16 not 979.



Day 3	Trip to Sniafell	Travel along promenade in a tram; train to Laxey; train to ¹⁷ of Sniafell
Day 4	Free day	Company provides a ¹⁸ for local transport and heritage sites.
Day 5	Take the ¹⁹ railway train from Douglas to Port Erin	Free time, then coach to Castletwon- former ²⁰ has old castle.
Day 6	Leave	Leave the island by Ferry or plane.



Section 3

Questions 21 - 30

Questions 21 - 26

Instructions to follow

- Choose SIX answers from the list below and match the correct letter, A - H to question 21 – 26.

What did findings of previous research claim about the personality traits a child is likely to have because of their position in the family?

Personality traits	Position in the family
A outgoing	the eldest child 21
B selfish	a middle child 22
C independent	the youngest child 23
D attention-seeking	a twin 24
E Introverted	an only child 25
F co-operative	a child with much older siblings. 26
G caring	
H competitive	



Questions 27 - 28

Instructions to follow

- Choose the correct letters A - C.

27 What do the speakers say about the evidence relating to birth order and academic success?

- A There is conflicting evidence about whether oldest children perform best in intelligence tests.
- B There is little doubt that birth order has less influence on academic achievement than socioeconomic status
- C Some studies have neglected to include important factors such as family size.

28 What does Ruth think is surprising about the difference in oldest children's academic performance?

- A It is mainly thanks to their role as teachers for their younger siblings.
- B The advantages they have only lead to a slightly higher level of achievement.
- C The extra parental attention they receive at a young age makes little difference.

Questions 29 - 30

Instructions to follow

- Choose TWO letters A – E.

Which TWO experiences of sibling rivalry do the speakers agree has been valuable for them?

- A learning to share



- B learning to stand up for oneself
- C learning to be a good loser
- D learning to be tolerant
- E learning to say sorry



Section 4

Questions 31 - 40

Instructions to follow

- Complete the notes below.
- Write ONE WORD ONLY in each gap.

The Eucalyptus Tree in Australia

Importance:

It provides³¹..... And food for a wide range of species.

Its leaves and provide³²..... Which is used to make a disinfectant

Reasons for present decline in number:

Diseases:

(i) 'Mundulla Yellow'

- Cause - lime used for making³³..... Was absorbed.
- Trees were unable to take in necessary iron through their roots.

(ii) 'Bell miner associated Dieback'

- Cause³⁴..... feed on Eucalyptus leaves
- They secrete a substance containing sugar
- Bell miner birds are attracted by this and keep away other species



Bushfires

William Jackson's theory:

- High frequency bushfires have an impact on vegetation resulting in the growth of³⁵.....
- Mid frequency bushfires result in the growth of eucalyptus forests because they make more³⁶..... Available to the trees.
- Maintain the quality of the³⁷.....
- Low frequency bushfires result in the growth of³⁸..... rainforest's which is: a³⁹..... ecosystem, an ideal environment for the⁴⁰..... of the bell miner.





Practice Test 21

Section 1

Questions 1 - 10

Instructions to follow

🔊 Listen to [audio 21](#) and answer the questions below.

Questions 1 - 5

Instructions to follow

- Complete the form below.
- Write **NO MORE THAN ONE WORD AND/OR A NUMBER** in each gap.

VIDEO LIBRARY APPLICATION FORM

First names: Louise Cynthia

Address: Apartment 1, 72¹.....street
Highbridge

Postcode:².....

Telephone: 9835 6712 (home)
.....³.....(work)



Driver's license number:⁴.....

Date of birth: Day: 25th Month:⁵..... Year:
1977

Questions 6 - 8

Instructions to follow

- Choose three letters A – F.

What type of films does Louise like?

- A Action
- B Comedies
- C Musicals
- D Romance
- E Westerns
- F Wildlife

Questions 9 - 10

Instructions to follow

- Write NO MORE THAN TWO WORDS for each answer.



How much does it cost to join the library?⁹.....

When will Louise's card be ready?¹⁰.....





Section 2

Questions 11 - 20

Questions 11 - 13

Instructions to follow

- Complete the note below
- Write NO MORE THAN TWO WORDS in each gap

Expedition across Attora Mountains

Leader: Charles Owen

Prepared a¹¹..... for the trip Total length of
the trip¹².....

Climbed highest peak in¹³.....

Questions 14 - 15

Instructions to follow

- Choose the correct letters A – C.

¹⁴ What took the group by surprise?

- A the amount of rain
- B the number of possible routes
- C the length of the journey



15 How did Charles feel about having to change routes?

- A He reluctantly accepted to it
- B He was irritated by the diversion
- C It made no difference to his enjoyment.

Questions 16 - 18

Instructions to follow

- Choose THREE letters A – F.

What does Charles say about his friends?

- A He met them at one stage on the trip
- B They kept all their meeting arrangements
- C One of them helped arrange the transport
- D One of them owned the hostel they stayed in
- E Some of them travelled with him
- F Only one group lasted the 96 days

Questions 19 - 20

Instructions to follow

- Choose TWO letters A – E.

What does Charles say about the donkeys?



- A He rode them when he was tired
- B He named them after places
- C One of them died
- D They behaved unpredictably
- E They were very small





Section 3

Questions 21 - 30

Questions 21 - 25

Instructions to follow

- Complete the table below.
- Write **NO MORE THAN ONE WORD OR A NUMBER** in each gap.

	TIM	JANE
Day of arrival	Sunday	21 _____
Subject	History	22 _____
Number of books to read	23 _____	24 _____
Day of first lecture	Tuesday	25 _____

Questions 26 - 30

Instructions to follow

- Write **NO MORE THAN THREE WORDS** for each answer.

What is Jane’s study strategy in lectures?

..... 26

What is Tim’s study strategy for reading?

..... 27



What is the subject of Tim's first lecture?

..... 28

What is the title of Tim's first essay?

..... 29

What is the subject of Jane's first essay?

..... 30





Section 4

Questions 31 - 40

Questions 31 - 35

Instructions to follow

- Complete the table below
- Write **NO MORE THAN TWO WORDS** in each gap.

Course	Type of course: duration and level	Entry requirements
Physical Fitness Instructor	Example Six-month certificate	None
Sports Administrator	31 _____	32 _____ in sports administration
Sports Psychologist	33 _____	Degree in psychology
Physical Education Teacher	Four-year degree in education	34 _____
Recreation Officer	35 _____	None

Questions 36 - 40

Instructions to follow

- Choose the correct answer and move it into the gap.

What is the main role of each job?



Job

Main role

Physical fitness instructor _____ **36**

Sports administrator _____ **37**

Sports psychologist _____ **38**

Physical education trainer _____ **39**

Recreation officer _____ **40**

A the coaching of teams

B the support of elite athletes

C guidance of ordinary individuals

D community health

E the treatment of injuries

F arranging matches and venues

G the rounded development of children





Practice Test 22

Section 1

Questions 1 - 10

Instructions to follow

- 🔊 Listen to [audio 22](#) and answer the questions below.
- Complete the form below.
- Write ONE WORD AND/OR A NUMBER in each gap.

Properties in Accommodation

Name: Jane Ryder

Phone number: (0044) 1

Email address: richard@..... 2co.uk

Occupation: a local 3

Type of accommodation: - a 2-bedroom apartment wanted (must have its own 4)

-no 5 Required (family bringing theirs)

- a/an 6 in the kitchen is preferable

Preferred location: near a/an 7



Maximum rent: **8** per month

Other requests: the accommodation has to be **9** In the daytime

How did you hear? Through a/an **10**





Section 2

Questions 11 - 20

Questions 11 - 15

Instructions to follow

- Complete the sentences.

Safety Guidelines

- The police officer suggests neighbours give each other their details of

..... **11**

- Neighbours should discuss what to do if there's any kind of **12**

- It's a good idea to leave on the **13**

- Think carefully about where you put any **14**

- It's a good idea to buy good quality **15**

Questions 16 - 20

Instructions to follow

- Choose FIVE answers from the list below and write the correct letter, A - G, next to questions 16 - 20.



Proposed crime prevention measures

- A install more lighting
- B have more police officers on patrol
- C remove surrounding vegetation
- D Contact local police
- E fix damage quickly
- F change road design
- G use security cameras

List of jobs:

- skate park 16
- local primary schools 17
- Abbotsford street 18
- Shops on Victoria street ... 19
- supermarket car park 20





Section 3

Questions 21 - 30

Questions 21 - 25

Instructions to follow

- Choose the correct letters A, B or C.

Food Waste

21 What point does Robert make about the 2013 study in Britain?

- A it is focused more on packaging than wasted food
- B it proved that households produced more waste than restaurants.
- C it included liquid waste as well as solid waste

22 The speakers agree that food waste reports should emphasize the connection between carbon dioxide emissions and

- A food production
- B transport of food to landfill sites
- C distribution of food products

23 Television programs now tend to focus on

- A the nutritional value of food products
- B the origin of food products
- C



the chemicals found in food products

24 For Anna, the most significant point about food waste is

- A the moral aspect
- B the environmental impact
- C the economic effect

25 Anna and Robert decide to begin their presentation by

- A handing out a questionnaire
- B providing statistical evidence
- C showing images of wasted food.



Questions 26 - 30

Instructions to follow

- Choose FIVE answers from the list below and write the correct letter, A - G next to questions 26 – 30.

What advantages do the speakers identify for each of the following projects?

List of advantages:

- A it should save time
- B it will create new jobs

List of projects:

- edible patch 26
- ripeness sensor 27

C



it will benefit local communities

waste tracking technology **28**

D it will make money

smartphone application **29**

E it will encourage personal responsibility

food waste composting..... **30**

F it will be easy to advertise

G it will involve very little cost





Section 4

Questions 31 - 40

Instructions to follow

- Write ONE WORD ONLY in each gap.

Kite-making by the Maori people of New Zealand

Making and appearance of the kites:

- the priests who made the kites had rules for size and scale
 -³¹..... was not allowed during a kite's preparation
 - often represented a bird, a god, or a/an³².....
 - had frames that were decorated with grasses and³³.....
 - had a line of noisy³⁴..... attached to them
 - could be triangular, rectangular or³⁵..... shaped
 - Had patterns from clay mixed with³⁶..... oil
 - sometimes had human head masks with³⁷..... and a tattoo
- Purpose and function of kites:
- a way of sending³⁸..... to gods
 - a way of telling other villages that a/an³⁹..... was necessary
 - a mean of⁴⁰..... If enemies were coming



Practice Test 23

Section 1

Questions 1 - 10

Instructions to follow

Listen to [audio 23](#) and answer the questions below.

Questions 1 - 7

Instructions to follow

- Complete the form below.
- Write ONE WORD AND/OR A NUMBER in each gap.

English courses for international students

Course available:	- writing in first term - 1 in second term - 2 and grammar throughout the year
	- 3 cases during long vacation
Class sizes:	maximum capacity is 4



Costs:	often paid by the 5
Exams:	available in 6
Enrollment:	must enroll by 7

Questions 8 - 10

Instructions to follow

- Write THREE letters, A – G.

Which THREE items does the student need to bring to the first class?

- A passport
- B computer disk
- C note from tutor
- D notebook
- E student identity card
- F dictionary
- G registration form



Section 2

Questions 11 - 20

Questions 11 - 15

Instructions to follow

- Choose FIVE answers from the box and write the correct letter, A - C, next to questions 11 – 15.

Which types of transport is true with the following features?

Transportation

A tube
 B train
 C bus

IELTSMaterial.com

Features of transport

cheapest **11**

A B C

most convenient..... **12**

A B C

most comfortable..... **13**



A B C

fastest **14**

A B C

most frequent service **15**

A B C

Questions 16-20

Instructions to follow

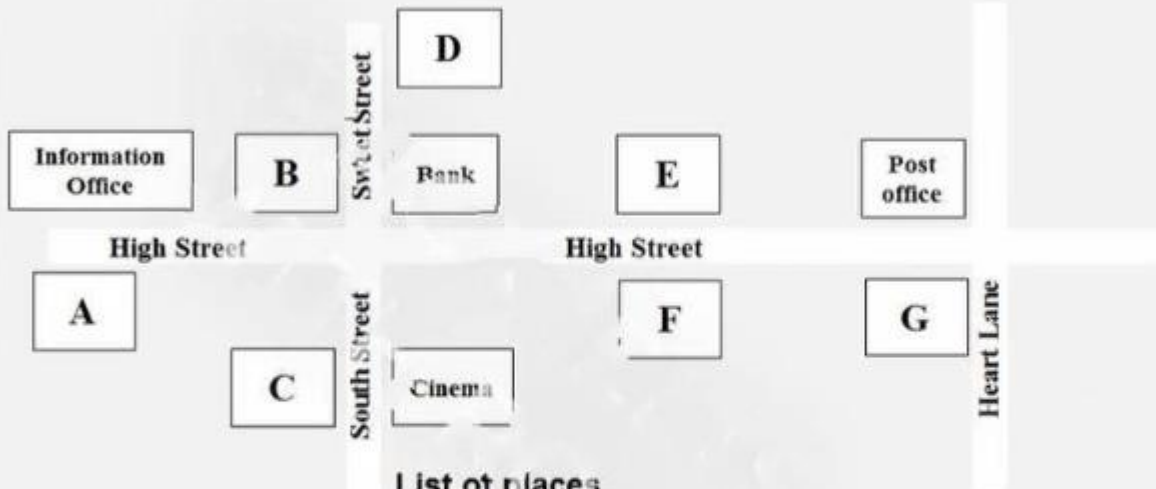
- The map has seven gaps, **A-G**. Choose the correct gap and move it into the corresponding place.





Questions 16 - 20

The map has seven gaps, **A-G**. Choose the correct gap and move it into the corresponding place.



List of places

- bus stop:
- train station:
- tube entrance:
- transport ticket office:
- taxi rank:

om



16 _____

- A B C D E F G

17 _____

- A B C D E F G

18 _____

- A B C D E F G

19 _____

- A B C D E F G

20 _____

- A B C D E F G



Section 3

Questions 21 - 30

Questions 21 - 23

Instructions to follow

- Choose THREE answers from the box and write the correct letter A - E next to questions 21 – 23.

What is the advantage of each course?

Advantages of the course

Courses

- | | |
|--|--|
| <ul style="list-style-type: none"> A will be tested in the final exams B will be useful for a future job C will help with research skills D will improve writing skills E will support material already covered | <p>Science and ethics²¹.....</p> <p>Pharmacology prelim.....²².....</p> <p>Reporting test results.....²³.....</p> |
|--|--|

Questions 24 - 30

Instructions to follow

- Complete the sentences below
- Write ONLY ONE WORD in each gap.

- The Maths course will run in the²⁴..... term



- The tutor for Pharmacology is visiting from²⁵.....
-²⁶..... for the project must be submitted by the end of January - Resources for experiments are available in the newly built²⁷.....
- Extra²⁸..... will be held in December
- Students are allowed to do presentations in²⁹.....
- Course assessment will be based on a/an³⁰.....





Section 4

Questions 31 - 40

Questions 31 - 37

Instructions to follow

- Complete the table below.
- Write **ONLY ONE WORD** in each gap.

	New features	Size	Problems
Transport	Individual transportation _____ 31 _____	Roads will be _____ 31 _____	Levels of investment
Commercial areas	Roofs will have _____ 32 _____	One fifth of current area	_____ 33 _____ will be limited to outskirts
Residential areas	Homes made of _____ 34 _____	Will be limited to 15,000	Providing enough housing for _____ 35 _____ citizens
Energy sources	_____ 36 _____ will be an energy source	Energy plants will be smaller	Noise and congestion caused by _____ 37 _____

Questions 38 - 40

Instructions to follow

- Choose THREE letters, A – F.



Which THREE types of accommodation does the speaker say will increase in the city centres?

- A flats for rent
- B social housing
- C homes for retired people
- D private housing
- E buildings for a company and residing
- F smart apartments





Practice Test 24

Section 1

Questions 1 - 10

Instructions to follow

- Listen to [audio 24](#) and answer the questions below.
- Write **NO MORE THAN THREE WORDS AND/OR A NUMBER** for each answer.

Wildlife conservation society

Application for membership

Heard of WCS from: _____ 1	
Address:	21, Beel street, Leeds
Postcode:	_____ 2
Phone number:	01173 58642
Email address:	mj@_____ 3



Length of membership: Type of membership: Fee	_____ 4 _____ years _____ 5 _____ £ _____ 6 _____
Payment details: Name of bank:	direct debit _____ 7 _____
Account name:	Michael Jones
Account number:	01059612
Date of first payment: Reference number:	_____ 8 _____ _____ 9 _____
Other requests:	- extra information pack - _____ 10 _____



Section 2

Questions 11 - 20

Questions 11 - 18

Instructions to follow

- Write **NO MORE THAN TWO WORDS AND/OR A NUMBER** for each answer.

Spring Festival

Event	Location	Date & Time	Other Information
Firework display	Near the _____ 11	4 September 9 pm	Pack a _____ 12 and blanket
Display of _____ 13	Central Park	Daily	Buses run from the town centre every _____ 14 minutes
The _____ 15 show	Exhibition Centre	10-15 September 9 am to 10 pm	
"Grow Your Imagination"	In the _____ 16	11-19 September	
"Swing in Spring"	In the _____ 17	17 & 18 September	Saturday matinee performance at _____ 18

Questions 19 - 20

**Instructions to follow**

- Choose the correct letter A, B or C.

19 In the Spring Festival competition, you can win

- A A family pass to “Balloon down under”
- B A cheque for \$200.
- C A flight in a hot air balloon.

20 You can get an entry form for the competition from

- A the radio station
- B the newspaper
- C the festival’s website



Section 3

Questions 21 - 30

Instructions to follow

- Write **NO MORE THAN THREE WORDS** for each answer.

Archeology course:

- Can be combined with any other subject except with²¹.....
- Has three²²..... modules in first semester

Module 1

Title:²³.....
 Lecturer: Dr. Morris
 Learning method: Lectures and practical sessions
 Content: Based on processes Recording
²⁴.....
 Interpretation
 Display
 Assessment: By²⁵.....

Module 2

Title:²⁶.....
 Lecturer: Prof. Elliot



Content:²⁷ And development of built environments

Assessment: By²⁸..... examination

Module 3:

Title: Method and Science

Lecturer: Dr. Thompson

Content: Standard techniques in fieldworks and analysis

Learning method: 50% lab work, 50%²⁹.....

Site survey at the end of module: (the³⁰..... is to be announced later)





Section 4

Questions 31 - 40

Questions 31 - 33

Instructions to follow

- Choose the correct letter, A, B or C.

31 What impact does Marc Prensky believe that digital technology has had on young people?

- A It has altered their thinking patterns
- B It has harmed their physical development
- C It has limited their brain capacity

32 “Digital immigrants” tend to access computers

- A using their native language
- B less efficiency than young people
- C for less important information

33 What example is given of having a “digital accent”?

- A Having less effective typing skills
- B Doing thing the old-fashioned way
- C Being unable to understand instructions



Questions 34 - 40

Instructions to follow

- Choose the correct letter, A, B or C next to questions 34 – 40.

Which theorist makes each of the following points?

Theorists

- A Allen
- B James
- C Vander



Points made:

- 34 Current teaching methods don't work
- 35 Many students don't understand computers.....
- 36 Computer technology doesn't interest all students.....
- 37 Students can still learn the traditional way
- 38 Students still need to learn research skills
- 39 We should use computer games to teach
- 40 Computers can't replace educators



Practice Test 25

Section 1

Questions 1 - 10

Instructions to follow

- Listen to [audio 25](#) and answer the questions below
- Write ONE WORD AND/OR A NUMBER in each gap.

Advertisement for Old Laptop

Condition: Almost new
 Weight: 1
 Make: Allegro
 Memory: 2GB
 Screen: 3
 Touchpad: With cordless mouse Number of
 ports: 02
 Battery: Lasts around 4
 Lab test programs: Not 5
 Extras: webcam, printer with scanner and
 6 smart case



Price:

£.....⁷.....

Contact Details:

Name:

David.....⁸.....

E-mail address:

DIB7791@hotmail.com

Mobile Number:

.....⁹.....

Advert place on:

.....¹⁰.....





Section 2

Questions 11 - 20

Questions 11 - 12

Instructions to follow

- Choose TWO letters A – E.

What TWO changes to the organization of this year's festival are mentioned?

- A free parking
- B free refreshments
- C new uniforms
- D free concert
- E large tents

Questions 13 - 15

Instructions to follow

- Complete the table below:
- Write NO MORE THAN TWO WORDS AND/OR A NUMBER in each gap.



Teams	Purpose	Meeting point	Time
Beach team	Pick up litter, etc	_____ 13 _____	8 am
Town team	Arrange _____ 14 _____	Village hall	_____ 15 _____

Questions 16 - 20

Instructions to follow

- Choose the correct letters A, B or C.

16 What does the speakers say about the judges in the competitors?

- A Most people judging will have some experience
- B None of the judges will have experience
- C Every judge will be experienced

17 The winner in each of the competitions will

- A be given vouchers
- B be awarded a cash prize
- C receive book-tokens

18 The profits from the marathon will be given to the Children’s hospital to help

- A buy new specialist equipment
- B decorate the hospital wards



C provide the books for the children

19 Wardens will be needed at the car park

A they helped organize the parking well last year

B The parking last year was dis-organized

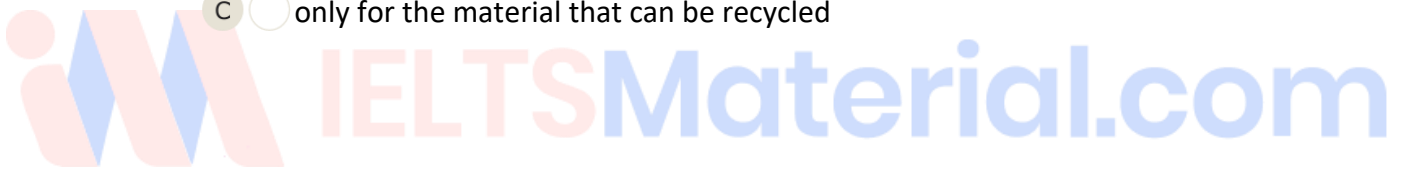
C They will be needed to collect parking fees

20 Bags will be provided by the council

A for all the rubbish

B Only for the food rubbish

C only for the material that can be recycled





Section 3

Questions 21 - 30

Questions 21 - 22

Instructions to follow

- Complete the sentences below:
- Write NO MORE THAN TWO WORDS in each gap.

Study methods

People usually spend approximately²¹..... on concentrating their lectures.

The optimal method to approach lectures is to do the necessary²²..... in advance.

Questions 23 - 26

Instructions to follow

- Choose FOUR answers from the box and write the correct letter A - C next to questions 23 – 26.

What were students' opinions on the study techniques?

Opinions

- A good method
- B no strong opinion
- C was not good method

Technique

writing essay plans:²³.....

discussing ideas:²⁴.....

reading whole chapters²⁵.....



Skim reading26.....

Questions 27 - 30**Instructions to follow**

- Choose the correct letter A, B, or C.

27 According to the research that Susan conducted, most students believe

- A Time management is generally quite important
- B Time management isn't very important
- C Time management is very important to young students

28 What did students complain about their studies?

- A They had to get up early in the morning.
- B They had to earn money to support their studies
- C They had to work part time on weekends

29 Susan discovered that most of the students she surveyed

- A would prefer it if they didn't have exams
- B actually quite liked exams
- C actually dreaded the exams

30 What were Susan's findings on exam prediction techniques?



- A All the younger students like to prepare the exams in a short time
- B Few older students spent much time on revising
- C A few younger students study the whole night.





Section 4

Questions 31 - 40

Instructions to follow

- Complete the notes below:
- Write ONE WORD ONLY in each gap.

Architecture roles in people's lives Implementation plan:

- The purpose of data collection was to test people's³¹....., i.e. unhappy, happy
- The initial plan to use a questionnaire was abandoned, because it was extremely³².....
- The scale method was rather³³.....to collect people's response
- The final images were produced by aiding of³⁴..... resources
- The chosen images were preserved by stiff³⁵.....
- People who formed part of the sample were³⁶..... from various places.
- Appointing a leader for the group was to keep the team not going various³⁷.....

Reaction of respondents:

- The reaction of the 11- 18- year-old group was utmost³⁸.....
- The 20-40-year-old group mostly scored about³⁹.....
- Approximately⁴⁰.....respondents who had no response




Practice Test 26

Section 1

Questions 1- 10

Instructions to follow

 Listen to [audio 26](#) and answer the questions below.

Question 1-5

Instructions to follow

- Complete the table below.
- Write ONE WORD AND/OR NUMBERS for each answer.





Job Hunting

Company's Name	Job details	Reference number	Contact
Example POWER (manufacturing company)	Work in a _____ 1 section	SW35FT	Jane _____ 2
COTTON (grocery company)	- Good pay - Work in _____ 3 office - in a _____ 4 chance of promotion	_____ 5	Go to office

Question 6 -10

Instructions to follow

- Complete the notes below.
- Write ONE WORD for answer

Notes on Jobs

- Local jobs can be found in the _____
6
- Buy the _____
7 to get one free magazine (Job Plus)
- Feel stress and spend a lot of time looking for jobs
- Advisable to go to an _____
8 instead of the recruitment seminar



- Bring a student card (10% discount)
- Referee:
 - former boss (once had a job)
 - one of the 9 (if not)
- Intend to take the art course
- Fill out a 10 form at the end of the course.





Section 2

Questions 11-20

Instructions to follow

- Complete the notes below.
- Write NO MORE THAN TWO WORDS for each answer.

Tower Hill Pageant Londinium

Romans built _____ **11** _____ linked by roads.

Londinium was a port.

Lundenwic

It was the port of London in _____ **12** _____ Aldwych is a street named after 'old port' in Old English.

People sold goods and _____ **13** _____

English King Alfred moved the population to the Roman walls so as to defend against

_____ **14** _____

London prior to Norman Conquest

King Edward built a church in 'Westminster'.

He also built a palace for _____ **15** _____ William Conqueror built _____ **16** _____, including the Tower of London.

He also had the Domesday Book - it was a _____ **17** _____ about the land and livestock in British counties.



Mediaeval London

Imports would go to the quays. Exports were taken to Customs House and -
_____ **18** _____ were collected. The fire was a constant threat in mediaeval London.

Tudor London

- Fine houses were located to the west of London.
- The Globe Theatre was direct across from the first stone bridge.
- Commerce was within _____ **19** _____

The first stone bridge had 19 arches and a _____ **20** _____ which was raised when an attack would occur.





Section 3

Questions 21 - 30

Question 21 - 26

Instructions to follow

- Choose the correct letter, A, B or C.

Willows Studies

21 What field is Willows currently focused on?

- A Specialising in one product.
- B making a variety of products
- C adding a lot of retail outlets

22 How did the students feel about the software?

- A The professor contacted the company.
- B An article was read in a newspaper.
- C A student works part-time during the vacations.

23 How did the student feel about the software?

- A It's not easy to predict.
- B It's slow for drawing designs.
- C It had a good interface.



24 How did the students find out about the effects of the software on the company?

- A They went to the IT department.
- B They talked with the manager.
- C They inspected the accounts.

25 The reason why the students have a face-to-face interview alone is that

- A they could prepare for exams.
- B there will be less disturbance.
- C it's less realistic.

26 How did the two students perform in the exam?

- A very disappointing
- B significantly good
- C above the average

Question 27 – 28

Instructions to follow

- Choose two letters A-E.

In which TWO ways will the new system affect the company?



- A gain more profit
- B employ more new staff
- C increase sales
- D reduce production time
- E cut labour costs

Questions 29-30

Instructions to follow

- Choose TWO letters for questions 29 & 30.

Which TWO effects will the new system have on new clients?

- A getting more involved in the design
- B obtaining more contacts
- C linking at home to do online work
- D wasting less time
- E decreasing labour costs



Section 4

Questions 31-40

Questions 31-32

Instructions to follow

- Complete the sentences below.
- Write **NO MORE THAN ONE WORD** for each answer.

LED is a _____ ³¹ _____ for light-emitting diode. H. J. Round

discovered a _____ ³² _____ called electroluminescence.

Questions 33-34

Instructions to follow

- Circle the correct letter A-G.

Which TWO of the following items included the first commercial LEDs?

- A TVs
- B electronic test devices
- C telephones
- D interior lighting



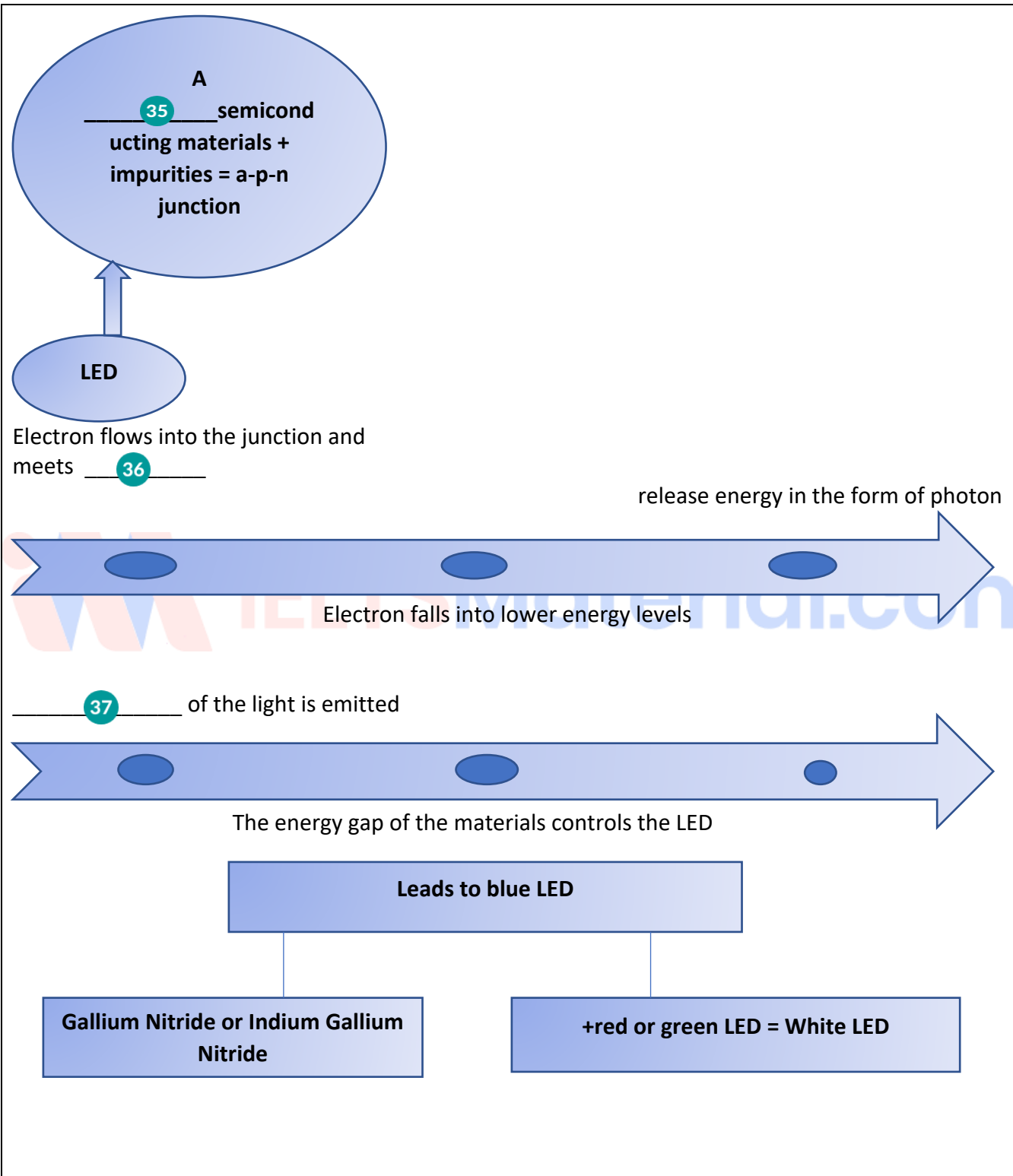
- E radios
- F household appliances
- G lab equipment

Questions 35-40

Instructions to follow

- Complete the diagrams below.
- Write NO MORE THAN THREE WORDS for each answer.







White LED

Resulted from

38

Phosphor-based

Near UV emitters

Used to inspect anti-counterfeit
39 in banknotes.

OLED

Based on 40 eg:
polymers are used in producing flexible visual displays.



Practice Test 27

Section 1

Questions 1 - 10

Instructions to follow

- 🔊 Listen to [audio 27](#) and answer the questions below.
- Complete the table below.
- Write ONE WORD AND/OR A NUMBER for each answer.

Notes on A Part-time Society



Example

Name of society: Leighton

Location:¹..... house

Want:²..... actors and singers (no experience required)

Transportation: shuttle services (need someone who is able to³.....)

Meeting time: 6:00-8:00pm every⁴.....

Close time: during⁵.....

Membership fee (including⁶.....)

-£40 for employed members (under 30 years of age)



- £ 60 for employed members (30-60 years of age)
- £**7**..... for retired or unemployed members (over 60 years of age)

Minimum joining age

.....**8**.....

Most members are

- friendly
 - fond of culture and music
 -**9**.....authors looking for new experiences to write about in their books Charity
- The children's**10**..... will get the money raised by the annual dinner.





Section 2

Questions 11-20

Instructions to follow

- Complete the table below.
- Write NO MORE THAN THREE WORDS for each answer.

Name of Room	Characteristics	Furniture and Features
Entrance Hall Vestibule or Octagon Hall	A ¹¹ colour	Chinese style chairs brass enclose
Entrance Hall	With..... ¹² panels of serpents and dragons	furniture looks like pollarded oak



Long Gallery	 ¹³ and Oriental pots
Banqueting Room		A dining table laid for the ¹⁴, with thirty-six chairs
Great Kitchen or King's Kitchen	Four ¹⁵	A ¹⁶ used to turn 5 spits
Music Room	Nine ¹⁷	
Yellow Bow Rooms	A lobby Two bedrooms and ¹⁸	satinwood and mahogany
Queen's Bedroom	Queen's bedroom Maid's room Closet	Brussels ¹⁹ with ²⁰ bedding and curtains



Section 3

Questions 21 - 30

Questions 21-25

Instructions to follow

- Choose the correct letter, A, B or C.

21 What has Irene recently done?

- A She has almost finished planning the experiment.
- B She is not applying herself enough to her work.
- C She spends a lot of time in the laboratory.

22 What is Bill's attitude toward Kim?

- A He is grateful for Kim's contribution.
- B He is not fond of Kim's tastes in clothes.
- C He thinks Kim is not good at laboratory work.

23 What does Jen think of the other people in the group?

- A The boys are good at maths which is very helpful
- B They would fail the experiment without Irene's contribution.
- C Irene has completed the data analysis so the experiment is nearly done.

24 How did Jen and Bill feel about Linda?



- A She was always submitted her work late for the group work
- B She was difficult to get in touch with.
- C She thought it was easy to get a high score.

25 Why was Jen invited to the professor's individual project?

- A She was quite popular among students.
- B She always finished reading all the assignments.
- C She was close to the professor.

Question 26- 30

Instructions to follow

- Choose FIVE answers from the box and write the correct letter, A-G, next to questions 26-30.

What task has been given to each person?

Tasks:

- A Abstract
- B Acknowledgement
- C Methodology
- D Bibliography
- E Literature review
- F Results



G Discussion

Persons:

26 Irene

- A B C D E F G

27 Kim

- A B C D E F G

28 Jen

- A B C D E F G

29 Bill

- A B C D E F G

30 Linda

- A B C D E F G

IELTSMaterial.com



Section 4

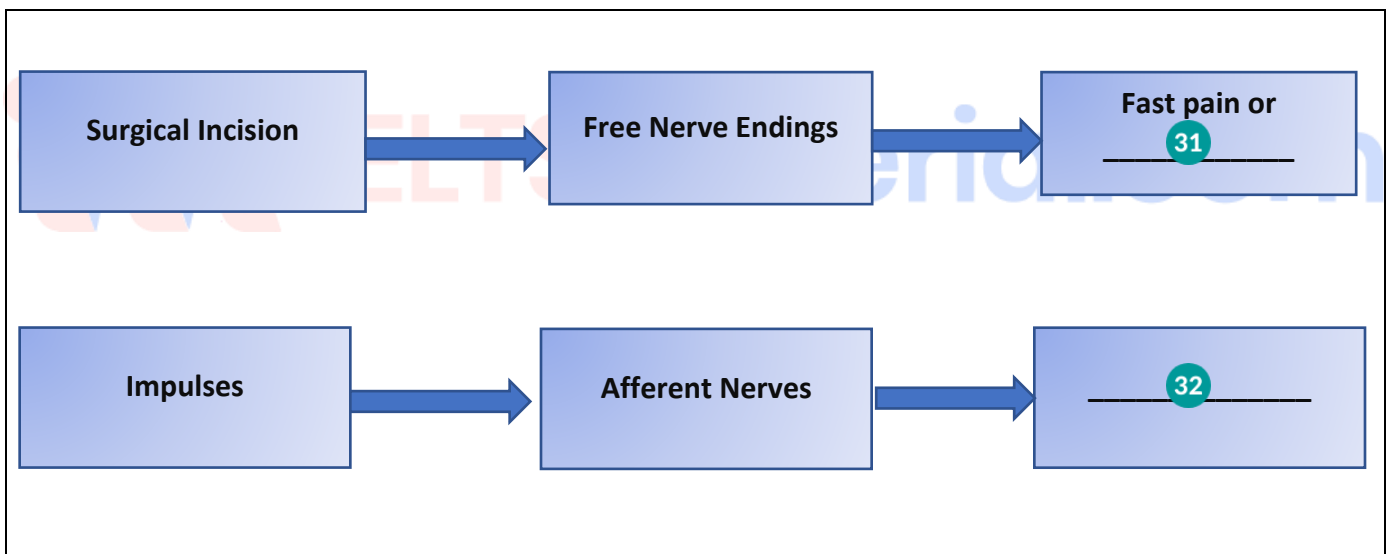
Questions 31-40

Questions 31-35

Instructions to follow

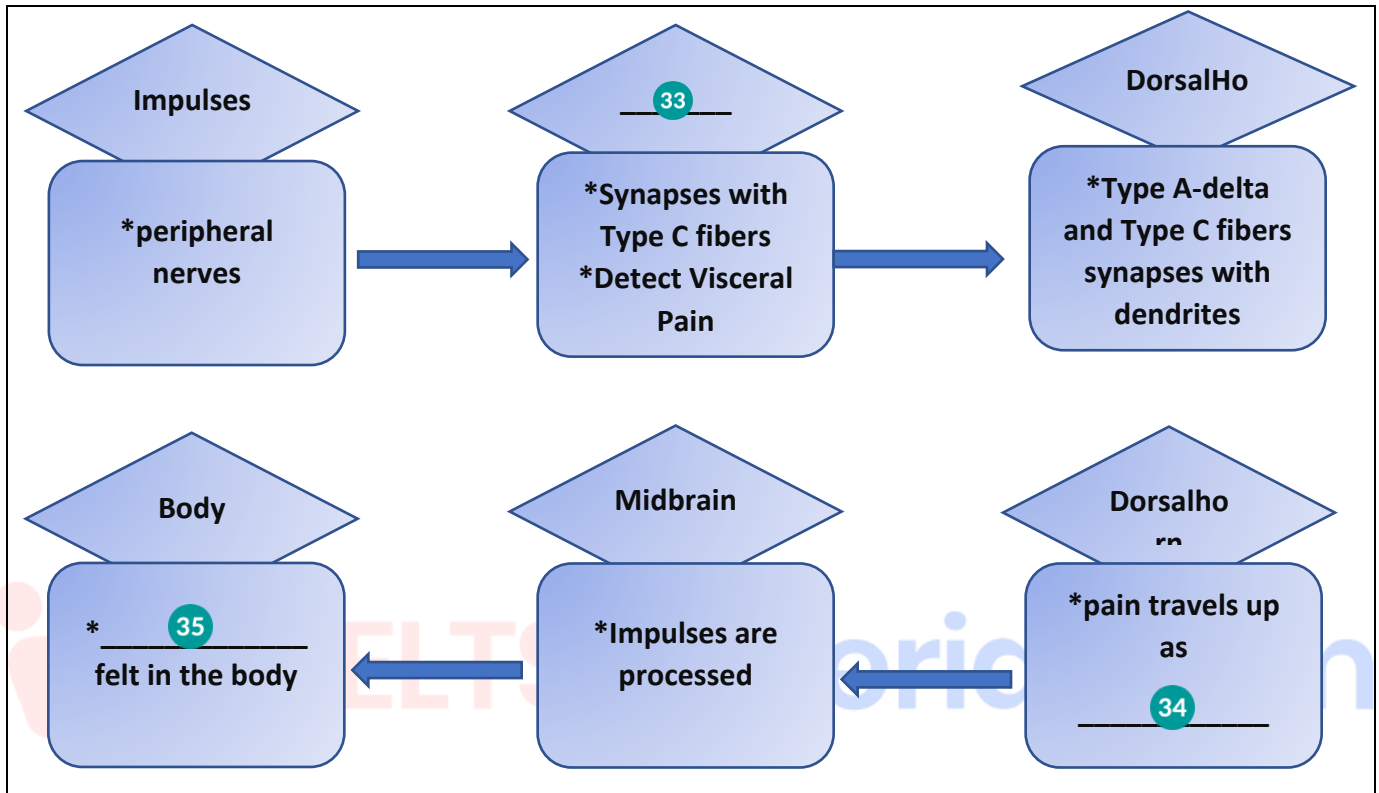
- Complete the sentences below in the flowchart.

Cutaneous Pain





Visceral Pain



Question 36

Instructions to follow

- Circle the correct letter A-C.

36 Which of the following is an example of reaching the pain threshold?

- A spilling boiling water
- B burning your hand
- C scalding hot water



Question 37

Instructions to follow

- Complete the sentence below.
- Write NO MORE THAN TWO WORDS for each answer.

Pain tolerance refers to³⁷.....to pain.

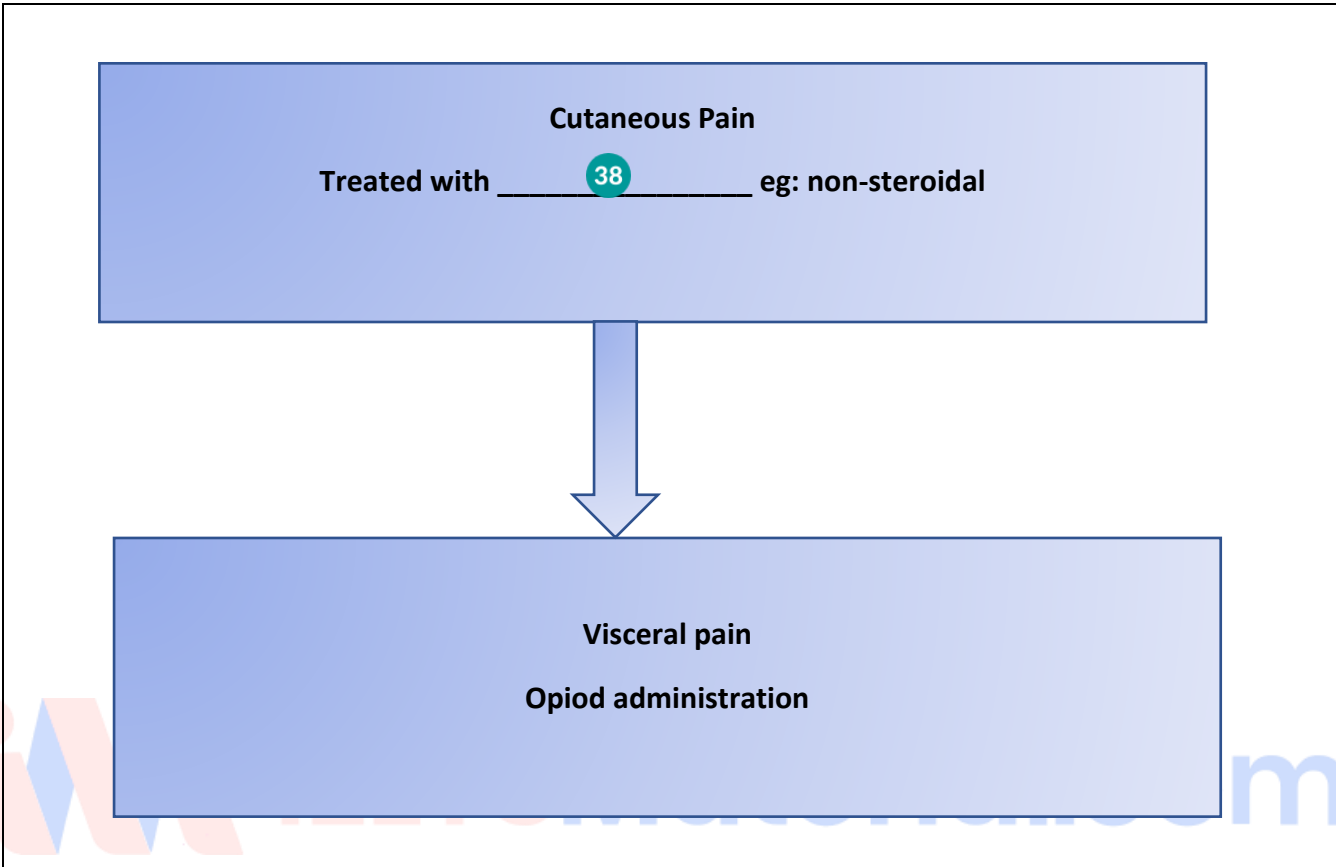
Patients should complete a questionnaire known as Pain Scales: Universal Pain Assessment Tool.

Question 38

Instructions to follow

- Complete the flowchart below.
- Write NO MORE THAN TWO WORDS for your answer







Questions 39-40

Instructions to follow

- Complete the sentences below.
- Write NO MORE THAN TWO WORDS or A NUMBER for each answer.

Endorphins are a³⁹..... Their chemical structure is similar to opioids. Pain Management refers to the use of combinations of drugs, e.g. administration of paracetamol and opioids. It decreases the amount of opioids to⁴⁰.....





Practice Test 28

Section 1

Questions 1 - 10

Instructions to follow

- 🔊 Listen to [audio 28](#) and answer the questions below.
- Complete the notes below.
- Write NO MORE THAN TWO WORDS AND/OR A NUMBER for each answer.

Job Enquiry

Example

- name: Freddie Lea
- location:¹..... Island
- Starting date:².....
- Age: 17
- Four vacancies for³.....
- Pay: 5.52 per hour
- Qualities required: the ability to⁴.....
- Duties:
 - + Offer table service
 - + Look after⁵.....
- Extra advantage: the ability of the candidate to⁶.....
- Benefits:



+ free 7

+ a 8 will be provided

- Interview arranged for 9 at 10:00 am

- Need to take

+ a reference letter from employer

+ a bank statement

+ the application form with a

..... 10





Section 2

Questions 11-20

Questions 11-15

Instructions to follow

- Complete the notes below.
- Write NO MORE THAN THREE WORDS and/or A NUMBER for each answer.

Green Home Three sections available: 11 groceries	
Baking Potatoes (Kg) Six 12	£1.57 £0.60

Organic Food

Organic courgettes Brussels sprouts	£2.09 13
--	--------------------------------

Fair Trade Products -

..... **14** is destined to the farmers in developing countries

Laundry Care



15

You can get a crystal rain & white lily washing powder if you buy two bottles of softener.

Questions 16-17

Instructions to follow

- Circle TWO letters A-F.

Which TWO of the following are own-label products?

- A washing powder
- B degreaser
- C plughole
- D washing-up liquid
- E oven cleaner F sink cleaner

Questions 18-19

Instructions to follow

- Circle TWO letters A-F.

Which TWO of the following are given for free in the kitchenware aisle?

- A saucepan with glass lid
- B stainless steel peeler
- C sandwich tin



- D apron and oven glove
- E aluminium foil
- F cup deep bun tray

Question 20

Instructions to follow

- Complete the sentence below.
- Write NO MORE THAN THREE WORDS for your answer.

You can get a free corkscrew if you buy a²⁰.....





Section 3

Questions 21 – 30

Question 21 – 26

Instructions to follow

- Choose the correct letter, A, B or C.

21 How could ancient Africans recognize different stars?

- A by the location of the stars
- B by the way stars affect each other
- C by the distance between two stars

22 In which way do the Weyaka people like to deal with their money?

- A open bank accounts
- B assist others
- C lend money to others

23 What do the Africans obtain from their suffering?

- A ways of protecting their environment
- B approaches to improving their international status
- C reasons for conquering drought

24 What are the local people concerned with?



- A having enough food
- B getting rid of the disease
- C going back to their former environment

25 What is the reason for the declining financial condition of the African people?

- A They find it hard to trade because of the undeveloped transportation system.
- B They have difficulty in mining minerals.
- C They refuse to develop a range of commercial activities.

26 When can the African people expect to stop suffering from starvation?

- A next year
- B in the long-term future
- C in the near future

Question 27 – 30

Instructions to follow

- Complete the sentences below.
- Write NO MORE THAN TWO WORDS for each answer.

27 A valuable quality of the Africans is to make up for the difficulties of food transportation.



- 28 The government intends to pay greater attention to their plan.
- 29 Nowadays, the Africans are encouraged to in an area consistently.
- 30 For the Weyaka people, it is impolite to visit someone's home without.





Section 4

Questions 31-40

Questions 31-34

Instructions to follow

- Complete the diagrams below.
- Write NO MORE THAN TWO WORDS and/or A NUMBER for each answer.





Newton's First law

Inertia is connected with the concept of _____ **31** _____

Newton's Second law

Force depends on the objects mass and it is in _____ **32** _____ to acceleration

Newton's Third law

It is also named as _____ **33** _____



F -F



Net Force = _____ **34** _____



IELTSMaterial.com

Newton's Third Law



Questions 35-40

Instructions to follow

- Complete the table below.
- Write NO MORE THAN THREE WORDS for each answer



Physical Force	Further Information	
Equilibrium	Static Equilibrium: Objects at rest	
	Dynamic Inertia: _____ 35 _____	
Gravity	Universal force and its _____ 36 _____ is 9.81 m/s ² .	The acceleration remains the same during _____ 37 _____
Normal	Atoms undergo _____ 38 _____	It keeps the _____ 39 _____ of an object
Friction	Static Friction: Force is _____ 40 _____ to the surface	
	Kinetic Friction: Independent of forces on the object	





Practice Test 29

Section 1

Questions 1 - 10

Instructions to follow

- Listen to [audio 29](#) and answer the questions below.
- Complete the table below.
- Write ONE WORD AND/OR A NUMBER for each answer.

NOTES OF CONCERTS

Example:
 What to order before the start coffee

Types of concerts	Time	Cost	Additional information
..... 1 concert	Every afternoon	\$ 2 For students and \$6.50 for adults	<ul style="list-style-type: none"> Organise a press tent Broadcast on local3..... station
..... 4 concert	Friday	Entrance fee: Approx \$40	Decorate with 5



Opera Show 6	Charged by 7	There will be a 8 Performance
Karaoke Night	Saturday	No group 9	To end the show, a popular 10 will perform



Section 2

Questions 11-20

Instructions to follow

- Complete the notes below.
- Write NO MORE THAN TWO WORDS for each answer.

Seven Sisters' Campsite

Seven sisters are named after¹¹..... in East Sussex

Weekly Schedule:

Monday

- Go on a trail
- Have a picnic next to a¹².....
- Have a swim PS. Activities are subject to¹³..... conditions

Tuesday

- Continue up the hill Tuesday Continue up the hill
- Arrive at a¹⁴.....
- Go¹⁵.....
- Have a pebble massage

A range of.....¹⁶..... are available there, including jet-skiing and parasailing.

Pieces of Equipment:



There are also boats,¹⁷..... and kayaks and you can set out to sea as long as you are wearing
.....¹⁸.....

You can also go rock-climbing and you can go¹⁹..... when you come back down to
earth. You can talk to your friends while you are near an open²⁰.....





Section 3

Questions 21 – 30

Questions 21-25

Instructions to follow

- Choose the correct letter, A, B or C.

21 Students may fail the exam if they

- A do not collect primary statistics.
- B copy other people's work.
- C do not follow the instructions.

22 Why does the man think they should avoid including the pictures of the first volcano in the presentation?

- A They are not attractive.
- B The time is limited.
- C People have never heard of it.

23 About Mount Fago, a volcano in Mexico or the USA, the man thinks

- A they should not use inaccurate information in the presentation.
- B they should use another example.
- C it does not matter where the volcano is.



24 The woman thinks they should mention Mount Etna since

- A it covers most of the important points.
- B It was formed a long time ago..
- C it has stunning views.

25 They agree to leave out Mount Herton as

- A other students have used it before.
- B it is irrelevant to their topic.
- C there is nothing special about this volcano.

Question 26 – 30

Instructions to follow

- Choose FIVE answers from the box and write the correct letter, A-G, next to questions 26-30.

Which statement applies to each of the following situations?

- A make a short film
- B lacked his/her own points
- C neglect the positive aspect
- D watch some documentaries
- E did not prepare beforehand
- F identify the differences between them.



26 The woman's last presentation was criticized because of it

- A B C D E F

27 The tutor suggests for the next presentation the woman should

- A B C D E F

28 People do not know enough about volcanoes and so they

- A B C D E F

29 The reason why the man felt very nervous is that he

- A B C D E F

30 They are researching active and extinct volcanoes to

- A B C D E F



Section 4

Questions 31-40

Question 31

Instructions to follow

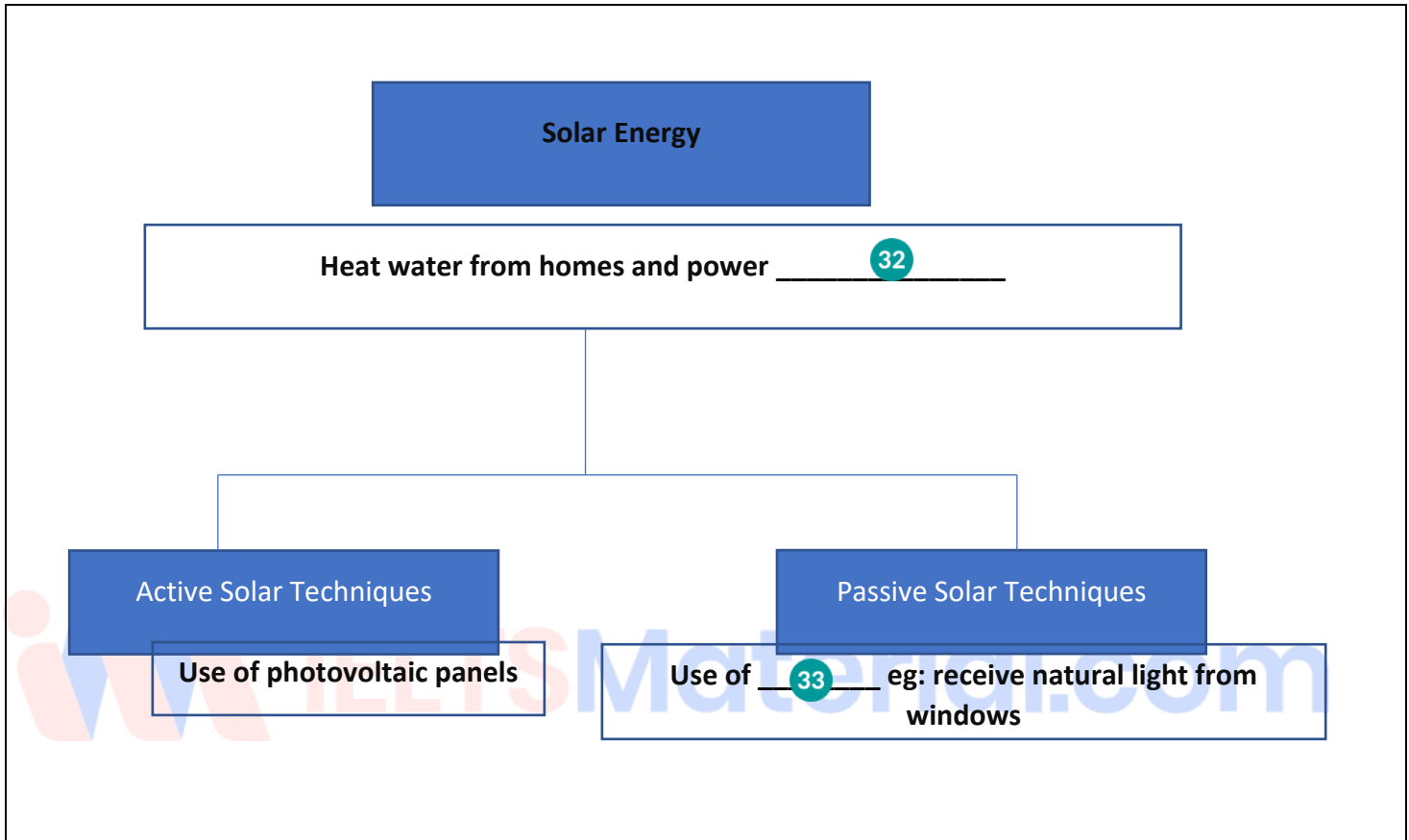
- Complete the sentences below.
- Write NO MORE THAN TWO WORDS for your answer.

Petroleum is a³¹..... resource as it cannot be replenished.

Questions 32-33

Instructions to follow

- Complete the diagram below.
- Write NO MORE THAN TWO WORDS for your answer.





Questions 34-40

Instructions to follow

- Complete the table below.
- Write NO MORE THAN THREE WORDS for each answer.

Natural Resource	How it is Generated	Further Information
Biomass	Plants ³⁴ solar energy when they are burnt.	
Wind Energy	Wind turbines produce between 600kW and 5MW of rated power	Wind speeds are higher in ³⁵
Hydropower Energy	Hydroelectric dams	run-of-the-river hydroelectricity derives from ³⁶
Geothermal Energy	Heat is trapped in ³⁷ GSHP extracts heat from the ground	86% of the houses in ³⁸ were heated by geothermal energy in 2000



<p>Biofuels</p>	<p>Biomass They can be divided into solid biomass, liquid fuels and biogases</p>	<p>Bioethanol is a³⁹..... in the USA and Brazil. Biodiesel reduces CO levels in Europe. In 2010, it provided⁴⁰.....of global road transport fuels</p>
-----------------	--	---



Practice Test 30

Section 1

Questions 1 -10

Instructions to follow

- 🔊 Listen to [audio 30](#) and answer the questions below.
- Complete the notes below.
- Write ONE WORD AND/OR A NUMBER for each answer

INCIDENT REPORT

Example

Name: Anna Lumley

Telephone: ①

Date of arrival: ②

Address: 235 ③ Road, East sea

The total value of insurance: \$ ④

Missing items:

- lamps and chairs (not expensive)



- furniture and⁵.....
- a rocking horse, some⁶..... and fruit bowls

Items ordered:

- a clock
- A.....⁷.....

Damaged items:

- the⁸..... needs to be replaced
- a⁹..... of one of the dining chairs are split
- four¹⁰..... were broken





Section 2

Questions 11-20

Instructions to follow

- Complete the notes below.
- Write NO MORE THAN TWO WORDS for each answer.

Induction Day – Papyrus Warehouse

Company Identification Card:

- Contains the employee's name,¹¹..... and barcode number
- Done with the HR department
- Used to¹²..... and out daily

Shop Floor – you need the ID card when you open the till and¹³.....

Stock Room – ID card is also used during the¹⁴.....

Warning: Don't forget to close the till drawer and¹⁵..... of the system.

Staff Restaurant – you can buy snacks if you insert coins into the machines on the¹⁶.....

Note: Free lunch is provided on busy days, but the cashier has to¹⁷..... your card so that your lunch break is recorded.

Personal Belongings:

They should be put in the¹⁸..... available in the changing



rooms. Mobile phones should be switched off.

Uniform:

StockRoom – a white shirt and a pair of¹⁹.....

Shop Floor – a plain shirt and a suit

Note: Women may wear make-up and use²⁰..... as long as it looks neat.





Section 3

Questions 21 – 30

Question 21 - 25

Instructions to follow

- Choose the correct letter, A, B or C.

21 Why did James choose to work in the bakery?

- A Because it's close to his home.
- B Because it has a good reputation in the subject area.
- C Because it's a part of a chain.

22 What was James surprised at in his studies?

- A He finds the theoretical courses easy.
- B He can finish the theoretical courses.
- C He finds the theoretical work interesting.

23 How is James' course assessed in the first term?

- A The marks are given by students to each other.
- B Self-assessment.
- C It is up to the practical experience.

24 Why has Kate enquired about the English language course?



- A She wants to become an artist.
- B It is her first language.
- C She plans to curate in a gallery.

25 What else did Kate need to get before going to college?

- A starting date of the course
- B an offer with scholarships
- C a catalogue of modules

Questions 26-30

Instructions to follow

- Choose FIVE answers from the box and write the correct letter, A-G, next to questions 26-30.

What statement applies to each of the following courses?

- A There are a lot of background readings.
- B People stay at the studio where the course is taken.
- C Many outside speakers will give a talk.
- D It's the most difficult course.
- E Students do their own research.
- F Students need to spend a lot of money on a camera with a good display.
- G Expensive materials need to be bought.



26 History of Art

- A B C D E F G

27 Sculpture

- A B C D E F G

28 Digital Painting

- A B C D E F G

29 Art Theory

- A B C D E F G

30 Photography

- A B C D E F G



Section 4

Questions 31-40

Question 31

Instructions to follow

- Circle the correct letter A-C.

31 Which graph shows an increase in the Earth’s temperature in the last 3 decades?



Questions 32-33

Instructions to follow

- Complete the sentences below.
- Write NO MORE THAN TWO WORDS for answer.

Arctic³²..... release up to 100 million tonnes of methane gas annually.



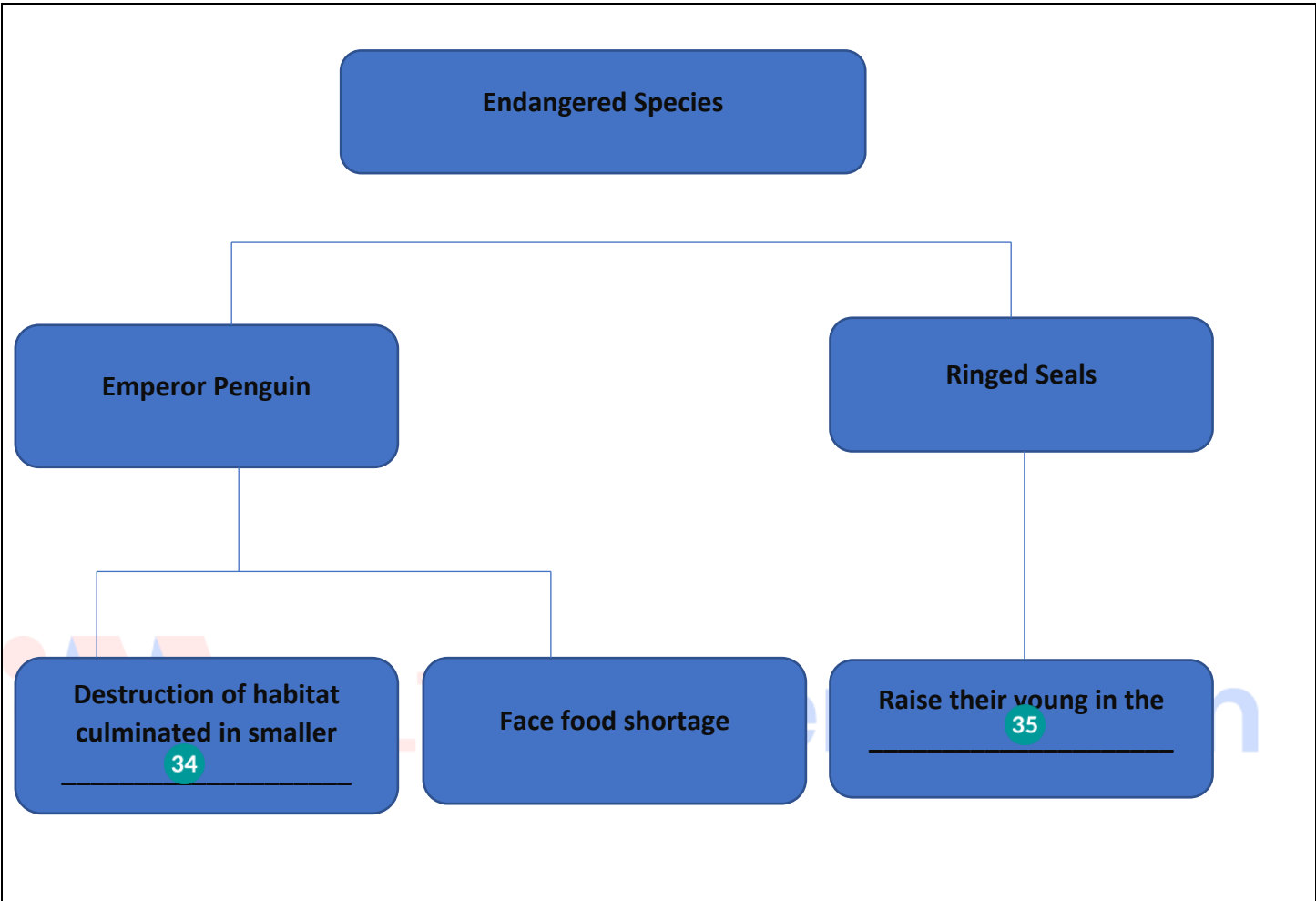
Moreover, 25% of all methane is stored on the land surface and it can be released from³³.....

Questions 34-40

Instructions to follow

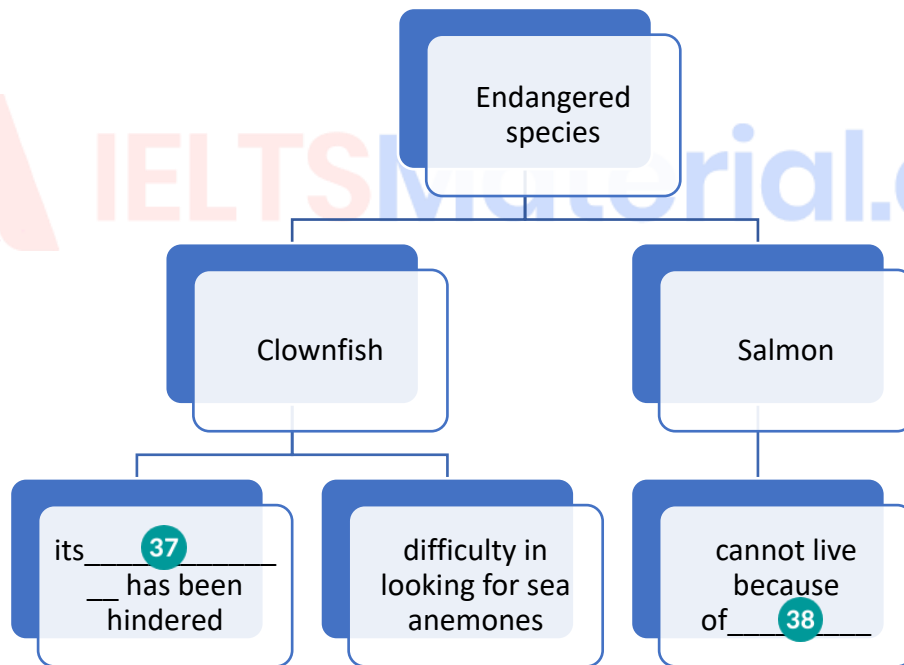
- Complete the diagrams below.
- Write NO MORE THAN THREE WORDS for your answer.

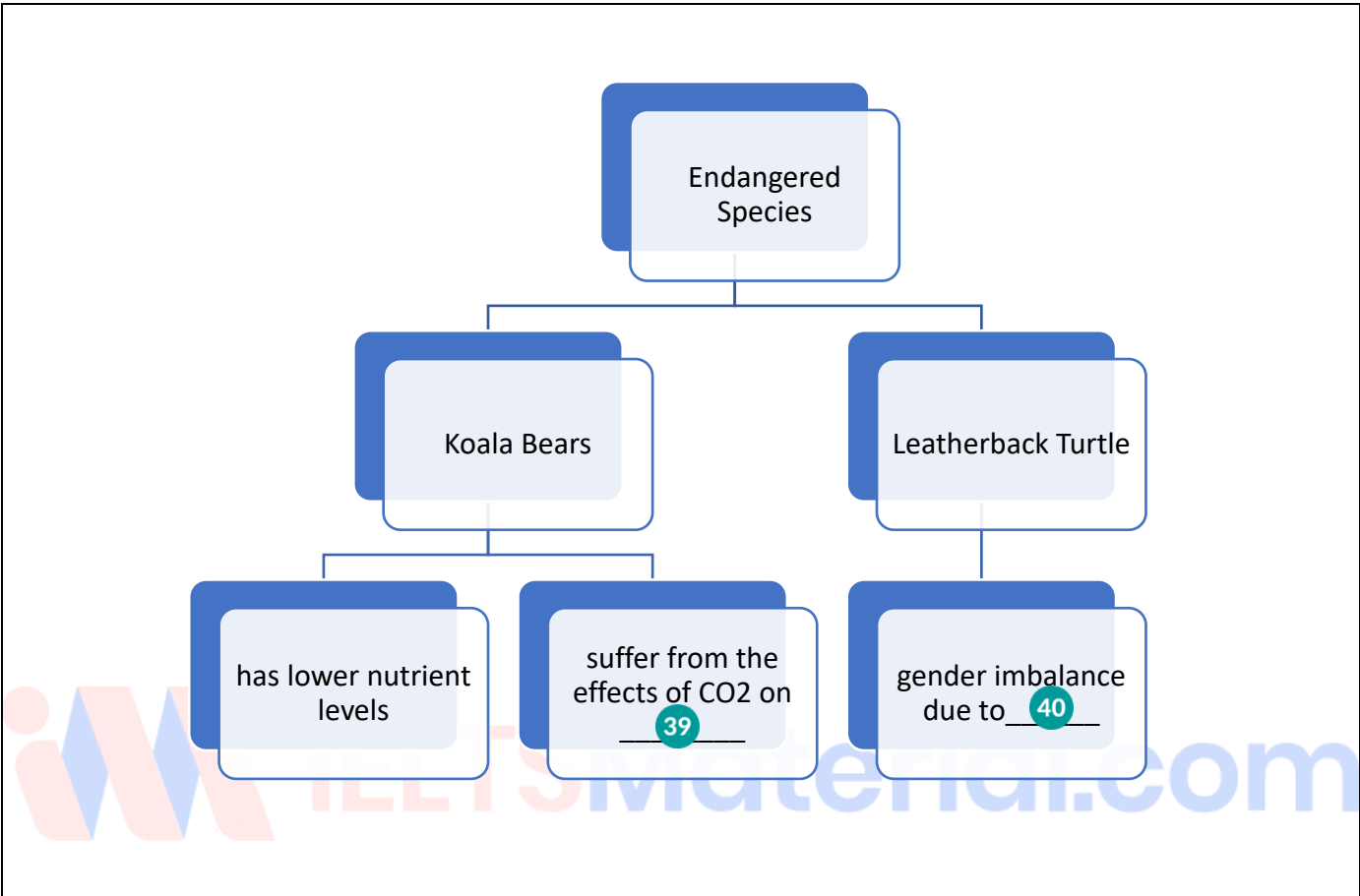






Artic Fox	<ul style="list-style-type: none"> its habitat was invaded by red foxes
Beluga Whales	<ul style="list-style-type: none"> human invasion of the area which was _____ 36 _____
Staghorn Corals	<ul style="list-style-type: none"> suffer from ocean acidification







Practice Test 31

Section 1

Questions 1 - 10

Instructions to follow

- 🔊 Listen to [audio 31](#) and answer the questions below.
- Complete the notes below.
- Write **ONE WORD AND/OR A NUMBER** in each gap.

Bud and Annie's families

Annie's family issues:

- father is in bad mood
- mother's **1** is increasing again. She needs surgery to replace her **2**
- the operation is very expensive, around \$ **3**
- her family is getting problems with
..... **4** because sister does not want to help - her sister seems to be selfish after the beauty
..... **5**

Bud's family issues:

- Annie thought Bud's **6** was a nice person but, she turned out to be **7** after getting promoted.
- his dad signed a huge **8** and looking for some **9**
- his parents are currently in France for **10** Anniversary.



Section 2

Questions 11 - 20

Questions 11 - 13

Instructions to follow

- Choose THREE letters, A-F.

Which THREE things that most people want to spend their income on mentioned by the speaker?

- A people spend the same on enjoyment regardless of age
- B people usually spend 1,500 pounds per month on necessary things
- C people tend to spend much more than what they really want
- D the amount of money spending for the future differs for different people
- E people tend to spend their income widely trzia on different things
- F people mainly invest their money for education and a big house

Questions 14 - 15

Instructions to follow

- Choose TWO letters, A-E .

Which TWO rules should people follow to manage their money mentioned by the speaker?

- A maximum of 10 percent of the monthly budget is allowed for entertainment and unexpected things
- B do not spend money on fancy restaurants or drinking



- C only use cash for essentials like house repairs, birthday present
- D Only use credit card to buy something for changing money
- E staying at home when the monthly budget is almost running out

Questions 16-20

Instructions to follow

- Choose the correct letter A, B or C.

Principles on money investment

16 Why do people need to keep a current deposit in a bank account?

- A for some rainy days
- B for some unexpected cases
- C for retirement

17 Unused money should invest in

- A the government lottery.
- B gambling games.
- C risk investment.

18 Investing money for higher earning potential, people can

- A take a higher risk.
- B make a big fortune in a short period of time.
- C guarantee to get more money back in every situation.



19 What is a balanced portfolio?

- A a wide investment list
- B a steady investment
- C a refundable investment

20 Investing money wisely means

- A putting money into different investments.
- B Spending money on venture capital
- C Spending money on low-risk investments.



Section 3

Questions 21 - 30

Questions 21 - 23

Instructions to follow

- Choose the correct letters A, B or C.

21 Andrew has worked at the hospital for

- A two years.
B three years.
C five years.

22 During the course Andrew's employers will pay

- A his fees.
B his living costs.
C his salary.

23 The part-time course lasts for

- A one whole year.
B 18 months.
C two years.

Questions 24-25



Instructions to follow

- Choose TWO letters A-E.

What TWO types of coursework are required each month on the part-time course?

- A a case study.
- B an essay.
- C a survey.
- D a short report.
- E a study diary.

Questions 26-30

Instructions to follow

- Complete the summary below.
- Write NO MORE THAN THREE WORDS AND/OR A NUMBER for each answer.

Modular Courses

Students study²⁶..... during each module. A module takes²⁷..... and the work is very²⁸..... To get a Diploma each student has to study²⁹..... and then work on³⁰..... in depth.



Section 4

Questions 31 - 40

Questions 31 – 35

Instructions to follow

- Write NO MORE THAN three words for each answer

31 According to George Bernard Shaw, men are supposed to understand _____, economics and finance.

32 However, women are more prepared to _____ about them.

33 Women tend to save for _____ and a house.

34 Men tend to save for _____ and for retirement.

35 Women who are left alone may have to pay for _____ when they are old.

Questions 36 – 40

Instructions to follow

- Complete the summary below.
- Write no more than three words and/or a number for each answer.

Saving for the future

- Most women think about their financial future when a/an _____ 36 _____ occurs.

- Women start thinking about _____ 37 _____ when they are in their early twenties .



- To develop their _____³⁸_____ in dealing with financial affairs would be to attend classes in money _____³⁹_____.
- Women should put a high proportion of their savings in low risk investments and the rest for _____⁴⁰_____ ones which can offer them a comfortable, independent retirement.





Practice Test 32

Section 1

Questions 1 - 10

Questions 1 - 6

Instructions to follow

Listen to [audio 32](#) and answer the questions below.

Contact Details on buying a used car

Model:	Celica
Year:	1985
Number of owners: 1
Condition:	<ul style="list-style-type: none"> • overall good. • 2 were replaced last year
Reason for selling:	moving 3
Asking price:	£..... 4
Appointment time: 5
Address: 6 St, Parkwood.
Contact name:	Elena



Questions 7-10

Instructions to follow

- Circle the correct letter A-C.

7 What happened to Sam's car?

- A It was replaced by another one.
B It broke down.
C It was stolen.

8 Why does Jan need a car now?

- A She lives too far from the university.
B She spends too much time on the bus.
C She would feel safer at night with a car.

9 What does Sam recommend?

- A check the service records
B avoid buying an old car
C get a mechanical inspection

10 How are they travelling to Elena's?

- A by motorcycle
B on foot
C by bus



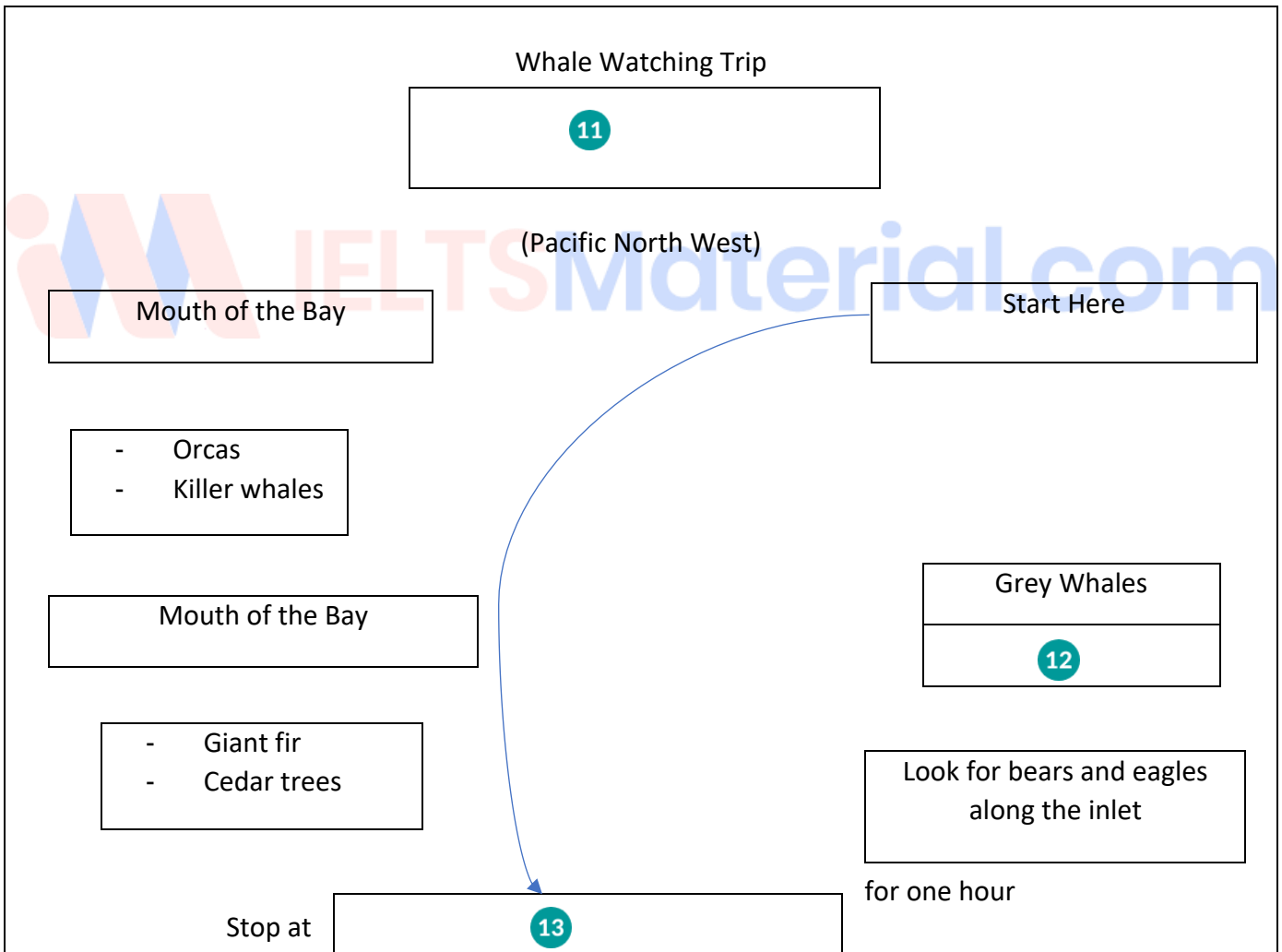
Section 2

Questions 11 - 20

Questions 11-13

Instructions to follow

- Write NO MORE THAN TWO WORDS in each gap.





Questions 14 - 16

Instructions to follow

- Complete the table below
- Write **ONE WORD ONLY** in each gap.

Whale identification chart

	Color	size	General characteristics
Dolphins	Grey	1 - 2 metres	<ul style="list-style-type: none"> • Swim fast • Playful • 14
Orcas & Killer whales	Black and white	7 - 8 metres	<ul style="list-style-type: none"> • 15 hunters • Eat fish, seals and other whales
Grey whales	Grey	14 metres	<ul style="list-style-type: none"> • 16 • Filter feeders, eat shrimp • Distinctive tail fins

Questions 17 - 20

Instructions to follow

- Write **ONE WORD ONLY** in each gap.

Advice for Participants on Whale Watching Excursions

- For a smooth ride, sit in the middle near the boat's **17**



- Watch the waves and hold onto the¹⁸.....
- Survival suits are¹⁹..... in colour for maximum visibility.
- For seasickness: Place a patch on your wrist instead of taking²⁰.....





Section 3

Questions 21- 30

Questions 21-23

Instructions to follow

- Fill in the summary below with NO MORE THAN TWO WORDS OR A NUMBER for each space.

Selection Process for 'Travel Documentary'

- 34 interviewed from²¹..... applicants nationally
- 13 chosen for a²²..... training course in film-making
-²³..... finalists selected as competitors

Questions 24-26

- produce a²⁴..... every two weeks
- no previous professional²⁵..... experience allowed
- make their own²⁶..... and obtain approval

Questions 27-30

Instructions to follow

- Complete the sentences.

- ²⁷ What did Sarah Price share about her feelings on the trip last year?



- A unforgettable memory
- B pretty exhausting
- C very exciting

28 What was Sarah Price's worst experience during the trip?

- A She got lost in Mongolia.
- B She was homesick
- C She got sick in a remote place.

29 In which of the following areas does Ray expect to have most difficulty?

- A loneliness
- B time pressure
- C organisation skills

30 In what month does the journey begin?

- A February
- B March
- C April



Section 4

Questions 31 - 40

Questions 31 - 33

Instructions to follow

- Circle the correct answer A-C.

History of technology series

31 What does QWERTY stand for?

- A letters on the top row of the keyboard
- B the company that made the first typewriter
- C letters on the home row of the keyboard

32 The first commercial typewriter was developed in ...

- A Germany.
- B Great Britain.
- C United States.

33 The purpose of the QWERTY keyboard layout was ...

- A to slow down typing speed.
- B to prevent keys from sticking.
- C to reduce typing inefficiency.

Questions 34 - 40



Instructions to follow

- Write ONE WORD ONLY in each gap.

History of Dvorak keyboard

In 1932 August Dvorak solved the inefficiency problem by redesigning the³⁴..... of the typewriter. He put the most frequently typed,³⁵..... on the home row. Using the Dvorak keyboard 70 percent of the³⁶.....load can be handled from the home row. In contrast, only 50 words can be typed from the home row on the Qwerty keyboard. Other advantages of the Dvorak keyboard include a 50 percent improvement in³⁷.....

And a 15-20 percent increase in³⁸..... But the most important difference is in finger movement. Typists using the Dvorak keyboard moved their fingers around one³⁹..... per day, much shorter than using the Qwerty one. However, the Dvorak keyboard was never adopted as the Qwerty one remains⁴⁰.....



Practice Test 33

Section 1

Questions 1 - 10

Instructions to follow

- 🔊 Listen to [audio 33](#) and answer the questions below.
- Complete the sentences.

Ascot Child Care Centre Enrolment form

Personal details IELTSMaterial.com

Family name: Cullen

Child's first name: 1

Age: 2

Birthday: 3

Other children in the family: a brother aged 4

Address: 5 Rd., Brisbane

Emergency contact number: 3467 8890



Relationship to child:

.....⁶.....

Development

- Has difficulty⁷..... during the day
- Is able to⁸..... herself

Child-care arrangements

Days required:

Monday and⁹.....

Pick-up time:

.....¹⁰.....





Section 2

Questions 11 – 20

Instructions to follow

- Complete the sentences.

Children activities during Holiday

Things to do in the holidays

- Main problem - children do not have a traditional 11

Some ideas

- Give children jobs, for example cleaning the 12
- At home, ask children to help in the 13
- Get children to make 14 ahead of time
- Get children involved in community work such as visiting the 15
- Involve older children in long-term 16 In your community
- You may get some ideas from the 17
- The local 18 is often the best place to find ideas

Things to remember

- Make sure children stay 19
- Children up to the age of 20 need to be supervised by an adult



Section 3

Questions 21 - 30

Questions 21-24

Instructions to follow

- Choose the correct answer A, B or C.

21 According to John, what is the main advantage of space exploration?

- A To supply resources for use on Earth.
B To find out more about the origins of our planet.
C To establish a colony for humans if Earth becomes uninhabitable.

22 According to the speakers, why can't robots be sent into space instead of humans?

- A They cannot operate for long enough.
B They are too expensive to build.
C They are too reliant on humans.

23 What are we told about the space technology currently used?

- A It can be unreliable.
B It is based on old technology.
C It is becoming cheaper to produce.

24 What is the biggest problem in sending robots to Mars?



- A the distance
- B the atmosphere
- C the extreme temperatures

Questions 25-30

Who expresses the following opinions?

Persons

- A John
- B Susan
- C Both John and Susan

Opinions

25 We should plan a trip to Mars even though it may not happen soon.

- A B C

26 We may eventually colonise Mars.

- A B C

27 The soil on Mars is highly toxic.

- A B C

28 The soil on Mars contains materials we could use.

- A B C

29 Spaceships cannot be totally protected from radiation.



- A B C

30 It is possible that humans could form a base on Mars.

- A B C



Section 4

Questions 31-40

Instructions to follow

- Complete the notes below using NO MORE THAN TWO WORDS AND/OR A NUMBER.

The history of dentistry

Early history

The earliest reference to problems with teeth was in _____ ³¹_____

The ancient Sumerians called problems with teeth 'tooth _____ ³²_____

There is _____ ³³_____ to show that the Chinese used dental treatments.

Remedies and treatment

An old text from _____ ³⁴_____ reveals medical practices from 1700 to 1500 BC. The text refers to the use of _____ ³⁵_____ and _____ ³⁶_____ to relieve toothache.

In the fifth century BC a Greek _____ ³⁷_____ noted the beginnings of specialisation in medicine.

A Greek doctor was the first to _____ ³⁸_____ problem teeth.

In Europe during the _____ ³⁹_____, doctors performed dentistry in people's homes.

A dentist from France is said to have founded _____ ⁴⁰_____ dentistry.



Practice Test 34

Section 1

Questions 1 – 10

Instructions to follow

- Listen to [audio 34](#) and answer the questions below.
- Complete the form below.
- Write **NO MORE THAN TWO WORDS AND/OR A NUMBER** in each gap.

Complaint Record Form

Holiday booked in name of:

Last name: **1**

First name: Andrew

Address: Flat 4 **2** House, Winchester SO2 4ER

Daytime telephone number: **3**

Booking reference: **4**

Special offer: Yes, from **5** company

Insurance: Yes, had **6** policy

Type of holiday booked: **7** break

Date holiday commenced: **8**

Details of complaint: no **9** At station
a/an **10** was missing



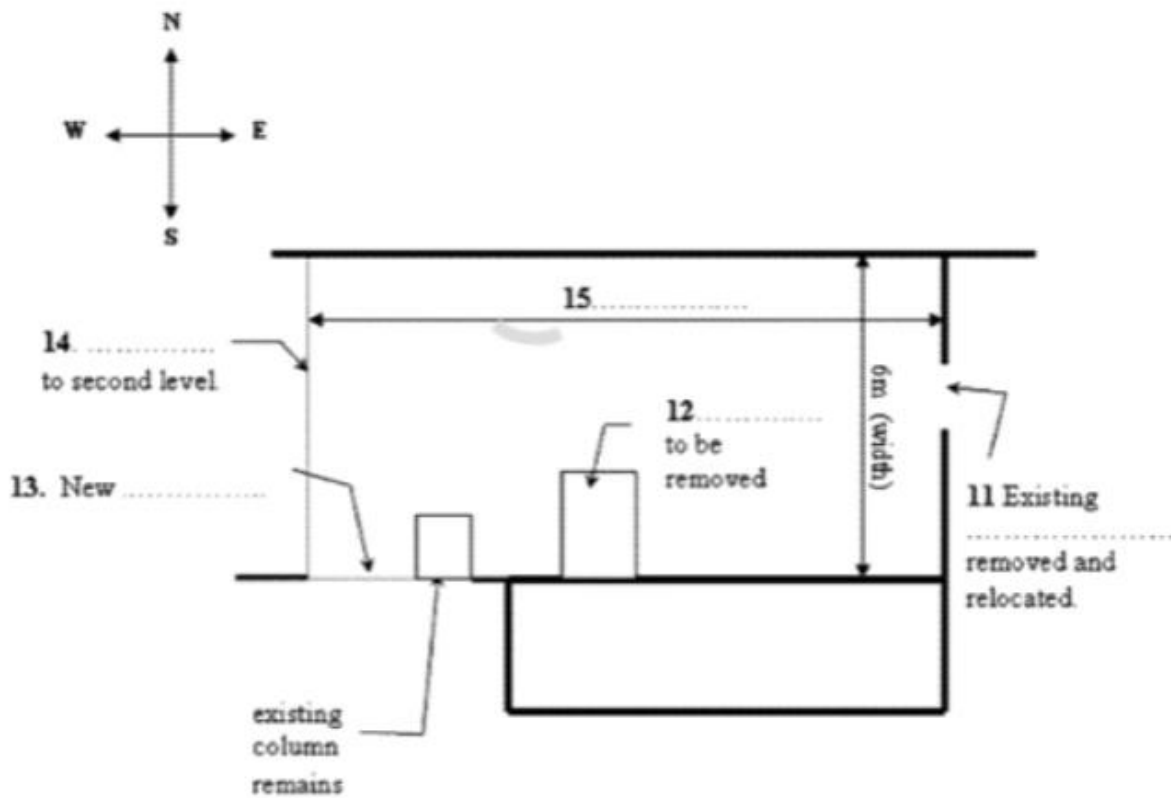
Section 2

Questions 11 - 20

Questions 11 - 15

Instructions to follow

- Label by listening to the audio





- 11 _____
- 12 _____
- 13 _____
- 14 _____
- 15 _____





Questions 16 – 17

Instructions to follow

- Circle the correct letters A, B or C.

16 The number of students to be relocated is..

- A 10
B 6
C 30

17 The number of students being relocated to each wing is

- A 10
B 6
C 30

Questions 18 – 20

Instructions to follow

- Circle THREE letters A-E.

Which THREE of the following changes were mentioned?

- A new computer desks
B study desks
C new beds



- D lamps
- E painting of rooms
- F Book shelves
- G Study chairs





Section 3

Questions 21 - 30

Questions 21 - 26

Instructions to follow

- Complete the sentences below.
- Write **NO MORE THAN THREE WORDS** for each answer.

David feels that progress on the project has been slow because other members of the group are not complying with the²¹.....

Jane thinks that personal²²..... were not clearly established.

Dr Wilson suggests that the group use the²³.....module available from the Resource Centre.

David doubts that the research will include an adequate consulting²⁴.....

According to Dr Wilson, the²⁵..... is now the most important thing to focus on.

Jane believes the group could make more use of some²⁶.....

Questions 27-30

Instructions to follow

- Complete the timetable below.
- Choose your answers from the box and unite the letters A-H next to questions 27-30.



- A Compare photographs at newspaper offices.
- B Interview a local historian.
- C Listen to tapes in the die City Library.
- D Study records of shop ownership.
- E Take photographs of the castle area.
- F Talk to the archivist at the City Library.
- G Tour city centre using copies of old maps.
- H Visit an exhibition at the University Library.

MON - WED: FIELD TRIP TO CAMBRIDGE

Mon 22nd	am	Arrive at hotel
	pm27.....
Tue 23rd	am28.....
	pm	Free time
Wed 24th	am29.....
	pm30.....



Section 4

Questions 31 - 40

Instructions to follow

- Write ONE WORD only in each gap.

The Inuit

Background

- are the native³¹..... of Alaska and Canada
- Migrated across gap between Alaska and Siberia
- Originally came from the continent of³².....
- The name "Inuit" means "The people"
- Inuit³³..... began years ago
- Norse³⁴..... Lived near Inuit around 1000 AD

Housing

- Inuit worked for³⁵..... in the 1800s
- well adapted to the Arctic
- in summer: + dwelled in³⁶.....
- + traveled in³⁷.....
- In winter + lived in ice house or 'igloos'
- + traveled by.....³⁸.....
- Took 1- 2 hours to build

Food:



-³⁹..... whales - the main source of food
- polar bears hunted on land
- Constantly looking food
- Major⁴⁰.....of Inuit currently located in Alaska and Canada





Practice Test 35

Section 1

Questions 1 - 10

Instructions to follow

- Listen to [audio 35](#) and answer the questions below.
- Complete the sentences.

Accommodation request form



IELTSMaterial.com

Name: Jenny Chan

Present address: Sea View Guest House,¹.....Rd

Daytime phone number:²..... [NB Best lime to contact is 9-9:30]

Age: 19

Intended length of stay:³.....

Occupation while in UK: student

General level of English:⁴.....

Preferred location: in the⁵.....

Special diet:⁶.....

Other requirements: - own⁷.....



- own television
- a/an **8**
- to be only guest

Maximum price:

£ **9** a week

Preferred starting date:

..... **10**





Section 2

Questions 11 - 20

Questions 11-13

Instructions to follow

- Complete the sentences below.
- Write NO MORE THAN TWO WORDS for each answer.

- The next meeting of the soccer club will be in the¹¹..... in King's Park on 2 July.

- The first event is a¹².....

- At the final dinner, players receive¹³.....

Questions 14-17

Instructions to follow

- Complete the table below.
- Write NO MORE THAN THREE WORDS AND/OR A NUMBER for each answer.

Competition	Number of teams	Games begin	Training session (In King's park)
..... ¹⁴	10 ¹⁵	Wednesday afternoons
Senior ¹⁶	2:30 pm ¹⁷ afternoons



Questions 18-20

Instructions to follow

- Complete the table below.
- Write **NO MORE THAN THREE WORDS** for each answer.

Responsibility	Person
A Manage the club's finance	Gina Cosello: 18
B Train the football team	David West: 19
C Buy new equipments	Jason Dokic: 20
D Receive the fees	
E Collect the feedback	
F Deliver newsletters	
G Manage meetings	



Section 3

Questions 21 - 30

Questions 21 - 23

Instructions to follow

- Choose THREE letters, A-F.

Which THREE reasons have Bill and Ann not prepared their presentation in class yet?

- A Bill has been taking care of his mother
- B Ann's neighbors cannot help her with chores
- C Bill spends more time on other things
- D Ann spends more time on her business
- E Bill is too busy with other courses
- F Ann helps her mom with housework

Questions 24 - 25

Instructions to follow

- Choose TWO letters, A-E.

Which TWO things are correct about the topic in their class that Bill and Ann have to present?

- A personal characteristics are influenced by uniform
- B wearing a uniform during carrying out experiment in Los Angeles
- C it seems like what Bill read before



- D it is about things to do during summer vacation
- E Problem of wearing a uniform in high school

Questions 26 - 30

Instructions to follow

- Circle the correct letters A, B, or C.

26 Students volunteered in the experiment

- A Had a clue for what will happen
- B were not informed in advance about what will happen.
- C were arrested to a police station.

27 What did the volunteers encounter in the experiment?

- A They did not know that other volunteers had encountered the same thing.
- B They were informed about what they had to wear.
- C They did not know why they had to get charged.

28 In the old experiment, volunteers

- A played a role as arrested persons
- B recognised the experimental purpose.
- C came from different universities.

29 Arrested volunteers in the old experiment

- A were treated like real prisoners.
- B were told to act like prison guards.



C were not allowed to sleep.

30 What did the volunteers feel during the experiment?

- A The volunteers playing guards with psychological trauma.
- B They all suffered psychological trauma
- C The volunteers playing prisoners with psychological trauma.





Section 4

Questions 31 - 40

Instructions to follow

- Complete the notes below.
- Write ONLY ONE WORD in each gap.

Sales and Marketing

Introduction

- advertising is used to make a company successful via different types of³¹.....
- advertising³²..... (radio, newspapers, TV, etc.) is not mentioned in this lecture
-³³..... advertising helps to achieve our goals while saving money
- the most common objective of the advertiser is to change customers' behaviour and³⁴.....

Advertising for brands

- customers tend to buy products from a company as they³⁵..... their brand name
- promoting a brand is supposed to make customers remember product³⁶.....
- a famous company with a good brand name could not market successfully other products
- company names usually advertise before their goods and³⁷.....
- SanFran Video Store³⁸..... had promoted by handing out flyers
- Chanel is successfully in advertising either company name or products such as³⁹.....
- it is essential to be mutually⁴⁰..... in different types of advertising



Practice Test 36

Section 1

Questions 1 - 10

Instructions to follow

- Listen to [audio 36](#) and answer the questions below.
- Complete the notes below.
- Write **NO MORE THAN ONE WORD AND/OR A NUMBER** in each gap.

Apartment Information

Maximum rental: \$..... **1** per week

Minimum period of contract: **2**

Log on the website: www..... **3**com

Things included - a circuit **4** in all apartments

In the rent:

- kitchen equipments:

+ a/an **5**

+ a/an **6**

- **7** bill

Client information:

Full name: Angela **8**

Address: **9** Rd.. Melford MF45JB

Tel: **10**



Section 2

Questions 11 - 20

Questions 11 - 13

Instructions to follow

- Choose the correct letters A, B or C.

- 11 What is the company's sales figures trend from 2005-2010?
- A Fluctuation, with great increase in the first stage
- B no change during the period
- C great increase during the period
- 12 What is the relationship of the three departments this year?
- A both Furniture and home appliances are decreased.
- B only apparel is decreased.
- C all three departments remain unchanged.
- 13 Which is the best description about the number trend of temporary staff in the company?
- A The trend is the same over the years.
- B The trend turns down this year.
- C The trend is increasing over the years.



Questions 14 - 18

Instructions to follow

- Write **NO MORE THAN TWO WORDS** in each gap.

Parkson Approach to Retail Business

Mission Statement

- the drive to¹⁴.....
- pursuing ways need to be creative and distinctive to fulfill customer's demand

Four Priorities

- compelling and distinctive assortments
-¹⁵.....
- enhanced shopping experience
-¹⁶.....

Magical Special Events

- Thanksgiving Day Parade
- Halloween Fireworks
- celebrity appearances
-¹⁷.....
- Arrival of Santa Claus
-¹⁸.....
- animated window displays



Questions 19 – 20

Instructions to follow

- Choose **TWO** letters. A-E.

Which **TWO** things must be done today?

- A handing in application form
- B reading the brochure
- C submitting certificate
- D applying for staff discount
- E getting security pass





Section 3

Questions 21 - 30

Questions 21 - 22

Instructions to follow

- Write **ONE WORD ONLY** in each gap.

- Art Deco takes its name from a/an²¹..... held in Paris

- Both Art Deco and Art Modern were more often used for²²..... high-rise building blocks.

Questions 23 - 27

Instructions to follow

- Complete the form below.
- Write **ONE WORD ONLY** in each gap.

Art Deco

- facades with²³..... designs
- Polychromy
- Straight edges and²⁴..... Shapes
- Vertical emphasis

Art modern

- Flat roofed building rooms, curved corners
- smooth walls without²⁵.....



- more²⁶..... than Deco
-²⁷..... Emphasis

Questions 28 - 30

Instructions to follow

- Choose the correct letters A, B or C.

- ²⁸ What do the students want to do in class?
- A showing presentation on photos of buildings
 - B taking class pictures
 - C discussing about how to take the building pictures

- ²⁹ What do they need to do before taking photos?
- A finding the way to the lobby of the building first
 - B talking to Professor Vargas
 - C asking for permission

- ³⁰ Who does the woman want to turn to for help?
- A the building manager
 - B building guard
 - C building receptionist



Section 4

Questions 31- 40

Instructions to follow

- Write ONE WORD ONLY in each gap.

The Aztec

General History

- the Aztec³¹..... Existed between the 14th and 16th century
- the capital city of Aztec was in the centre of the³²..... Mexico city

Food

- the staple food of Aztecs was³³..... Which has been domesticated for thousands of years, and spread to the rest of the world from Mexico.
- the Aztecs also had other diet such as³⁴....., squash

Clothing

- the clothing of the Aztec was diverse based on different³⁵..... community
- Aztec clothes were generally made of imported cotton or ayate fiber
- the Aztecs were able to create beautiful colors using a lot of³⁶.....

Education

- girls were instructed about cooking, caring for a family,³⁷..... and ways to economically run the home



- boys, however, learned trades, fighting and³⁸..... Skills

Region

- the Aztecs went to³⁹..... to send their tribute and pray
- The tribute included not only agricultural but also rare and⁴⁰..... products





Practice Test 37

Section 1

Question 1-10

Instructions to follow

🔊 Listen to [audio 37](#) and answer the questions below.

Questions 1-4

Instructions to follow

- Choose the correct letters A, B or C.

1 Currently, the man is studying

- A Business
B Education
C Maths

2 The man wants to study

- A Education
B Business
C Accounting

3 When are the Registration Packs available for first-year students?



- A November
- B September
- C December

4 To complete the registration process, the student has

- A One-month
- B Two months
- C Three months

Questions 5-7

Instructions to follow

- Complete the form below.
- Write NO MORE THAN TWO WORDS AND/OR A NUMBER for each answer.



REQUEST FOR INFORMATION	
NAME	Richard Dreyfus
ADDRESS	5 Unit 12 Avenue, Mermaid Beach,4554
TELEPHONE	6.....
EMAIL	7 dreyfus@.....

Questions 8-10



Instructions to follow

- Choose THREE letters A-F.

Which THREE ways to register are mentioned?

- A by email
- B by mail
- C by phone
- D in person
- E text message
- F by facsimile





Section 2

Questions 11 - 20

Questions 11-16

Instructions to follow

- Complete the sentences below. Write NO MORE THAN TWO WORDS for each answer.

The Hotel

- You must book.....¹¹..... in advance.
- There are some interesting¹²..... in the lounge.

Activities

- The visit to the¹³..... has been cancelled.
- There will be a talk about¹⁴..... from the area on Saturday.
- The visit to the¹⁵..... will take place on Sunday.
- There is a collection of¹⁶..... in the art gallery.

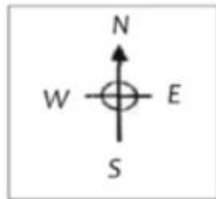
Questions 17-20

Instructions to follow

- Label the map below. Write the correct letter A-I next to questions 17-20.



Where are the following places situated ?



- (17) Park Hotel
- (18) Internet Cafe
- (19) Tourist Information Office
- (20) Royal House Restaurant



17 _____

- A
- B
- C
- D
- E
- F
- G
- H
- I

18 _____

- A
- B
- C
- D
- E
- F
- G
- H
- I

19 _____

- A
- B
- C
- D
- E
- F
- G
- H
- I

20 _____

- A
- B
- C
- D
- E
- F
- G
- H
- I



Section 3

Questions 21 - 30

Questions 21-22

Instructions to follow

- Choose TWO letters A-E.

What two suggestions does Gloria give to Paul?

- A talk with past graduates
- B chooses from Science, Maths or English
- C study subjects that he naturally likes
- D consult the university handbook
- E go to the office of Academic Affairs

Questions 23-27

Instructions to follow

- Complete the table below.
- Write NO MORE THAN THREE WORDS OR A NUMBER for each answer.

Title	Author	Year published	Publisher
What should I do?	Smith,P	2000 23
..... 24	Newton,J	2000 25



..... 26	White,J 27	Brown and Tate
----------------	---------	----------------	----------------

Questions 28 – 30

Instructions to follow

- Choose THREE letters A – F.

Which THREE points helped Gloria to Choose her course

- A she spoke with her parents
- B she talked with friends
- C she looked at jobs that were available
- D she researched typical working hours
- E she liked mathematics
- F she liked working with people



Section 4

Questions 31 - 40

Instructions to follow

- Write **ONE WORD ONLY** in each gap.

Type of writing	Notes	Tips
Short stories	three basic styles	Start with a/an 31
Non-fiction	biographies often popular	Tells publishers about your field of 32
Articles	advice articles work well	Write for a definite 33
Poetry	meaning shouldn't be too 34	Read your poems aloud
Plays	movements usually decided by the 35	Learn about acting
Radio	BBC published handbook	Try 36 stations first
Children's Literature	Illustrations important	Decide on an age 37

38 What is a disadvantage of first person narration in novels?

- A It makes it harder for the main character to be interesting.
- B It is difficult for beginners to do well.
- C It limits what can be described.



- 39 What is a mistake when writing novels?
- A failing to include, enough detail
 - B trying to explain ironic effects
 - C including too many characters
- 40 In order to make dialogue seem natural, writers should
- A Writers should make recordings of real conversations.
 - B include unfinished sentences
 - C break up long speeches





Practice Test 38

Section 1

Questions 1 - 10

Instructions to follow

- Listen to [audio 38](#) and answer the questions below.
- Write NO MORE THAN ONE WORD AND/OR A NUMBER in each gap.

Finnegan's Flight Centre

Flight info:

- from Hong Kong to Singapore on 25 July
- it takes approximately 3 hours **1** Minutes
- the passenger should check in before **2**
- the passenger cannot change their flight dates because of work **3**
- the passenger will fly back to Hong Kong on **4**
- the passenger wants to **5** as soon as she gets back

Other information:

- Bert will **6** the confirmation details to the passenger
- the maximum weight for **7** Luggage is 10kg
- the passenger will check in one **8** at extra cost
- the reservation number is **9**
- the passenger is for a seat next to the **10**



Section 2

Questions 11 - 20

Questions 11-15

Instructions to follow

- Complete the sentences below.
- Write NO MORE THAN TWO WORDS for each answer.

- Many¹¹..... happen around cars.
- Night time travel on¹²..... should be avoided.
- In the event of a break-down in a lonely place, wait in the car for help from a police car or another¹³.....
- When being followed, if there is no police station nearby, find an open garage or store or go straight to an¹⁴.....
- The police station is located on the¹⁵..... Between the canal street and the cockleshell court

Questions 16-20

Instructions to follow

- Choose your answers from the box and write the letters A-E next to questions 16-20.

Match the toxic gases in the box to the effects below.

List of toxic gases

- A carbon dioxide



- B nitrogen oxide
- C carbon monoxide
- D hydrogen sulphide
- E Low oxygen air

List of effects

16 People suffer mental impairment

- A B C D E

17 It hurts the lungs

- A B C D E

18 It makes you breathe faster

- A B C D E

19 You cannot see it or smell it

- A B C D E

20 It numbs the respiratory tract

- A B C D E



Section 3

Questions 21 – 30

Questions 21 - 25

Instructions to follow

- Write **NO MORE THAN ONE WORD** in each gap

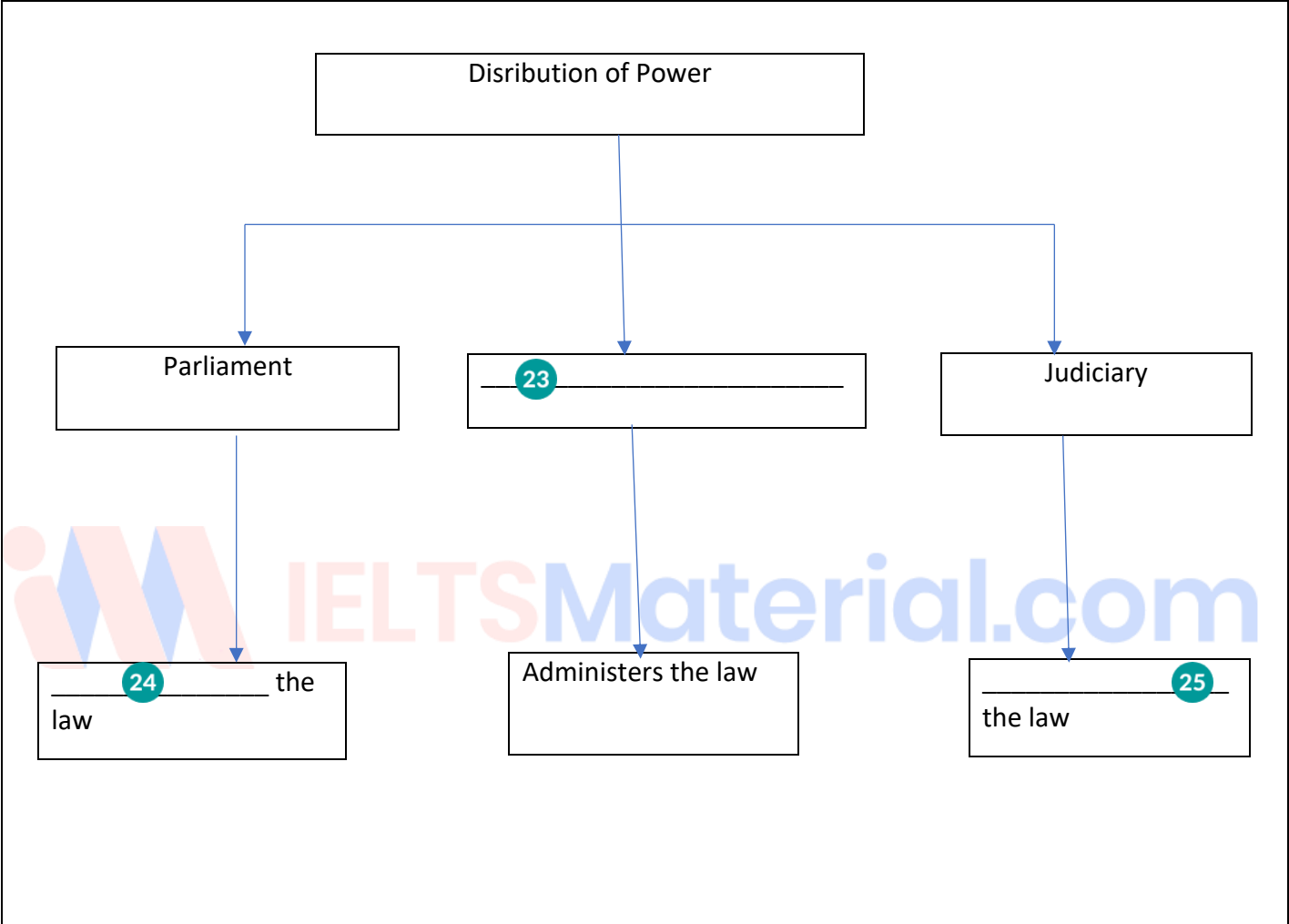
New Zealand Government System

- New Zealand system of government = a constitutional²¹.....
- Elected House of Representatives = Parliament
- Queen's representative – Governor²².....

Questions 23 – 25

Instructions to follow

- Complete the flow chart below:
- Write **ONE WORD ONLY** in each gap.





Questions 26 - 30

Instructions to follow

- Choose the correct letters A, B or C.

26 A constitution containing rules for governing is

- A a written document.
- B still a controversial form.
- C an issue passed by Parliament.

27 New Zealand has some unwritten

- A constitutions.
- B simple laws.
- C conventions.

28 A parliament with only one chamber is called

- A House of Representatives.
- B Upper House.
- C Unicameral.

29 New Zealand's voting system is known as

- A Member of Political Party.
- B Member Proportional Representation.
- C Member of Parliament Representatives.

30 Political parties are represented proportionally in parliament according to

- A the share of votes gained in the election.



- B the share of votes in preferred political party.
- C the share of votes in every party





Section 4

Questions 31 - 40

Questions 31 - 36

Instructions to follow

- Choose SIX answers from the list below and write the correct letter A-F , next to Questions 31-36.

Which of the following descriptions is appropriate for the hat color below?

List of hat color

- A Black
- B Blue
- C Green
- D Red
- E White
- F Yellow

List of description

- A creative response - be inventive: **31** _____
- An emotional response - use intuition: **32** _____
- A managerial response - like control: **33** _____
- An optimistic response - be encouraging: **34** _____
- A pessimistic response - be wary: **35** _____
- A rational response - focus on data: **36** _____

Questions 37 - 40

Instructions to follow

- Write NO MORE THAN TWO WORDS in each gap.



The stepladder technique

Step 1



.....³⁷..... Members presented the task

Step 2



A³⁸..... of two members is created

Step 3



third member added; discuss³⁹.....together

Step 4



Repeat the process adding fourth member

Step 5





All members reach a/an⁴⁰.....





Practice Test 39

Section 1

Questions 1 - 10

Instructions to follow

- ▶ Listen to [audio 39](#) and answer the questions below.
- Complete the gap.

Notes on Adult education Classes

- Number of classes: 7 per week
- Tuesday: -¹.....(6- 7:30 PM)
- + limited space: no more than²..... Participants
- Book Club
- + must read³..... Books
-⁴..... Group
- + learn about local events last century
- Wednesday: - Scrabble club (2 -⁵.....)
- + Popular
- Thursday: - Chess night
- + serious
-⁶.....
- For special occasions
- Adult learners' Week:
- no cost but must make⁷.....



- + September 1 – 8
- Techno Expo
- + learn how to use**8**..... tools
- + learn about online security issues and online entertainment
- + Monday, 1 - 4: 30 pm
-**9**.....
- + consider values
- + learn how to attain harmony
- + Wednesday, 1 - 4.30 pm
- Venue:**10**.....





Section 2

Questions 11 - 20

Questions 11-14

Instructions to follow

- Choose the correct letter.

11 Most infants are hurt

- A at the supermarket.
- B at home.
- C in car accidents.

12 Children should learn good safety habits from

- A their pre-school teachers.
- B television programs.
- C their parents.

13 Why are kitchens more dangerous for infants than adults ?

- A They may get stood on.
- B They may get burnt.
- C They may cut themselves.

14 Poisons should never be kept

- A in glass drink bottles.
- B within reach of adults.



c in their original containers.

Questions 15-16

Instructions to follow

- Choose the correct answer.

Which TWO items of playground equipment pose the most danger for children ?

- A Roundabouts
- B Slides
- C Swings
- D Seesaws
- E Climbing frames

Questions 17-20

Instructions to follow

- Complete the information below.
- Write NO MORE THAN THREE WORDS for each answer.

- If you are bathing the baby, let the phone¹⁷.....
- If you can install protective¹⁸.....to stop a child from poking things into a powerpoint.
- The parent should go¹⁹..... to smoke a cigarette
- The parents shouldn't leave infants alone in a room with²⁰.....



Section 3

Questions 21 - 30

Questions 21 - 26

Instructions to follow

- Complete the summary below.
- Write NO MORE THAN TWO WORDS in each gap.

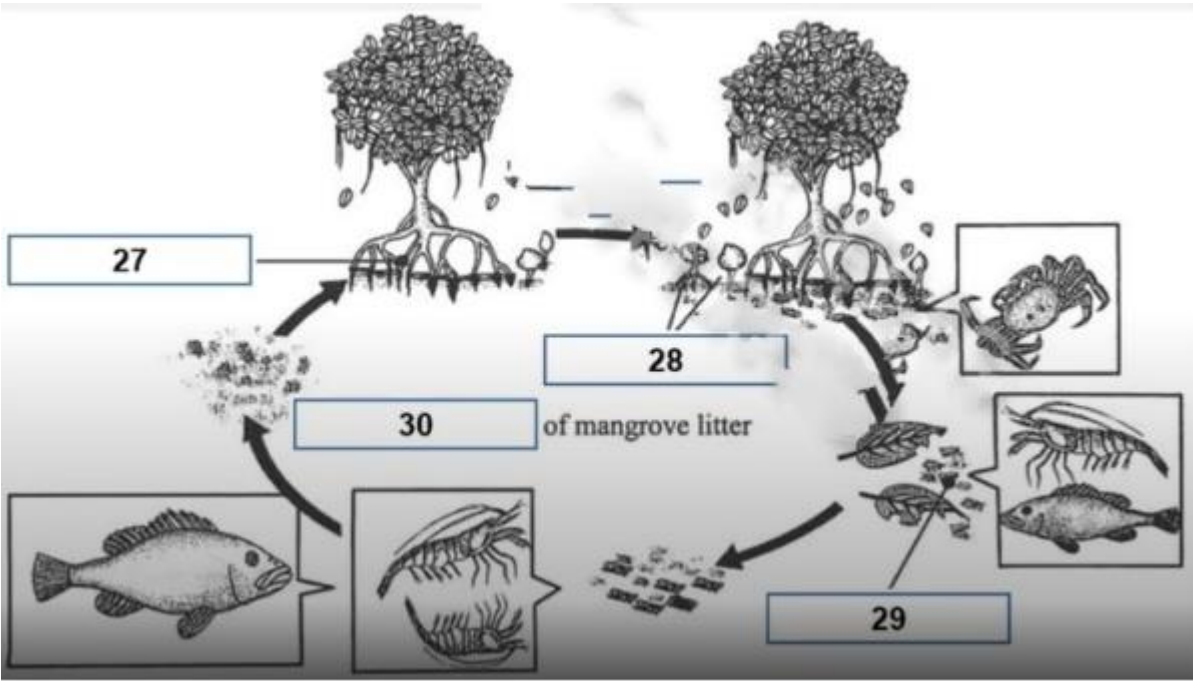
Habitat on Wetlands

A wetland is an area where the soil is typically water-logged. Plants and animals living there depend on the wetness for their²¹..... Draining swamps is a widespread occurrence which kills off wildlife and, consequently, wetlands are²²..... worldwide. It is a feature of wetlands that conditions vary according to²³..... Water-tolerant plants grow both in and out of the water and water - levels are usually quite²⁴..... Wetlands naturally occur between land and water and become²⁵..... for various wildlife during very dry periods. They also act as nurseries for different kinds of animal life. Wetlands are known to upgrade the water's²⁶..... by removing pollutants.

Questions 27 - 30

Instructions to follow

- Complete the diagram below.
- The process diagram has four gaps. Choose the correct letter, A - H. and move it into the suitable place.



- A ecosystems
- B Green leaves
- C Decomposed litter
- D Nourishment cycle
- E Seedlings
- F Roots in the air
- G Aerial stems
- H Tree seeds

27 _____

- A
 B
 C
 D
 E
 F
 G
 H

28 _____



- A
- B
- C
- D
- E
- F
- G
- H

29 _____

- A
- B
- C
- D
- E
- F
- G
- H

30 _____

- A
- B
- C
- D
- E
- F
- G
- H





Section 4

Questions 31 - 40

Instructions to follow

- Write **ONE WORD ONLY** in each gap.

Meteorology

- Elements which produce weather:

- +³¹.....
- + troposphere
- + water vapour
- +³².....

- Different types of cloud formation:

- + cumulus is a low cloud layer with white color and³³..... shape
- + stratus is a grey cloud with³⁴..... appearance
- +³⁵..... is considered as ground clouds
- + Cirrus is a high cloud layer with wispy,³⁶..... shape
- + cumulonimbus is the highest cloud layer, connected to the troposphere
.....³⁷..... hailstones, heavy rain, tornadoes, etc.



- Old assumption: large dust particles → bigger³⁸..... → more rain
- New research: more dust -----> less rain (because water too dispersed to form³⁹.....)
- Conclusion: loss of topsoil in nearby areas → progressive⁴⁰.....of deserts






Practice Test 40

Section 1

Questions 1 - 10

Instructions to follow

 Listen to [audio 40](#) and answer the questions below.

Questions 1-6

Instructions to follow

- Complete the notes below. Write NO MORE THAN ONE WORD AND/ OR A NUMBER for each answer.

Small claims tribunal – Claim form

Claimant's name: Emily-Jane Appleby

Address: 1 Yeronga Street, **1**

Postcode: 4105

Telephone No. (home): **2**

Respondent: **3**



Company name: ABC appliances ltd

Address:⁴..... avenue, Bardon

Postcode:⁵.....

Telephone no. (work): 72324681

Date (of transaction): 3rd Feb, 2011

Guarantee:⁶.....

Questions 7-10

Instructions to follow

- Complete the notes below.
- Write NO MORE THAN TWO WORDS AND/OR A NUMBER for each answer.

Details of the claim:

Goods:⁷.....
 – ('Mallard' brand, 'Whisper' model, serial no. XY303)

Agreed to pay:⁸..... pounds

Advantages:

- Uses less energy because it has shorter cycle
- Reduces the amount of⁹..... used
- Whisper quiet

Complaint:

- the cycle is longer and the appliance is very¹⁰.....



Section 2

Questions 11-20

Instructions to follow

- Complete the table below.
- Write NO MORE THAN TWO WORDS AND/OR A NUMBER for each answer.

- The coach is comfortable because it is¹¹.....
- After all passengers are aboard, the coach will make its first stop at¹²..... Island.
- The 'Tree Top Walk' is above a¹³.....
- Passengers will have a¹⁴..... with the alpacas before boarding the bus for home.

Dreamtime Tours	
Bookings at ¹⁵ Or Tel: 0755624402	
..... ¹⁶ Tour	
SUNDAY, MONDAY, FRIDAY	
Cost	Full day tour 280Km DEPARTS:
Adult ¹⁷ \$37.00	Coolangatta 7.50 am
..... \$33.00	Burleigh 8.10 am
Child (4-14 years) \$10.00	Surfers Paradise ¹⁸
Family \$94.00 (2 adult & 2 children)	Labrador 8.45 am
Prices include ¹⁹ Only	
Free luck up from your resort, hotel, or motel	



*Not included in fare: Optional tours, luncheons, morning and afternoon tea (unless otherwise specified), 20
Meals and refreshments are available at all stops (at your own cost).





Section 3

Questions 21 - 30

Questions 21 - 25

Instructions to follow

- Choose the correct letters. A, B or C.

21 According to the liaison officer volunteers help

- A improve language program.
- B provide quality education.
- C staff members in education system.

22 Volunteers help students check and correct

- A written responses.
- B assignments.
- C presentation reports

23 What aspect of students' self-management can volunteers assist greatly with improving?

- A organizational skills
- B problem-solving skills
- C Independent thinking skills

24 What will volunteers try to develop in the students so that they exert themselves more?

- A strong determinations



- B enthusiasm for personal work
- C hard work and diligence

25 What is it that teachers have that allows them to respond to individual student requirements?

- A exchange of information and skills
- B many different teaching styles
- C partnerships between teachers

Questions 26 - 30

Instructions to follow

- Choose FIVE answers from the below and write the correct letter. A-H next to Questions 26-30.

Which of the following phrases is appropriate for the contents below?

List of phrases

- A vocational learning experiences
- B practical components
- C self-learning software
- D academic background
- E marine studies
- F interesting developments
- G scholastic competitions
- H building and construction

List of contents

- Sharon and Lester have different: 26
- Sharon and Lester help students': 27
- The program is well underway: 28
- The liaison officer is impressed by: 29
- Students are encouraged to take part in: 30



Section 4

Questions 31 - 40

Instructions to follow

- Complete the gap.

Anxiety

General information

- someone in an anxiety state has worse anxiety³¹..... than normal
- a phobia may stem from heredity or³²..... problems
- The reason for the final breakdown is generally linked with³³.....
- occurrences like the loss of a loved one or a health crisis

Phobic states

- **Agoraphobia:** fears leaving the home³⁴.....
- **Claustrophobia:** fears small³⁵.....
- **Social phobia:**
 - + feels extremely shy in the³⁶..... of people
 - + becomes.....³⁷.....in front of other people
 - + gets sweaty.....³⁸.....of the body
- **Single phobia:**
 - + has a deep-seated³⁹.....to a particular creatures (eg: Dogs, cats, spiders etc)
 - + fears of the.....⁴⁰.....



Practice Test 41

Section 1

Questions 1 – 10

Questions 1 – 6

Instructions to follow

- Listen to [audio 41](#) and answer the questions below
- Complete the gap.

Membership Application Form

Membership time: 7 years

Type of ID: 1

ID No.: 2

Family name: Black

Other name: Gavin Raymond

Date of birth: January 22, 1973

ID expiry date: 3, 2012

Address: 4St, Meadowbank

Class of vehicle: 5

Endorsements: None

Convictions: 6 (1993)



Questions 7 - 10

Instructions to follow

- Complete the table below
- Write NO MORE THAN TWO WORDS AND/OR A NUMBER in each gap.

Type7.....	Bronze	Silver	Gold
Standard care		5% discount	7.55 discount	50% discount off8.....
Insurance		\$10 off fee	\$20 off fee	Free9.....
Personal loans	0.25% reduction	0.5% reduction10..... reduction	1.25% reduction



Section 2

Questions 11 - 20

Questions 11 – 16

Instructions to follow

- Choose the correct letters A, B or C.

11 Diners can be served inside the restaurant or

- A in the courtyard.
- B in the gardens.
- C in the terrace.

12 Visitors can put on their swimsuits in order to

- A play on the beach
- B swim on the beach
- C play in the water spray areas.

13 The Cottage houses a museum,

- A A cinema room and information centre.
- B information centre and homestead model.
- C homestead model and cinema room.



- 14 The Garden Nursery is the place to buy
- A handicrafts and statues
 - B Garden sculptures and ornaments.
 - C handmade souvenirs and pots.

- 15 The Wood Crafting Shed is a great place to buy
- A Garden accessories and wooden products.
 - B wooden products and toys
 - C Toys and garden accessories

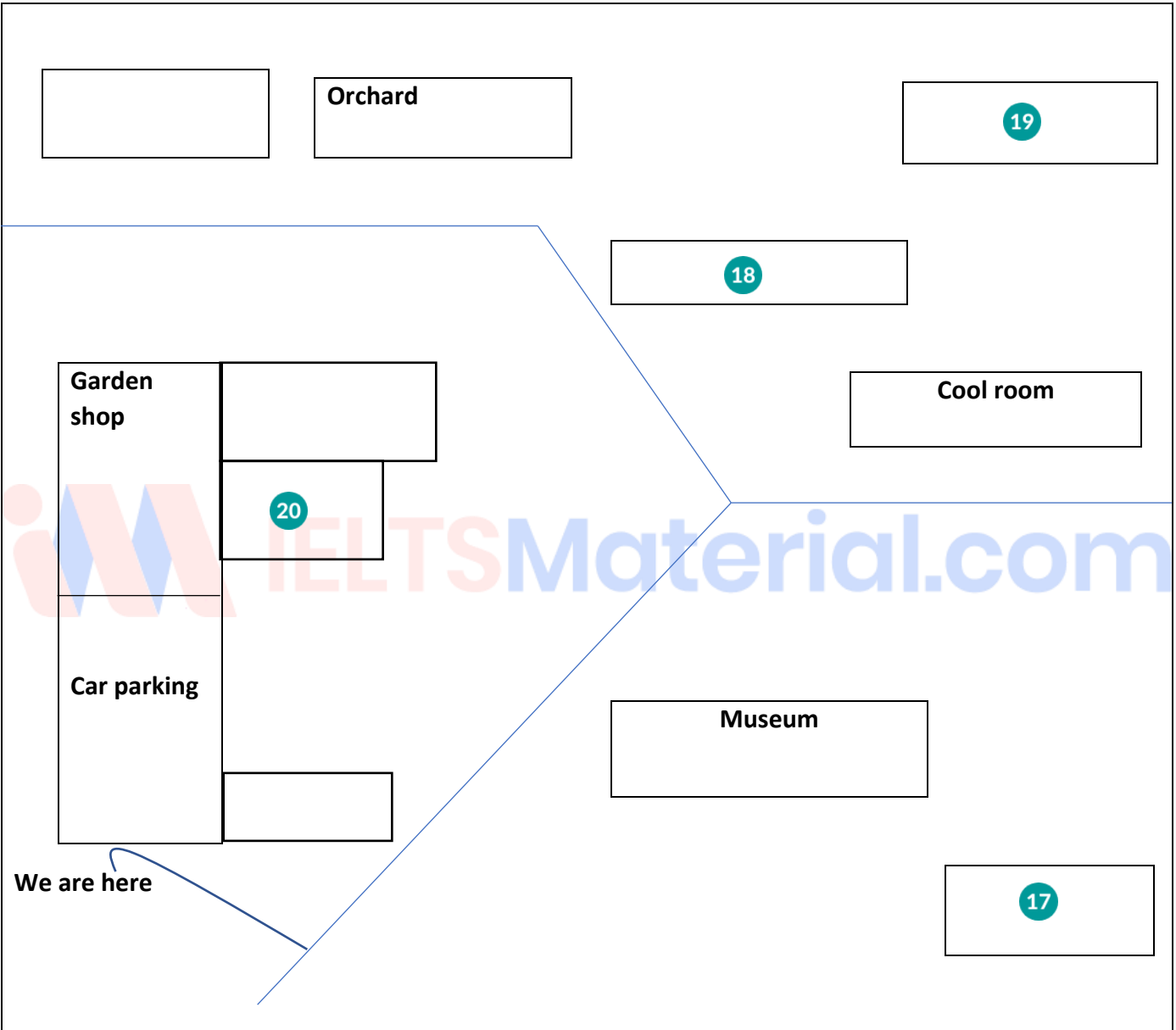
- 16 The avocado fruit at Summerland is picked by

- A machine.
- B hand.
- C both machine and hand.

Questions 17 -20

Instructions to follow

- The map has four gaps. Choose the correct letter A- H and move it into the suitable gap.



**List of Places**

- A Avacado Packing shed
- B Playground
- C Cartoon Manufacturing shed
- D Woodcutter's craftroom
- E Gift shop
- F Administration building
- G Macadamia dehusking shed
- H Picnic area

17 _____

- A B C D E F G H

18 _____

- A B C D E F G H

19 _____

- A B C D E F G H

20 _____

- A B C D E F G H



Section 3

Questions 21 - 30

Questions 21 – 25

Instructions to follow

- Write **ONE WORD ONLY** in each gap.

- In hydroculture, plants are grown with their roots in water so²¹.....is necessary for the upper part of the plant.

- LECA is made from²².....

-The plant would get through the²³.....by making a hole in it.

- The plants are then nourished with a nutrient²⁴.....in a container

- A layer of litter is supported by a rigid²⁵.....

Questions 26 - 27

Instructions to follow

- Choose TWO letters A- E.

Which TWO kinds of products are especially suited to the nutrient film technique?

- A peas
- B beans
- C potatoes



- D yams
- E tomatoes

Questions 28 - 30

Instructions to follow

- Choose THREE letters A- F.

Which of the THREE following things correctly describes a substratum?

- A potential failure in changing system
- B only adaptable to innovative equipments
- C Mineral wool
- D rock
- E paper fibre



Section 4

Questions 31- 40

Instructions to follow

- Complete the sentences.

The Grand Old Duke of Newyork

General background of Frederick

- Frederick was the same of the duke made famous in a well-known³¹.....
- Frederick was aged³²..... when he was sent to war
- his battles against the³³..... ended in total disaster
- In 1798, George III gave his son as a/an³⁴..... with the ranks of the military
- Frederick should not be held wholly accountable for failing: the³⁵.....
of his fighters made victory difficult to achieve
- the people Frederick commanded were mostly old men, new conscripts or³⁶.....

The Duke of York

- wanted to enlist better types of³⁷.....
- made the army better by bringing in chaplains, medics, and veterinary³⁸.....
- established a college for preparing army.....³⁹.....
- Gave up the position of Commander-in-Chief in 1807 because of a⁴⁰.....



Answer Keys

Listening Test 1

Section 1		Section 2		Section 3		Section 4	
Question	Answer	Question	Answer	Question	Answer	Question	Answer
1	C	11	Military	21	A	31	Symbolical
2	A	12	Educate	22	C	32	First
3	A	13	Personal information	23	B	33	Warmth
4	B	14	Postings	24	Travel	34	Doorway
5	JGW 1100536	15	Bullying	25	Skills	35	Daughter
6	Harbour	16	Homework	26	Subjects	36	Lamp
7	Pearce	17	G	27	Degree	37	Inventor
8	Farina	18	D	28	Employment	38	Manuscript
9	First	19	A	29	B	39	Bicycle
10	November 15	20	F	30	E	40	Exhibit



Listening Test 2

Section 1		Section 2		Section 3		Section 4	
Question	Answer	Question	Answer	Question	Answer	Question	Answer
1	Matthew	11	Goals	21	C	31	Food
2	4126	12	Personalised report	22	B	32	Fishing
3	Creative Writing	13	Stress	23	A	33	Forestry
4	Family friends	14	Calculators	24	A	34	Destruction
5	Peer tutor	15	Skill level	25	C	35	Genetic
6	Tennis coach	16	Stop smoking	26	B	36	Climate
7	C	17	Back	27	C	37	Policy
8	B	18	Changes	28	Booth	38	Network
9	B	19	Serious	29	Details	39	Cost-effective
10	A	20	Plan	30	Voice	40	Infrastructure



Listening Test 3

Section 1		Section 2		Section 3		Section 4	
Question	Answer	Question	Answer	Question	Answer	Question	Answer
1	OOL 238 1420	11	C	21	A	31	Evidence
2	21 May	12	B	22	B	32	Earthquake
3	Deluxe	13	A	23	B	33	Investigation
4	Pillows	14	Transaction	24	C	34	Ash
5	3 Nights	15	Bonus	25	E	35	Progress
6	D	16	Simple	26	Straw	36	Collapse
7	G	17	30 June	27	Paper clips	37	Rainfall
8	F	18	Secure	28	Rubber band	38	Roofs
9	C	19	Bonds	29	Caps	39	Oxygen
10	A	20	Income	30	Heavier	40	temperature



Listening Test 4

Section 1		Section 2		Section 3		Section 4	
Question	Answer	Question	Answer	Question	Answer	Question	Answer
1	ZQW 5009	11	B	21	17th century	31	Hydrologic
2	2500cc	12	A	22	Five	32	Efficient
3	22 august	13	C	23	Viewpoints	33	Noise
4	Jack 1897	14	C	24	Conflicts	34	Reliable
5	\$15000	15	B	25	Moderator	35	Stability
6	Son-in-law	16	A	26	Format	36	Intake
7	Family	17	Achievable	27	Biographical	37	Generator
8	Photocopy	18	Work out	28	Gesture	38	Lines
9	Record	19	Resources	29	Summary	39	Stream
10	Temporary	20	Progress	30	Applause	40	Consumers



Listening Test 5

Section 1		Section 2		Section 3		Section 4	
Question	Answer	Question	Answer	Question	Answer	Question	Answer
1	Industries	11	Job	21	B	31	B
2	Transport	12	Money	22	E	32	C
3	12,000	13	Qualifications	23	C	33	B
4	Forty	14	Grades	24	D	34	A
5	Wheelchair	15	A	25	E	35	A
6	July	16	C	26	Shyness	36	C
7	Walls	17	B	27	Alienation	37	Confusion
8	Kitchen	18	A	28	Strangers	38	Country
9	Carpet	19	B	29	Negative	39	English
10	3 years	20	C	30	Guidance	40	Colonial



Listening Test 6

Section 1		Section 2		Section 3		Section 4	
Question	Answer	Question	Answer	Question	Answer	Question	Answer
1	A	11	10 am	21	Observation	31	F
2	C	12	4.5 pounds	22	Performance	32	B
3	A	13	Cloakroom	23	Strategies	33	G
4	A	14	Items	24	Background	34	D
5	B	15	Gallery	25	Bibliography	35	Energy
6	Jewels	16	D	26	Procedures	36	Soil
7	Wheel	17	G	27	Techniques	37	Water
8	Photos	18	E	28	Characteristics	38	Quality
9	Three	19	B	29	Statistical	39	Hand
10	Traditional	20	A	30	Format	40	India



Listening Test 7

Section 1		Section 2		Section 3		Section 4	
Question	Answer	Question	Answer	Question	Answer	Question	Answer
1	Sylvia	11	B	21	ED 995	31	Attacks
2	England	12	A	22	Document	32	Illness/disease
3	26 July	13	A	23	Socio-economic	33	Active
4	Two	14	C	24	Impact	34	Defence
5	Holiday	15	Tramping	25	30%	35	Blood
6	Apartment	16	Walking	26	Essay	36	Infected
7	Secure	17	Organizer	27	E	37	Experiment
8	Motorway	18	Variable	28	G	38	Toxins
9	Palm	19	Mystery	29	C	39	Damaged
10	1500	20	Chairman	30	A	40	Naked



Listening Test 8

Section 1		Section 2		Section 3		Section 4	
Question	Answer	Question	Answer	Question	Answer	Question	Answer
1	Bowen	11	2 days	21	A	31	C
2	4 Lion	12	Home	22	C	32	C
3	09954721822	13	240	23	A	33	Man
4	History	14	Fishing	24	B	34	Founder
5	Computer	15	Adventure	25	B	35	Patterns
6	Hospital	16	Boots	26	B	36	England
7	Tour	17	C	27	B	37	Organisms
8	Swimming	18	B	28	B	38	B
9	Piano	19	A	29	B	39	C
10	June 28	20	A	30	C	40	G



Listening Test 9

Section 1		Section 2		Section 3		Section 4	
Question	Answer	Question	Answer	Question	Answer	Question	Answer
1	3 hours	11	Head	21	C	31	Feed
2	Library	12	Flu	22	E	32	Leather
3	Cold	13	1694	23	H	33	Restrictions
4	40	14	Factories	24	B	34	Ships
5	Cupboard	15	Millionaire	25	G	35	England
6	Fridge	16	C	26	Laptops	36	Built
7	Plates	17	C	27	Printers	37	Poverty
8	Napkins	18	A	28	Report writing	38	C
9	Supermarket	19	C	29	Marketing	39	E
10	10 Rucksack	20	B	30	Individual	40	F



Listening Test 10

Section 1		Section 2		Section 3		Section 4	
Question	Answer	Question	Answer	Question	Answer	Question	Answer
1	Keep-fit	11	B	21	C	31	Head
2	Swimming	12	G	22	A	32	Culture
3	Yoga	13	C	23	B	33	Money
4	Salad	14	A	24	B	34	Psychology
5	500	15	E	25	C	35	Process
6	1	16	D	26	C	36	Thief
7	4.30	17	19 th	27	Weight	37	Safety
8	180	18	7 pm	28	Exercise	38	Deaths
9	Assessment	19	Thursday	29	(French) fries	39	Profits
10	Kynchley	20	18	30	Soft drinks	40	Backers



Listening Test 11

Section 1		Section 2		Section 3		Section 4	
Question	Answer	Question	Answer	Question	Answer	Question	Answer
1	A	11	B	21	A	31	Demolish
2	B	12	B	22	E	32	Consultation
3	C	13	Mineral	23	F	33	Self-help services
4	C	14	Soft drink	24	G	34	Services
5	B	15	Processed foods	25	Standing	35	Invest
6	Ready	16	Plastic	26	Stick	36	Community
7	Unit 14	17	A	27	White	37	Employment
8	Paradise	18	C	28	Food	38	Freedom
9	45591332	19	A	29	Calm	39	Activities
10	\$100	20	C	30	Social	40	Understanding



Listening Test 12

Section 1		Section 2		Section 3		Section 4	
Question	Answer	Question	Answer	Question	Answer	Question	Answer
1	2 km	11	A	21	A	31	D
2	Cheap stay	12	B	22	C	32	F
3	Festival	13	A	23	B	33	G
4	Musicians	14	Line manager	24	A	34	Leisure
5	History	15	Positive	25	C	35	Exports
6	Sport	16	Special offer	26	A	36	Ancillary
7	C	17	Newsletter	27	Essay	37	Characteristics
8	A	18	Progress meetings	28	800	38	Equitation
9	B	19	B	29	Findings	39	Certificates
10	C	20	E	30	9	40	Postgraduates



Listening Test 13

Section 1		Section 2		Section 3		Section 4	
Question	Answer	Question	Answer	Question	Answer	Question	Answer
1	Greives	11	1992	21	A	31	A
2	Holiday	12	Hospital	22	B	32	F
3	FT 4551	13	Numbers	23	C	33	D
4	3	14	Train	24	B	34	B
5	August 16	15	Food	25	C	35	H
6	11	16	Square	26	Research	36	Stock
7	Super	17	Health	27	Scripts	37	Chicks
8	Balcony	18	A	28	Time	38	Parents
9	Demonstration	19	C	29	D	39	Primary
10	River	20	H	30	E	40	Major



Listening Test 14

Section 1		Section 2		Section 3		Section 4	
Question	Answer	Question	Answer	Question	Answer	Question	Answer
1	Super	11	B	21	A	31	Spies
2	August 25	12	A	22	B	32	Map
3	Carpet	13	C	23	A	33	Data
4	165 pounds	14	A	24	C	34	Climate
5	Tidy	15	C	25	B	35	Lift
6	Quite good	16	B	26	A	36	Protection
7	1	17	F	27	Meaningless	37	Framework
8	Thursdays	18	D	28	Capital	38	Airliners
9	Air conditioners	19	B	29	Color	39	Crashes
10	Music playing	20	E	30	Associations	40	Cargo



Listening Test 15

Section 1		Section 2		Section 3		Section 4	
Question	Answer	Question	Answer	Question	Answer	Question	Answer
1	Select	11	C	21	Entertainment	31	C
2	27.01.1973	12	A	22	Telephone	32	A
3	15 river side	13	C	23	Thirty	33	A
4	2 weeks	14	H	24	Same	34	B
5	616295	15	F	25	Jazz	35	Cattle
6	Engineer	16	B	26	Classical	36	Sand
7	Siti	17	D	27	Concerts	37	Scotland
8	2,000	18	Field	28	Departments	38	Outside
9	Month	19	Footbridge	29	Club	39	Local
10	Internet	20	Viewpoint	30	Opera	40	Tops



Listening Test 16

Section 1		Section 2		Section 3		Section 4	
Question	Answer	Question	Answer	Question	Answer	Question	Answer
1	Classical	11	C	21	London museum	31	C
2	Jonathan	12	B	22	Telephone interviews	32	A
3	January 21 st	13	A	23	90 people	33	A
4	Island	14	A	24	Ceramic	34	B
5	1	15	Gardening art	25	Peru	35	C
6	Queen	16	Pear	26	Surface	36	A
7	02046751222	17	Watermill	27	Local clay	37	A
8	Tutor	18	Refreshments	28	Dried	38	B
9	Mother	19	River cotton	29	Sorting	39	B
10	1000	20	strawberries	30	The rich people	40	D



Listening Test 17

Section 1		Section 2		Section 3		Section 4	
Question	Answer	Question	Answer	Question	Answer	Question	Answer
1	Unfriendly	11	B	21	A	31	Religions
2	Noisy	12	A	22	B	32	Nature
3	23.50	13	C	23	A	33	Flight
4	Insects	14	B	24	B	34	Stars
5	Bathrooms	15	A	25	A	35	Practical
6	Party	16	A	26	A	36	Education
7	Shad forth	17	E	27	Background	37	King
8	Towel	18	C	28	Theory	38	Entertainment
9	Breakfast	19	F	29	Cost(s)	39	Opera
10	Kitchen	20	E	30	Time	40	Electricity



Listening Test 18

Section 1		Section 2		Section 3		Section 4	
Question	Answer	Question	Answer	Question	Answer	Question	Answer
1	3000 words	11	Water	21	D	31	Supportive
2	Surprising	12	Ride	22	B	32	Attention
3	16	13	Noon	23	Math(s)	33	Quite
4	1 st August	14	Sharks	24	Theory	34	Consistent
5	Compass	15	Birthday	25	Engines	35	Graphics
6	Post	16	Government	26	Seminars	36	Tone
7	Authors	17	Quiz	27	A	37	Silence(s)
8	Online	18	E	28	B	38	Verbs
9	Public	19	C	29	C	39	Repeat
10	Spain	20	B	30	C	40	Predicting



Listening Test 19

Section 1		Section 2		Section 3		Section 4	
Question	Answer	Question	Answer	Question	Answer	Question	Answer
1	Wife	11	B	21	20 balloons	31	795
2	Staff	12	A	22	Measurement(s)	32	Tail
3	Students	13	A	23	Rock	33	Floor
4	10 th December	14	A	24	Crystals	34	Smell
5	6	15	B	25	String	35	A
6	Dictionaries	16	180	26	Light	36	A
7	Maker	17	Nearest station	27	H	37	B
8	Tapes	18	Local history	28	B	38	B
9	Photos	19	690	29	E	39	B
10	Speech	20	Walking club	30	C	40	E



Listening Test 20

Section 1		Section 2		Section 3		Section 4	
Question	Answer	Question	Answer	Question	Answer	Question	Answer
1	Jamieson	11	A	21	G	31	Shelter
2	Afternoon	12	B	22	F	32	Oil
3	Communication	13	A	23	A	33	Roads
4	Week	14	C	24	E	34	Insects
5	10	15	River	25	B	35	Grass
6	Suit	16	1422	26	C	36	Water
7	Passport	17	Top	27	C	37	Soil
8	Personality	18	Pass	28	A	38	Dry
9	Feedback	19	Steam	29	B	39	Simple
10	Time	20	Capital	30	D	40	Nests



Listening Test 21

Section 1		Section 2		Section 3		Section 4	
Question	Answer	Question	Answer	Question	Answer	Question	Answer
1	Black	11	Route book	21	Friday	31	Four-month certificate
2	2085	12	900 miles	22	Biology	32	Employment
3	9456 1309	13	North Africa	23	57	33	One-year diploma
4	2020BD	14	A	24	43	34	No qualifications
5	July	15	C	25	Wednesday	35	Six-month certificate
6	B	16	B	26	Recording lectures	36	C
7	D	17	C	27	Skimming	37	F
8	F	18	E	28	French revolution	38	B
9	\$25	19	B	29	Why study history	39	G
10	Next week	20	D	30	Animal language	40	D



Listening Test 22

Section 1		Section 2		Section 3		Section 4	
Question	Answer	Question	Answer	Question	Answer	Question	Answer
1	208 613 2978	11	Contact	21	C	31	Food
2	Vision tech	12	Emergency	22	A	32	Hero
3	Doctor	13	Radio	23	B	33	Feathers
4	Garage	14	Keys	24	C	34	Shells
5	Furniture	15	Locks	25	A	35	Diamond
6	Fridge	16	C	26	G	36	Shark
7	School	17	D	27	A	37	Teeth
8	950 dollars	18	F	28	D	38	Messages
9	Quiet	19	G	29	C	39	Meeting
10	Friend	20	E	30	E	40	Escape



Listening Test 23

Section 1		Section 2		Section 3		Section 4	
Question	Answer	Question	Answer	Question	Answer	Question	Answer
1	Listening	11	C	21	D	31	Narrower
2	Vocabulary	12	A	22	C	32	Garden(s)
3	General	13	B	23	B	33	Superstore(s)
4	15	14	B	24	Third	34	Glass
5	Department	15	C	25	Industry	35	Older
6	May	16	B	26	Plan(s)	36	Waste
7	Week 5	17	E	27	Laboratory	37	Windfarm(s)
8	B	18	G	28	Seminar (s)	38	B
9	D	19	C	29	Pairs	39	C
10	G	20	A	30	Interviews	40	E



Listening Test 24

Section 1		Section 2		Section 3		Section 4	
Question	Answer	Question	Answer	Question	Answer	Question	Answer
1	A radio program	11	Lake	21	Classical history	31	A
2	LS142JW	12	Picnic	22	Compulsory	32	B
3	hennings.co.uk	13	Flowers	23	Object matters	33	B
4	Two/2	14	Twenty/20	24	Classification	34	B
5	Joint membership	15	Motor	25	Coursework	35	C
6	forty-nine/49	16	Art gallery	26	Towns and cities	36	A
7	The union bank	17	Concert hall	27	The origins	37	B
8	15th October	18	2:30	28	Oral	38	A
9	JYZ37	19	C	29	Seminars	39	B
10	Video	20	B	30	Location	40	C



Listening Test 25

Section 1		Section 2		Section 3		Section 4	
Question	Answer	Question	Answer	Question	Answer	Question	Answer
1	3.5 kilograms	11	B	21	20 minutes	31	Mood
2	0.5	12	D	22	Reading	32	Time-consuming
3	37.5 cm	13	Beach shop	23	B	33	Simpler
4	2.5 hours	14	Seating	24	A	34	Media
5	Wireless	15	9:30 am	25	C	35	Card(s)
6	Headphone(s)	16	A	26	A	36	Tourists
7	300	17	B	27	A	37	Directions
8	Bristow	18	A	28	B	38	Mixed
9	09875423387	19	A	29	A	39	3
10	22 nd October	20	C	30	A	40	71



Listening Test 26

Section 1		Section 2		Section 3		Section 4	
Question	Answer	Question	Answer	Question	Answer	Question	Answer
1	Warehouse	11	Forts	21	A	31	Acronym
2	Hitcher	12	Saxon times	22	B	32	Phenomenon
3	Supermarket	13	Woollen cloth	23	A	33	B/G (any order)
4	Bakery	14	Vikings / Viking invasions	24	C	34	B/G (any order)
5	ARW204	15	Financial administration	25	B	35	Chip
6	Adverts/advertisements	16	Three castles	26	C	36	Hole



7	Newspaper	17	Survey	27	B/E IN EITHER ORDER	37	Wavelength
8	Agency	18	Taxes	28	B/E IN EITHER ORDER	38	Three primary colours
9	Tutors	19	Roman walls	29	A/D IN EITHER ORDER	39	Watermarks
10	Feedback	20	(wooden) drawbridge	30	A/D IN EITHER ORDER	40	Organic compound



Listening Test 27

Section 1		Section 2		Section 3		Section 4	
Question	Answer	Question	Answer	Question	Answer	Question	Answer
1	Club	11	Peach-blossom	21	C	31	Acute pain / localized pain
2	Male	12	Square-shaped	22	A	32	CNS / central nervous system
3	Rive	13	Bamboo-pattern cabinets	23	C	33	Spinal cord
4	Tuesday	14	Dessert course	24	B	34	neurons / nerve impulses
5	August	15	(cast) iron columns	25	B	35	Pain signal
6	Dinner	16	Smoke jack	26	C	36	B
7	25	17	(Lotus-shaped) chandeliers	27	F	37	Individual's sensitivity
8	16	18	Servant's room	28	E	38	Anti-inflammatory drugs



9	Modern	19	Carpet	29	D	39	Natural painkiller
10	Hospital	20	Fine silk	30	G	40	30%





Listening Test 28

Section 1		Section 2		Section 3		Section 4	
Question	Answer	Question	Answer	Question	Answer	Question	Answer
1	Jamieson	11	GM / genetically modified	21	A	31	Relative velocities
2	11 th July	12	(free-range) eggs	22	C	32	Direct proportion
3	Waiter(s)	13	£1.59	23	A	33	Action-reaction
4	Sing	14	One third / 1/3 / a third	24	C	34	Zero/0
5	Children	15	Jasmine/lavender	25	B	35	Objects move/object moves
6	Drive	16	C/F (any order)	26	B	36	Magnitude
7	Transport	17	C/F (any order)	27	Sharing	37	Free fall
8	Meal	18	B/E (any order)	28	Education	38	Force of repulsion/ repulsion force
9	Thursday	19	B/E (any order)	29	Settle down	39	Integrity
10	Photo	20	Bottle of wine	30	Gifts	40	Parallel



Listening Test 29

Section 1		Section 2		Section 3		Section 4	
Question	Answer	Question	Answer	Question	Answer	Question	Answer
1	Children	11	Seven white cliffs	21	B	31	Non-renewable
2	4	12	(crystal-clear) lake	22	A	32	Industrial boilers
3	Radio	13	Weather	23	A	33	Release
4	Evening	14	Unexplored/untouched beach	24	C	34	Architectural strategies
5	5 candles	15	Sunbathing	25	B	35	Offshore regions
6	Tuesday	16	Water sports	26	B	36	Kinetic energy
7	Donation	17	Canoes	27	A	37	Volcanic locations
8	Piano	18	life-saving jackets	28	C	38	Iceland
9	Discount	19	Paragliding	29	E	39	Gasoline addictive
10	Singer	20	Fire	30	F	40	2.7%



Listening Test 30

Section 1		Section 2		Section 3		Section 4	
Question	Answer	Question	Answer	Question	Answer	Question	Answer
1	077876345	11	Photo	21	B	31	B
2	27(th) February/Feb	12	Clock in	22	B	32	Wetlands
3	Akendale	13	Cash up	23	A	33	coal mines / digging the earth
4	3,450	14	Stock take	24	C	34	Breeding areas
5	books	15	Log out	25	C	35	North
6	Paintings	16	Third floor	26	C	36	Covered by ice
7	Mirror	17	Swipe	27	G	37	Sense of smell
8	Desk	18	Lockers	28	B	38	Oxygen depletion
9	Leg	19	Black trousers	29	E	39	Eucalyptus oil
10	Plates	20	Nail polish	30	B	40	High sand temperatures



Listening Test 31

Section 1		Section 2		Section 3		Section 4	
Question	Answer	Question	Answer	Question	Answer	Question	Answer
1	Arthritis	11	C	21	B	31	Politics
2	Knee	12	D	22	A	32	Learn
3	10 thousand	13	E	23	C	33	Children's education
4	Mortgage	14	A	24	B	34	Car
5	Competition	15	E	25	D	35	Nursing
6	Cousin	16	B	26	Full-time	36	Crisis
7	Conceited	17	C	27	Term	37	Pensions
8	Contract	18	A	28	Intensive	38	Confidence
9	Steel workers	19	A	29	Diploma	39	Management
10	25 th wedding	20	A	30	Topic	40	Well-informed



Listening Test 32

Section 1		Section 2		Section 3		Section 4	
Question	Answer	Question	Answer	Question	Answer	Question	Answer
1	3	11	Temperate rainforest	21	200	31	A
2	Brakes	12	Shallow water	22	4 Week	32	C
3	Overseas	13	Hot spring	23	8	33	B
4	1500	14	Curious	24	10 Minute	34	layout
5	6:30	15	Fierce	25	Skill(s)	35	Letters
6	88 Princess	16	Solitary	26	Travel	36	Work
7	B	17	Engine	27	A	37	Accuracy
8	C	18	Rope(s)	28	C	38	Speed
9	C	19	Orange	29	B	39	Mile
10	A	20	Pills	30	C	40	Dominant



Listening Test 33

Section 1		Section 2		Section 3		Section 4	
Question	Answer	Question	Answer	Question	Answer	Question	Answer
1	Alex	11	Hobby	21	B	31	5000 bc
2	3	12	Car	22	C	32	Worms
3	8 November	13	Kitchen	23	B	33	Historical evidence
4	5	14	Presents	24	A	34	Ancient Egypt
5	108 Park	15	Elderly	25	A	35	Olive oil
6	Grandmother	16	Projects	26	A	36	Onions
7	Sleeping	17	Internet	27	C	37	Historian
8	Dress	18	Library	28	C	38	Extract
9	Tuesday	19	Active/busy	29	B	39	Middle Ages
10	4 pm	20	twelve	30	C	40	Modern



Listening Test 34

Section 1		Section 2		Section 3		Section 4	
Question	Answer	Question	Answer	Question	Answer	Question	Answer
1	Sharpe	11	Front	21	Plan	31	Inhabitants
2	Beaconsfield	12	Staircase	22	Responsibilities	32	Asia
3	037455793	13	Security	23	Service	33	Civilization
4	MH 66G4	14	Wall	24	Reference	34	Settlers
5	Credit card	15	10	25	Methodology	35	Whalers
6	Gold star	16	C	26	Websites	36	Tents
7	Mid-winter	17	A	27	H	37	Boats
8	16 January	18	B	28	B	38	Dogsled
9	Taxi	19	D	29	G	39	Bowhead
10	Bicycle	20	E	30	E	40	Population



Listening Test 35

Section 1		Section 2		Section 3		Section 4	
Question	Answer	Question	Answer	Question	Answer	Question	Answer
1	14 Hill	11	Club house	21	B	31	Message
2	22 376 76	12	Picnic	22	C	32	Media
3	1 year	13	Prizes	23	F	33	Cost-effective
4	Intermediate	14	Junior	24	A	34	Habits
5	North west	15	8:30 AM	25	C	35	Recognize
6	Vegetarian	16	4	26	B	36	Image
7	Facilities	17	Sunday	27	A	37	Services
8	Garden	18	D	28	C	38	Locations
9	100	19	F	29	A	39	Perfume
10	23 rd March	20	B	30	A	40	Supportive



Listening Test 36

Section 1		Section 2		Section 3		Section 4	
Question	Answer	Question	Answer	Question	Answer	Question	Answer
1	190	11	A	21	Exhibition	31	Empire
2	6 months	12	B	22	Commercial	32	Modern
3	Easy move	13	C	23	Geometric	33	Maize
4	TV	14	Differentiate	24	Slender	34	Bean
5	Microwave/oven	15	Simplified pricing	25	Decoration	35	Social
6	Fridge	16	Creative marketing	26	Streamlined	36	Dyes
7	Gaps	17	Cooking demonstration	27	Horizontal	37	Crafts
8	Jacobs	18	Tree lightings	28	A	38	Leadership
9	4 Lion	19	B	29	C	39	Temples
10	099 547 218 23	20	E	30	A	40	Precious



Listening Test 37

Section 1		Section 2		Section 3		Section 4	
Question	Answer	Question	Answer	Question	Answer	Question	Answer
1	B	11	Breakfast	21	B	31	Crisis
2	C	12	Paintings	22	E	32	Knowledge
3	B	13	Castle	23	Smith brothers	33	Market
4	A	14	Famous people	24	Choosing University courses	34	Obvious
5	15 Sportsman	15	Antique shows	25	Printers limited	35	Director
6	0414658339	16	Old postcards	26	Surviving university	36	Regional
7	igo.com	17	E	27	2004	37	Group
8	B	18	F	28	B	38	C
9	C	19	A	29	E	39	B
10	D	20	D	30	F	40	C



Listening Test 38

Section 1		Section 2		Section 3		Section 4	
Question	Answer	Question	Answer	Question	Answer	Question	Answer
1	40	11	Serious assaults	21	Monarchy	31	C
2	4:05 AM	12	Isolated roads	22	General	32	B
3	Commitments	13	Emergency vehicle	23	Executive	33	B
4	07 Aug	14	Occupied house	24	Makes	34	F
5	Unpack	15	Corner	25	Interprets	35	A
6	Post	16	E	26	A	36	E
7	Carry-on	17	B	27	C	37	individual
8	Suitcase	18	A	28	C	38	Core group
9	L4GBWF	19	C	29	B	39	Options
10	Aisle	20	D	30	A	40	Final decision



Listening Test 39

Section 1		Section 2		Section 3		Section 4	
Question	Answer	Question	Answer	Question	Answer	Question	Answer
1	Writing workshop	11	B	21	Survival	31	Sun/wind
2	Ten	12	C	22	Threatened	32	Wind/sun
3	Prescribed/set	13	A	23	Seasonal fluctuations	33	Puffy
4	History	14	A	24	Shallow	34	Horizontal
5	3:30 PM	15	C	25	Refuge areas	35	Fog
6	Cake decorating	16	E	26	Purity	36	Hair-like
7	Booking	17	Ring	27	F	37	Produce
8	Social networking	18	Plugs	28	E	38	Droplets
9	Work life balance	19	Outside	29	C	39	Raindrops
10	Central library	20	Heaters	30	D	40	Expansion



Listening Test 40

Section 1		Section 2		Section 3		Section 4	
Question	Answer	Question	Answer	Question	Answer	Question	Answer
1	Durham	11	Air-conditioned	21	B	31	Reactions
2	7848 3762	12	Hope	22	A	32	Environmental
3	Trader	13	Rainforest	23	A	33	Personal
4	17 Brown	14	Photo opportunity	24	C	34	Surroundings
5	4065	15	Reception desk	25	B	35	Places/areas
6	6 Months	16	Green Mountain	26	D	36	Presence
7	Washing machine	17	Senior citizen	27	A	37	Uneasy
8	750	18	8:30 AM	28	E	38	Parts
9	Water	19	Coach travel	29	C	39	Aversion
10	Noisy	20	Entrance fees	30	G	40	Dark



Listening Test 41

Section 1		Section 2		Section 3		Section 4	
Question	Answer	Question	Answer	Question	Answer	Question	Answer
1	Driver's license	11	A	21	Support	31	Rhyme
2	AY 196310	12	C	22	Clay	32	Thirty
3	May 19	13	A	23	Cork	33	French
4	29 Sunset	14	B	24	Solution	34	Promotion
5	Motorcar	15	B	25	Mesh/lid	35	Nature
6	Dangerous driving	16	B	26	B	36	Ex-convicts
7	Blue	17	A	27	E	37	Soldiers
8	First vehicle	18	C	28	A	38	Surgeons
9	Car hire	19	G	29	C	39	Officers
10	0.75%	20	E	30	E	40	Scandals



If you score...

0 - 12

you are highly unlikely to get you may get an acceptable an acceptable score under I score under examination conditions and we recommend that you spend a lot of time improving I more practice or lessons your English before you take IELTS

13-26

you may get an acceptable score under examination conditions but we recommended that you think about having more practice or lessons before you take IELTS.

27-40

you are likely to get an acceptable score under examination conditions but remember that different institutions will find different scores acceptable.